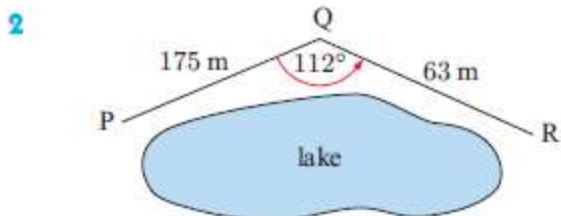
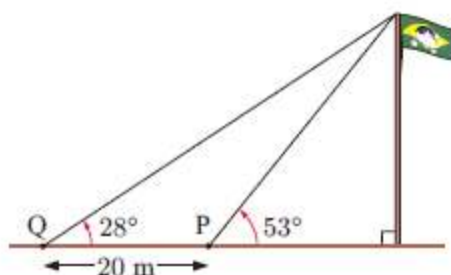


EXERCISE 151

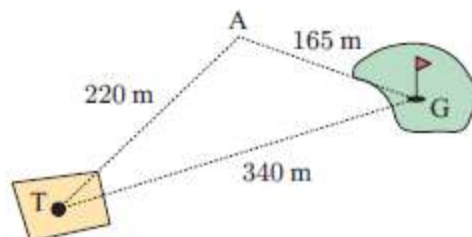
- 1 Rodrigo takes a sighting to the top of the flagpole from point P. He then moves 20 metres further away from the flagpole to point Q and takes a second sighting. The information is shown in the diagram. How high is the flagpole?



A park ranger walks along a trail from P to Q and then to R.

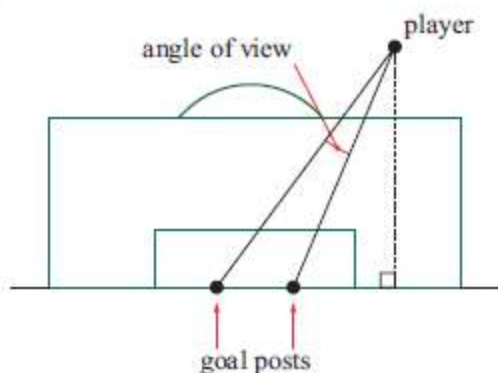
What is the distance in a straight line from P to R?

- 3 A golfer played his tee shot 220 m to point A. His ball was then 165 m from the green. The distance from tee to green is 340 m. Determine the number of degrees the golfer was off line with his tee shot.



- 4 Two yachts P and Q are anchored at different locations at sea. A beacon at B determines that P and Q are 24 km and 21 km away respectively. The yacht at Q measures B and P to be 53° apart. What angle would the yacht at P measure between B and Q?

- 5 A football goal is 5 metres wide. When a player is 26 metres from one goal post and 23 metres from the other, he shoots for goal. What is the angle of view of the goals that the player sees?

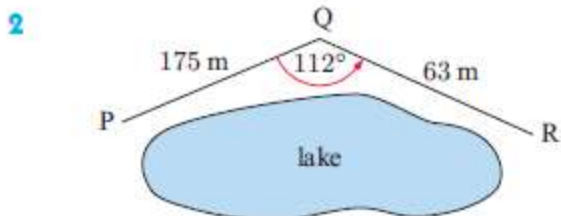
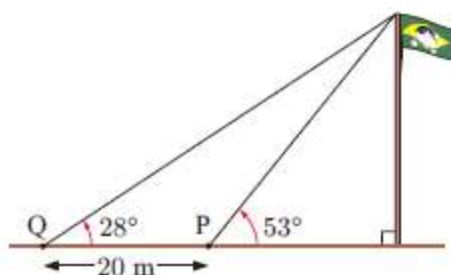


EXERCISE 151

- 1 17.7 m 2 207 m 3 23.9° 4 44.3° 5 9.38°
6 69.1 m 7 a 29.5° b £9047.96
8 a 38.0 m b 94.0 m
9 CA \approx 11.7 km, CB \approx 8.49 km
10 a 74.9 km^2 b 7490 ha 11 9.12 km 12 85.0 mm

EXERCISE 151

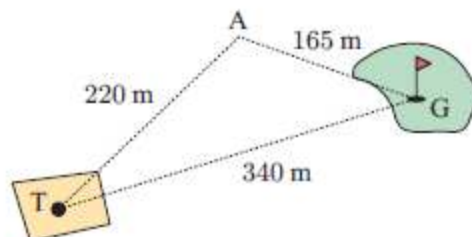
- 1 Rodrigo takes a sighting to the top of the flagpole from point P. He then moves 20 metres further away from the flagpole to point Q and takes a second sighting. The information is shown in the diagram. How high is the flagpole?



A park ranger walks along a trail from P to Q and then to R.

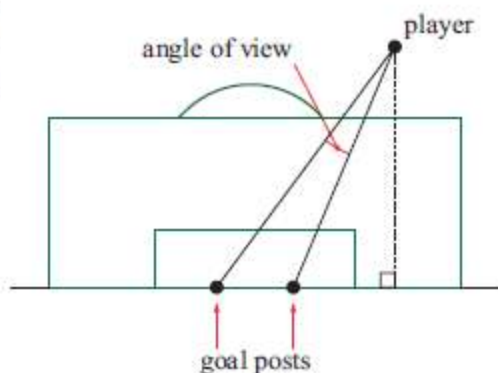
What is the distance in a straight line from P to R?

- 3 A golfer played his tee shot 220 m to point A. His ball was then 165 m from the green. The distance from tee to green is 340 m. Determine the number of degrees the golfer was off line with his tee shot.



- 4 Two yachts P and Q are anchored at different locations at sea. A beacon at B determines that P and Q are 24 km and 21 km away respectively. The yacht at Q measures B and P to be 53° apart. What angle would the yacht at P measure between B and Q?

- 5 A football goal is 5 metres wide. When a player is 26 metres from one goal post and 23 metres from the other, he shoots for goal. What is the angle of view of the goals that the player sees?

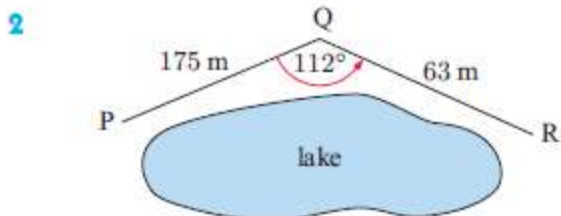
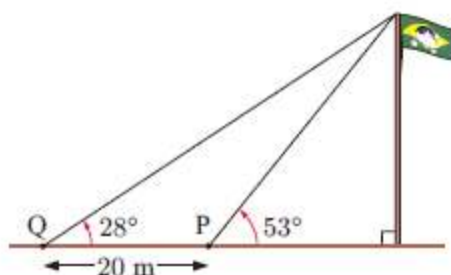


EXERCISE 151

- 1 17.7 m 2 207 m 3 23.9° 4 44.3° 5 9.38°
6 69.1 m 7 a 29.5° b £9047.96
8 a 38.0 m b 94.0 m
9 CA \approx 11.7 km, CB \approx 8.49 km
10 a 74.9 km^2 b 7490 ha 11 9.12 km 12 85.0 mm

EXERCISE 151

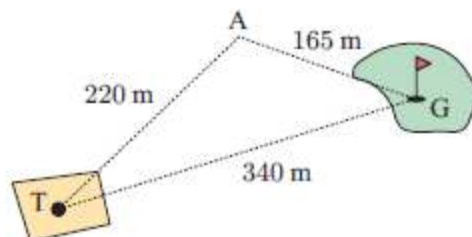
- 1 Rodrigo takes a sighting to the top of the flagpole from point P. He then moves 20 metres further away from the flagpole to point Q and takes a second sighting. The information is shown in the diagram. How high is the flagpole?



A park ranger walks along a trail from P to Q and then to R.

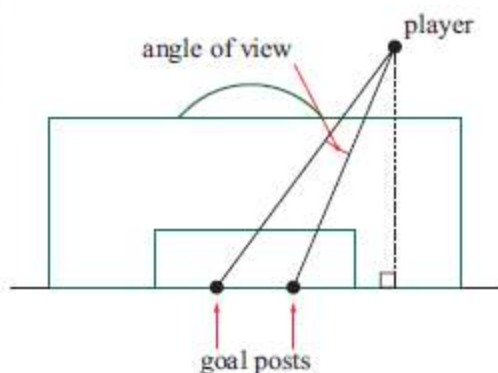
What is the distance in a straight line from P to R?

- 3 A golfer played his tee shot 220 m to point A. His ball was then 165 m from the green. The distance from tee to green is 340 m. Determine the number of degrees the golfer was off line with his tee shot.



- 4 Two yachts P and Q are anchored at different locations at sea. A beacon at B determines that P and Q are 24 km and 21 km away respectively. The yacht at Q measures B and P to be 53° apart. What angle would the yacht at P measure between B and Q?

- 5 A football goal is 5 metres wide. When a player is 26 metres from one goal post and 23 metres from the other, he shoots for goal. What is the angle of view of the goals that the player sees?

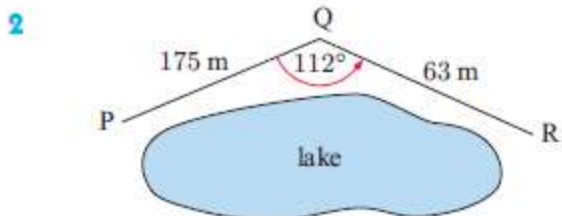
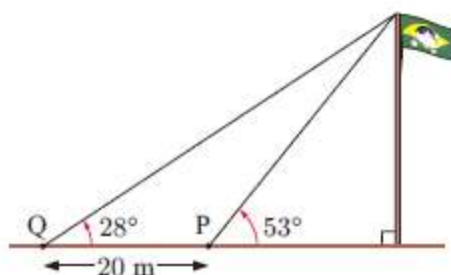


EXERCISE 151

- 1 17.7 m 2 207 m 3 23.9° 4 44.3° 5 9.38°
6 69.1 m 7 a 29.5° b £9047.96
8 a 38.0 m b 94.0 m
9 CA \approx 11.7 km, CB \approx 8.49 km
10 a 74.9 km^2 b 7490 ha 11 9.12 km 12 85.0 mm

EXERCISE 151

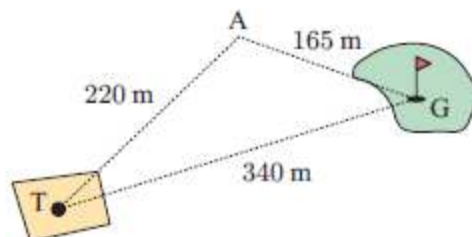
- 1 Rodrigo takes a sighting to the top of the flagpole from point P. He then moves 20 metres further away from the flagpole to point Q and takes a second sighting. The information is shown in the diagram. How high is the flagpole?



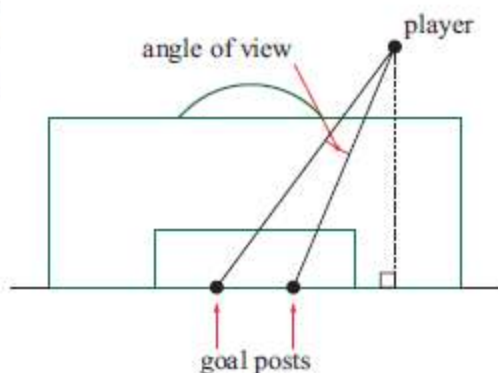
A park ranger walks along a trail from P to Q and then to R.

What is the distance in a straight line from P to R?

- 3 A golfer played his tee shot 220 m to point A. His ball was then 165 m from the green. The distance from tee to green is 340 m. Determine the number of degrees the golfer was off line with his tee shot.



- 4 Two yachts P and Q are anchored at different locations at sea. A beacon at B determines that P and Q are 24 km and 21 km away respectively. The yacht at Q measures B and P to be 53° apart. What angle would the yacht at P measure between B and Q?
- 5 A football goal is 5 metres wide. When a player is 26 metres from one goal post and 23 metres from the other, he shoots for goal. What is the angle of view of the goals that the player sees?

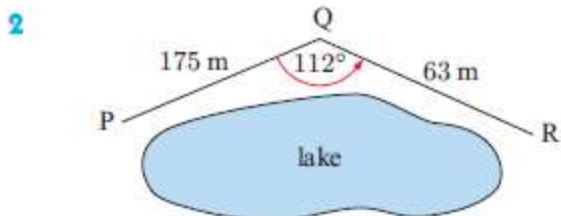
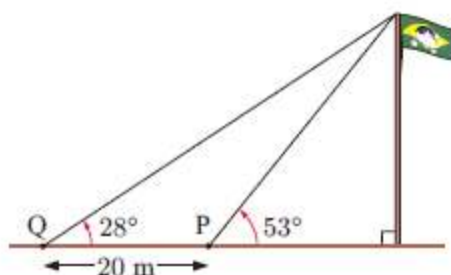


EXERCISE 151

- 1 17.7 m 2 207 m 3 23.9° 4 44.3° 5 9.38°
6 69.1 m 7 a 29.5° b £9047.96
8 a 38.0 m b 94.0 m
9 CA \approx 11.7 km, CB \approx 8.49 km
10 a 74.9 km^2 b 7490 ha 11 9.12 km 12 85.0 mm

EXERCISE 151

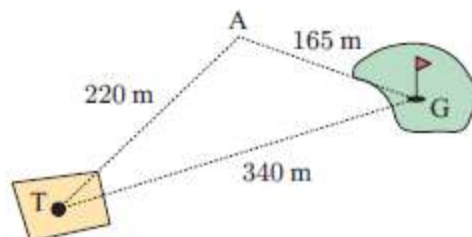
- 1 Rodrigo takes a sighting to the top of the flagpole from point P. He then moves 20 metres further away from the flagpole to point Q and takes a second sighting. The information is shown in the diagram. How high is the flagpole?



A park ranger walks along a trail from P to Q and then to R.

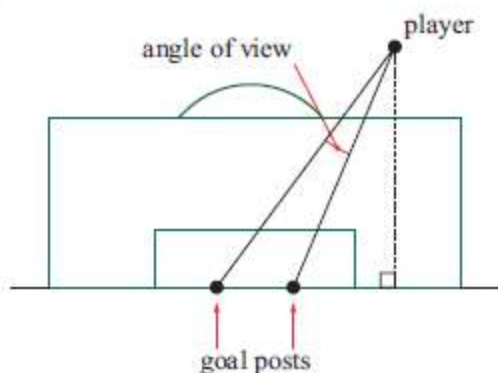
What is the distance in a straight line from P to R?

- 3 A golfer played his tee shot 220 m to point A. His ball was then 165 m from the green. The distance from tee to green is 340 m. Determine the number of degrees the golfer was off line with his tee shot.



- 4 Two yachts P and Q are anchored at different locations at sea. A beacon at B determines that P and Q are 24 km and 21 km away respectively. The yacht at Q measures B and P to be 53° apart. What angle would the yacht at P measure between B and Q?

- 5 A football goal is 5 metres wide. When a player is 26 metres from one goal post and 23 metres from the other, he shoots for goal. What is the angle of view of the goals that the player sees?

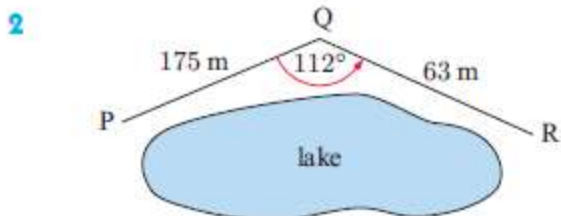
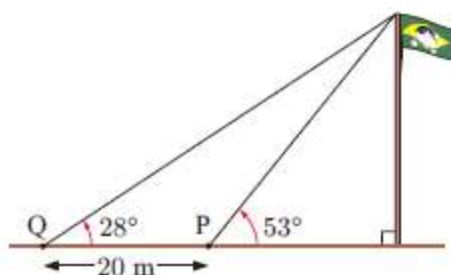


EXERCISE 151

- 1 17.7 m 2 207 m 3 23.9° 4 44.3° 5 9.38°
6 69.1 m 7 a 29.5° b £9047.96
8 a 38.0 m b 94.0 m
9 CA \approx 11.7 km, CB \approx 8.49 km
10 a 74.9 km^2 b 7490 ha 11 9.12 km 12 85.0 mm

EXERCISE 151

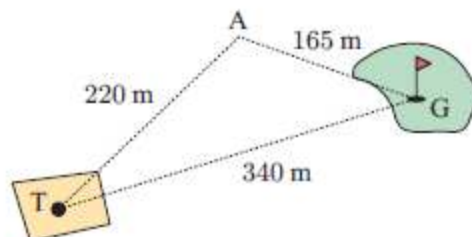
- 1 Rodrigo takes a sighting to the top of the flagpole from point P. He then moves 20 metres further away from the flagpole to point Q and takes a second sighting. The information is shown in the diagram. How high is the flagpole?



A park ranger walks along a trail from P to Q and then to R.

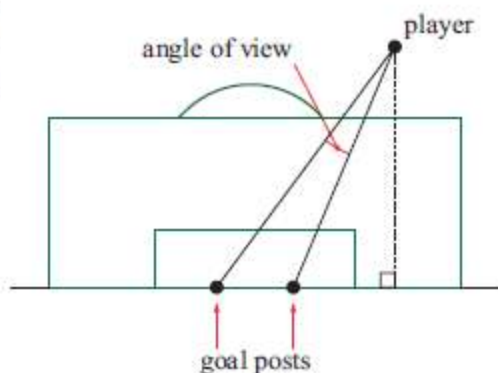
What is the distance in a straight line from P to R?

- 3 A golfer played his tee shot 220 m to point A. His ball was then 165 m from the green. The distance from tee to green is 340 m. Determine the number of degrees the golfer was off line with his tee shot.



- 4 Two yachts P and Q are anchored at different locations at sea. A beacon at B determines that P and Q are 24 km and 21 km away respectively. The yacht at Q measures B and P to be 53° apart. What angle would the yacht at P measure between B and Q?

- 5 A football goal is 5 metres wide. When a player is 26 metres from one goal post and 23 metres from the other, he shoots for goal. What is the angle of view of the goals that the player sees?

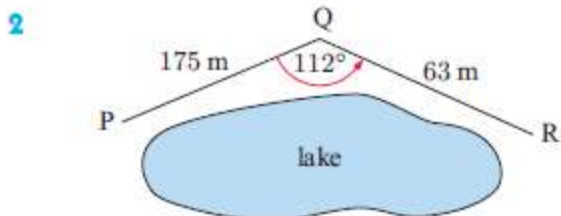
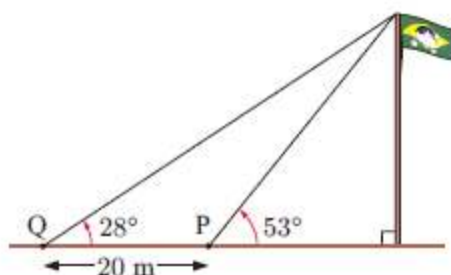


EXERCISE 151

- 1 17.7 m 2 207 m 3 23.9° 4 44.3° 5 9.38°
6 69.1 m 7 a 29.5° b £9047.96
8 a 38.0 m b 94.0 m
9 CA \approx 11.7 km, CB \approx 8.49 km
10 a 74.9 km^2 b 7490 ha 11 9.12 km 12 85.0 mm

EXERCISE 151

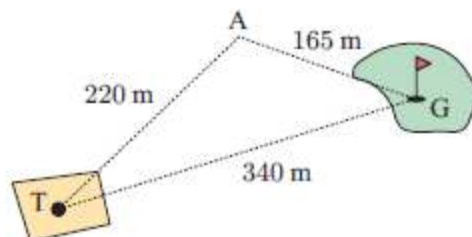
- 1 Rodrigo takes a sighting to the top of the flagpole from point P. He then moves 20 metres further away from the flagpole to point Q and takes a second sighting. The information is shown in the diagram. How high is the flagpole?



A park ranger walks along a trail from P to Q and then to R.

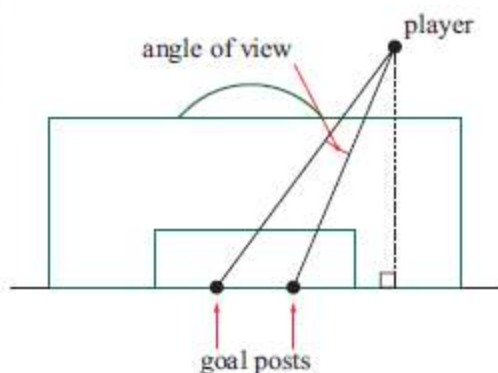
What is the distance in a straight line from P to R?

- 3 A golfer played his tee shot 220 m to point A. His ball was then 165 m from the green. The distance from tee to green is 340 m. Determine the number of degrees the golfer was off line with his tee shot.



- 4 Two yachts P and Q are anchored at different locations at sea. A beacon at B determines that P and Q are 24 km and 21 km away respectively. The yacht at Q measures B and P to be 53° apart. What angle would the yacht at P measure between B and Q?

- 5 A football goal is 5 metres wide. When a player is 26 metres from one goal post and 23 metres from the other, he shoots for goal. What is the angle of view of the goals that the player sees?

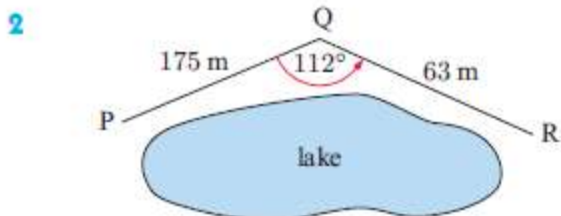
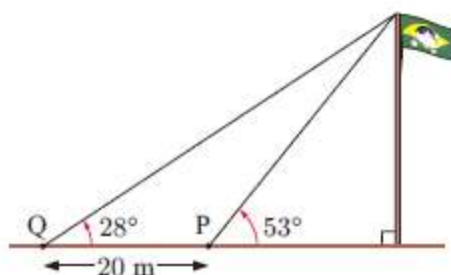


EXERCISE 151

- 1 17.7 m 2 207 m 3 23.9° 4 44.3° 5 9.38°
6 69.1 m 7 a 29.5° b £9047.96
8 a 38.0 m b 94.0 m
9 CA \approx 11.7 km, CB \approx 8.49 km
10 a 74.9 km^2 b 7490 ha 11 9.12 km 12 85.0 mm

EXERCISE 151

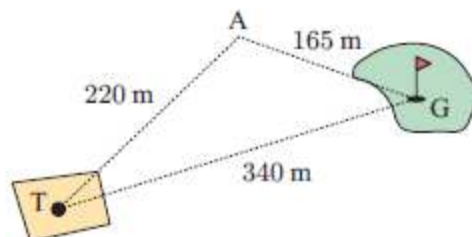
- 1 Rodrigo takes a sighting to the top of the flagpole from point P. He then moves 20 metres further away from the flagpole to point Q and takes a second sighting. The information is shown in the diagram. How high is the flagpole?



A park ranger walks along a trail from P to Q and then to R.

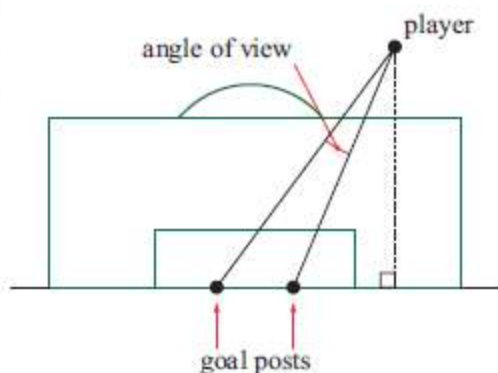
What is the distance in a straight line from P to R?

- 3 A golfer played his tee shot 220 m to point A. His ball was then 165 m from the green. The distance from tee to green is 340 m. Determine the number of degrees the golfer was off line with his tee shot.



- 4 Two yachts P and Q are anchored at different locations at sea. A beacon at B determines that P and Q are 24 km and 21 km away respectively. The yacht at Q measures B and P to be 53° apart. What angle would the yacht at P measure between B and Q?

- 5 A football goal is 5 metres wide. When a player is 26 metres from one goal post and 23 metres from the other, he shoots for goal. What is the angle of view of the goals that the player sees?

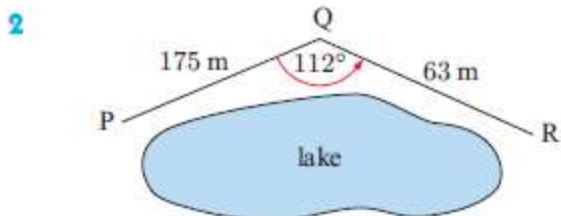
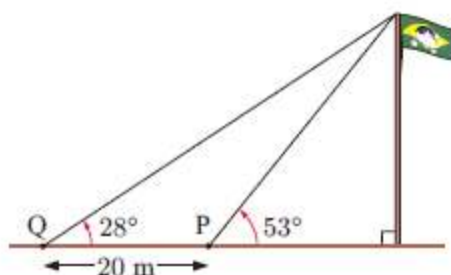


EXERCISE 151

- 1 17.7 m 2 207 m 3 23.9° 4 44.3° 5 9.38°
6 69.1 m 7 a 29.5° b £9047.96
8 a 38.0 m b 94.0 m
9 CA \approx 11.7 km, CB \approx 8.49 km
10 a 74.9 km^2 b 7490 ha 11 9.12 km 12 85.0 mm

EXERCISE 151

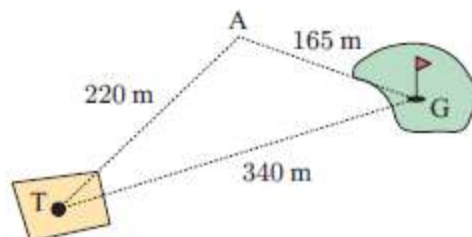
- 1 Rodrigo takes a sighting to the top of the flagpole from point P. He then moves 20 metres further away from the flagpole to point Q and takes a second sighting. The information is shown in the diagram. How high is the flagpole?



A park ranger walks along a trail from P to Q and then to R.

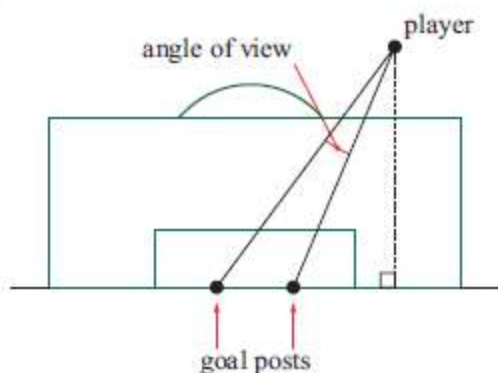
What is the distance in a straight line from P to R?

- 3 A golfer played his tee shot 220 m to point A. His ball was then 165 m from the green. The distance from tee to green is 340 m. Determine the number of degrees the golfer was off line with his tee shot.



- 4 Two yachts P and Q are anchored at different locations at sea. A beacon at B determines that P and Q are 24 km and 21 km away respectively. The yacht at Q measures B and P to be 53° apart. What angle would the yacht at P measure between B and Q?

- 5 A football goal is 5 metres wide. When a player is 26 metres from one goal post and 23 metres from the other, he shoots for goal. What is the angle of view of the goals that the player sees?

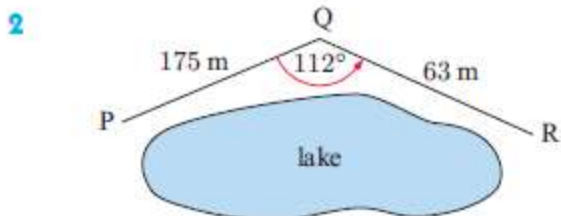
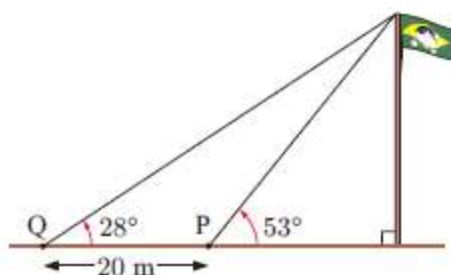


EXERCISE 151

- 1 17.7 m 2 207 m 3 23.9° 4 44.3° 5 9.38°
6 69.1 m 7 a 29.5° b £9047.96
8 a 38.0 m b 94.0 m
9 CA \approx 11.7 km, CB \approx 8.49 km
10 a 74.9 km^2 b 7490 ha 11 9.12 km 12 85.0 mm

EXERCISE 151

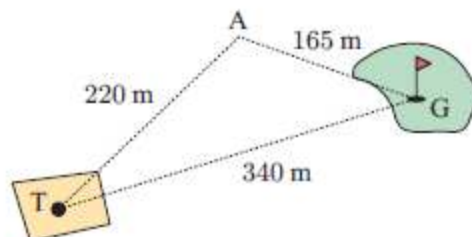
- 1 Rodrigo takes a sighting to the top of the flagpole from point P. He then moves 20 metres further away from the flagpole to point Q and takes a second sighting. The information is shown in the diagram. How high is the flagpole?



A park ranger walks along a trail from P to Q and then to R.

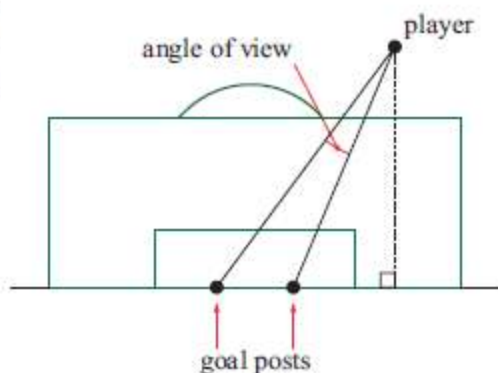
What is the distance in a straight line from P to R?

- 3 A golfer played his tee shot 220 m to point A. His ball was then 165 m from the green. The distance from tee to green is 340 m. Determine the number of degrees the golfer was off line with his tee shot.



- 4 Two yachts P and Q are anchored at different locations at sea. A beacon at B determines that P and Q are 24 km and 21 km away respectively. The yacht at Q measures B and P to be 53° apart. What angle would the yacht at P measure between B and Q?

- 5 A football goal is 5 metres wide. When a player is 26 metres from one goal post and 23 metres from the other, he shoots for goal. What is the angle of view of the goals that the player sees?



EXERCISE 151

- 1 17.7 m 2 207 m 3 23.9° 4 44.3° 5 9.38°
6 69.1 m 7 a 29.5° b £9047.96
8 a 38.0 m b 94.0 m
9 CA \approx 11.7 km, CB \approx 8.49 km
10 a 74.9 km^2 b 7490 ha 11 9.12 km 12 85.0 mm