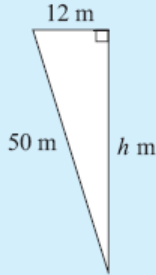
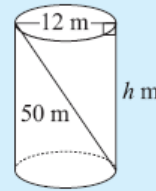


Chapter 4 G (Three Dimensional Problems)

Pythagoras' Rule is often used when finding lengths in **three-dimensional solids**.

Example 19

A 50 m rope is attached inside an empty cylindrical wheat silo of diameter 12 m as shown. How high is the wheat silo?



Let the height be h m.

$$\therefore h^2 + 12^2 = 50^2 \quad \{\text{Pythagoras}\}$$

$$\therefore h^2 + 144 = 2500$$

$$\therefore h^2 = 2356$$

$$\therefore h = \sqrt{2356} \quad \{\text{as } h > 0\}$$

$$\therefore h \doteq 48.5 \quad \{\text{to 3 s.f.}\}$$

i.e., the wheat silo is 48.5 m high.

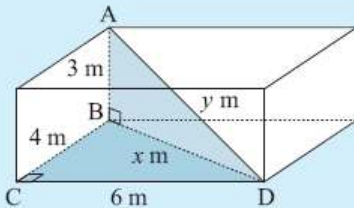
EXERCISE 4G

- 1 A cone has a slant height of 13 cm and a base radius of 5 cm. How high is the cone?
- 2 Find the length of the longest nail that could be put entirely within a cylindrical can of radius 3 cm and height 10 cm.
- 3 A 68 cm nail just fits inside a cylindrical can. The nail is removed and four identical spherical balls are fitted exactly within the can. What is the maximum radius of each ball?

The **rule of Pythagoras** is often used *twice* in three-dimensional problem solving questions. We look for right angled triangles which contain two sides of given length.

Example 20

A room is 6 m by 4 m at floor level and the floor to ceiling height is 3 m. Find the distance from a floor corner point to the opposite corner point on the ceiling.



The required distance is AD. We join BD.

$$\text{In } \triangle BCD, \quad x^2 = 4^2 + 6^2 \quad \{\text{Pythagoras}\}$$

$$\text{In } \triangle ABD, \quad y^2 = x^2 + 3^2$$

$$\therefore y^2 = 4^2 + 6^2 + 3^2$$

$$\therefore y^2 = 61$$

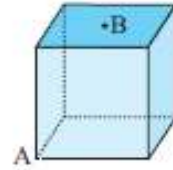
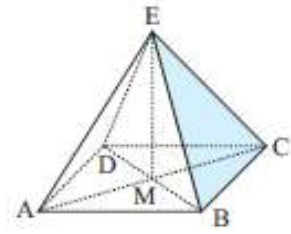
$$\therefore y = \pm\sqrt{61}$$

But $y > 0$ \therefore the required distance is $\sqrt{61} \doteq 7.81$ m. $\{\text{to 3 s.f.}\}$

- 5 A room is 6 m by 5 m and has a height of 3 m. Find the distance from a corner point on the floor to the opposite corner of the ceiling.
- 6 A rectangular box is 2 cm by 3 cm by 4 cm (internally). Find the length of the longest toothpick that can be placed within the box.
- 7 Determine the length of the longest piece of timber which could be stored in a rectangular shed 8 m by 5 m by 3 m high.

- 1** 12 cm **2** 11.6 cm **3** 8.24 cm **4** 3.46 cm
- 5** 8.37 m **6** 5.38 cm **7** 9.89 m **8** 141 m
- 9** $9.38 \text{ cm} \times 9.38 \text{ cm}$ **10** 1.22 m

- 8** ABCD is a square-based pyramid. E, the apex of the pyramid is vertically above M, the point of intersection of AC and BD. If an Egyptian Pharaoh wished to build a square-based pyramid with all edges 200 m, how high (to the nearest metre) would the pyramid reach above the desert sands?
- 9** A symmetrical square-based pyramid has height 10 cm and slant edges of 12 cm. Find the dimensions of its square base.
- 10** A cube has sides of length 1 m. B is at the centre of one face, and A is an opposite vertex. Find the direct distance from A to B.

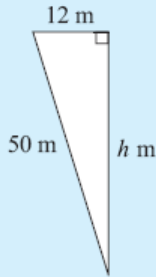
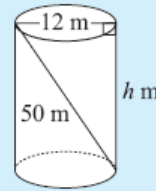


Chapter 4 G (Three Dimensional Problems)

Pythagoras' Rule is often used when finding lengths in **three-dimensional solids**.

Example 19

A 50 m rope is attached inside an empty cylindrical wheat silo of diameter 12 m as shown. How high is the wheat silo?



Let the height be h m.

$$\therefore h^2 + 12^2 = 50^2 \quad \{\text{Pythagoras}\}$$

$$\therefore h^2 + 144 = 2500$$

$$\therefore h^2 = 2356$$

$$\therefore h = \sqrt{2356} \quad \{\text{as } h > 0\}$$

$$\therefore h \doteq 48.5 \quad \{\text{to 3 s.f.}\}$$

i.e., the wheat silo is 48.5 m high.

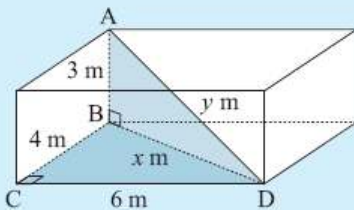
EXERCISE 4G

- 1 A cone has a slant height of 13 cm and a base radius of 5 cm. How high is the cone?
- 2 Find the length of the longest nail that could be put entirely within a cylindrical can of radius 3 cm and height 10 cm.
- 3 A 68 cm nail just fits inside a cylindrical can. The nail is removed and four identical spherical balls are fitted exactly within the can. What is the maximum radius of each ball?

The **rule of Pythagoras** is often used *twice* in three-dimensional problem solving questions. We look for right angled triangles which contain two sides of given length.

Example 20

A room is 6 m by 4 m at floor level and the floor to ceiling height is 3 m. Find the distance from a floor corner point to the opposite corner point on the ceiling.



The required distance is AD. We join BD.

$$\text{In } \triangle BCD, \quad x^2 = 4^2 + 6^2 \quad \{\text{Pythagoras}\}$$

$$\text{In } \triangle ABD, \quad y^2 = x^2 + 3^2$$

$$\therefore y^2 = 4^2 + 6^2 + 3^2$$

$$\therefore y^2 = 61$$

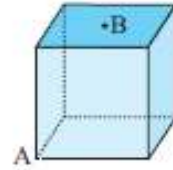
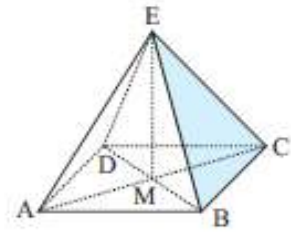
$$\therefore y = \pm\sqrt{61}$$

But $y > 0 \quad \therefore$ the required distance is $\sqrt{61} \doteq 7.81$ m. {to 3 s.f.}

- 5 A room is 6 m by 5 m and has a height of 3 m. Find the distance from a corner point on the floor to the opposite corner of the ceiling.
- 6 A rectangular box is 2 cm by 3 cm by 4 cm (internally). Find the length of the longest toothpick that can be placed within the box.
- 7 Determine the length of the longest piece of timber which could be stored in a rectangular shed 8 m by 5 m by 3 m high.

- 1** 12 cm **2** 11.6 cm **3** 8.24 cm **4** 3.46 cm
- 5** 8.37 m **6** 5.38 cm **7** 9.89 m **8** 141 m
- 9** $9.38 \text{ cm} \times 9.38 \text{ cm}$ **10** 1.22 m

- 8** ABCD is a square-based pyramid. E, the apex of the pyramid is vertically above M, the point of intersection of AC and BD. If an Egyptian Pharaoh wished to build a square-based pyramid with all edges 200 m, how high (to the nearest metre) would the pyramid reach above the desert sands?
- 9** A symmetrical square-based pyramid has height 10 cm and slant edges of 12 cm. Find the dimensions of its square base.
- 10** A cube has sides of length 1 m. B is at the centre of one face, and A is an opposite vertex. Find the direct distance from A to B.

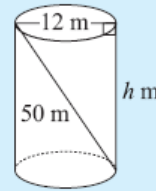


Chapter 4 G (Three Dimensional Problems)

Pythagoras' Rule is often used when finding lengths in **three-dimensional solids**.

Example 19

A 50 m rope is attached inside an empty cylindrical wheat silo of diameter 12 m as shown. How high is the wheat silo?



Let the height be h m.

$$\therefore h^2 + 12^2 = 50^2 \quad \{\text{Pythagoras}\}$$

$$\therefore h^2 + 144 = 2500$$

$$\therefore h^2 = 2356$$

$$\therefore h = \sqrt{2356} \quad \{\text{as } h > 0\}$$

$$\therefore h \doteq 48.5 \quad \{\text{to 3 s.f.}\}$$

i.e., the wheat silo is 48.5 m high.

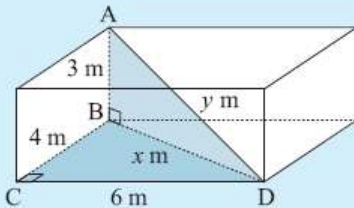
EXERCISE 4G

- 1 A cone has a slant height of 13 cm and a base radius of 5 cm. How high is the cone?
- 2 Find the length of the longest nail that could be put entirely within a cylindrical can of radius 3 cm and height 10 cm.
- 3 A 68 cm nail just fits inside a cylindrical can. The nail is removed and four identical spherical balls are fitted exactly within the can. What is the maximum radius of each ball?

The **rule of Pythagoras** is often used *twice* in three-dimensional problem solving questions. We look for right angled triangles which contain two sides of given length.

Example 20

A room is 6 m by 4 m at floor level and the floor to ceiling height is 3 m. Find the distance from a floor corner point to the opposite corner point on the ceiling.



The required distance is AD. We join BD.

$$\text{In } \triangle BCD, \quad x^2 = 4^2 + 6^2 \quad \{\text{Pythagoras}\}$$

$$\text{In } \triangle ABD, \quad y^2 = x^2 + 3^2$$

$$\therefore y^2 = 4^2 + 6^2 + 3^2$$

$$\therefore y^2 = 61$$

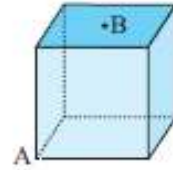
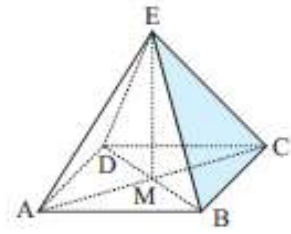
$$\therefore y = \pm\sqrt{61}$$

But $y > 0 \quad \therefore$ the required distance is $\sqrt{61} \doteq 7.81$ m. $\{\text{to 3 s.f.}\}$

- 5 A room is 6 m by 5 m and has a height of 3 m. Find the distance from a corner point on the floor to the opposite corner of the ceiling.
- 6 A rectangular box is 2 cm by 3 cm by 4 cm (internally). Find the length of the longest toothpick that can be placed within the box.
- 7 Determine the length of the longest piece of timber which could be stored in a rectangular shed 8 m by 5 m by 3 m high.

- 1** 12 cm **2** 11.6 cm **3** 8.24 cm **4** 3.46 cm
- 5** 8.37 m **6** 5.38 cm **7** 9.89 m **8** 141 m
- 9** $9.38 \text{ cm} \times 9.38 \text{ cm}$ **10** 1.22 m

- 8** ABCD is a square-based pyramid. E, the apex of the pyramid is vertically above M, the point of intersection of AC and BD. If an Egyptian Pharaoh wished to build a square-based pyramid with all edges 200 m, how high (to the nearest metre) would the pyramid reach above the desert sands?
- 9** A symmetrical square-based pyramid has height 10 cm and slant edges of 12 cm. Find the dimensions of its square base.
- 10** A cube has sides of length 1 m. B is at the centre of one face, and A is an opposite vertex. Find the direct distance from A to B.

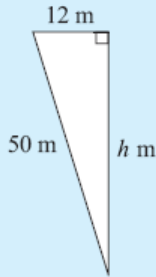
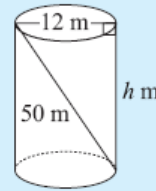


Chapter 4 G (Three Dimensional Problems)

Pythagoras' Rule is often used when finding lengths in **three-dimensional solids**.

Example 19

A 50 m rope is attached inside an empty cylindrical wheat silo of diameter 12 m as shown. How high is the wheat silo?



Let the height be h m.

$$\therefore h^2 + 12^2 = 50^2 \quad \{\text{Pythagoras}\}$$

$$\therefore h^2 + 144 = 2500$$

$$\therefore h^2 = 2356$$

$$\therefore h = \sqrt{2356} \quad \{\text{as } h > 0\}$$

$$\therefore h \doteq 48.5 \quad \{\text{to 3 s.f.}\}$$

i.e., the wheat silo is 48.5 m high.

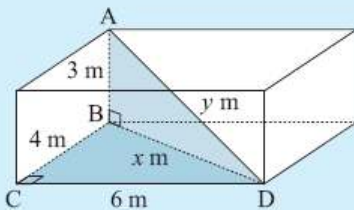
EXERCISE 4G

- 1 A cone has a slant height of 13 cm and a base radius of 5 cm. How high is the cone?
- 2 Find the length of the longest nail that could be put entirely within a cylindrical can of radius 3 cm and height 10 cm.
- 3 A 68 cm nail just fits inside a cylindrical can. The nail is removed and four identical spherical balls are fitted exactly within the can. What is the maximum radius of each ball?

The **rule of Pythagoras** is often used *twice* in three-dimensional problem solving questions. We look for right angled triangles which contain two sides of given length.

Example 20

A room is 6 m by 4 m at floor level and the floor to ceiling height is 3 m. Find the distance from a floor corner point to the opposite corner point on the ceiling.



The required distance is AD. We join BD.

$$\text{In } \triangle BCD, \quad x^2 = 4^2 + 6^2 \quad \{\text{Pythagoras}\}$$

$$\text{In } \triangle ABD, \quad y^2 = x^2 + 3^2$$

$$\therefore y^2 = 4^2 + 6^2 + 3^2$$

$$\therefore y^2 = 61$$

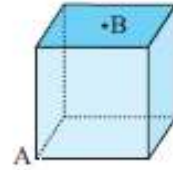
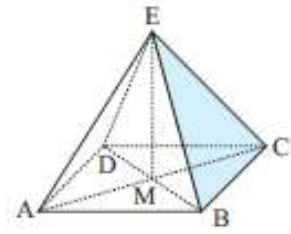
$$\therefore y = \pm\sqrt{61}$$

But $y > 0 \quad \therefore$ the required distance is $\sqrt{61} \doteq 7.81$ m. {to 3 s.f.}

- 5 A room is 6 m by 5 m and has a height of 3 m. Find the distance from a corner point on the floor to the opposite corner of the ceiling.
- 6 A rectangular box is 2 cm by 3 cm by 4 cm (internally). Find the length of the longest toothpick that can be placed within the box.
- 7 Determine the length of the longest piece of timber which could be stored in a rectangular shed 8 m by 5 m by 3 m high.

- 1** 12 cm **2** 11.6 cm **3** 8.24 cm **4** 3.46 cm
- 5** 8.37 m **6** 5.38 cm **7** 9.89 m **8** 141 m
- 9** $9.38 \text{ cm} \times 9.38 \text{ cm}$ **10** 1.22 m

- 8** ABCD is a square-based pyramid. E, the apex of the pyramid is vertically above M, the point of intersection of AC and BD. If an Egyptian Pharaoh wished to build a square-based pyramid with all edges 200 m, how high (to the nearest metre) would the pyramid reach above the desert sands?
- 9** A symmetrical square-based pyramid has height 10 cm and slant edges of 12 cm. Find the dimensions of its square base.
- 10** A cube has sides of length 1 m. B is at the centre of one face, and A is an opposite vertex. Find the direct distance from A to B.

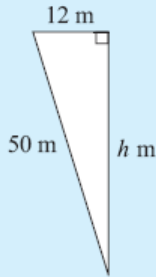
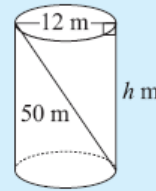


Chapter 4 G (Three Dimensional Problems)

Pythagoras' Rule is often used when finding lengths in **three-dimensional solids**.

Example 19

A 50 m rope is attached inside an empty cylindrical wheat silo of diameter 12 m as shown. How high is the wheat silo?



Let the height be h m.

$$\therefore h^2 + 12^2 = 50^2 \quad \{\text{Pythagoras}\}$$

$$\therefore h^2 + 144 = 2500$$

$$\therefore h^2 = 2356$$

$$\therefore h = \sqrt{2356} \quad \{\text{as } h > 0\}$$

$$\therefore h \doteq 48.5 \quad \{\text{to 3 s.f.}\}$$

i.e., the wheat silo is 48.5 m high.

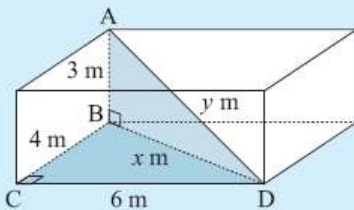
EXERCISE 4G

- 1 A cone has a slant height of 13 cm and a base radius of 5 cm. How high is the cone?
- 2 Find the length of the longest nail that could be put entirely within a cylindrical can of radius 3 cm and height 10 cm.
- 3 A 68 cm nail just fits inside a cylindrical can. The nail is removed and four identical spherical balls are fitted exactly within the can. What is the maximum radius of each ball?

The **rule of Pythagoras** is often used *twice* in three-dimensional problem solving questions. We look for right angled triangles which contain two sides of given length.

Example 20

A room is 6 m by 4 m at floor level and the floor to ceiling height is 3 m. Find the distance from a floor corner point to the opposite corner point on the ceiling.



The required distance is AD. We join BD.

$$\text{In } \triangle BCD, \quad x^2 = 4^2 + 6^2 \quad \{\text{Pythagoras}\}$$

$$\text{In } \triangle ABD, \quad y^2 = x^2 + 3^2$$

$$\therefore y^2 = 4^2 + 6^2 + 3^2$$

$$\therefore y^2 = 61$$

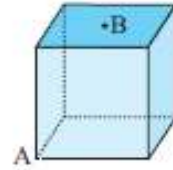
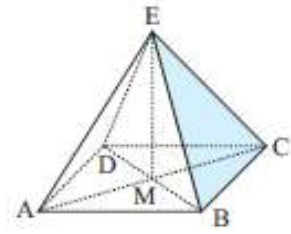
$$\therefore y = \pm\sqrt{61}$$

But $y > 0 \quad \therefore$ the required distance is $\sqrt{61} \doteq 7.81$ m. {to 3 s.f.}

- 5 A room is 6 m by 5 m and has a height of 3 m. Find the distance from a corner point on the floor to the opposite corner of the ceiling.
- 6 A rectangular box is 2 cm by 3 cm by 4 cm (internally). Find the length of the longest toothpick that can be placed within the box.
- 7 Determine the length of the longest piece of timber which could be stored in a rectangular shed 8 m by 5 m by 3 m high.

- 1** 12 cm **2** 11.6 cm **3** 8.24 cm **4** 3.46 cm
- 5** 8.37 m **6** 5.38 cm **7** 9.89 m **8** 141 m
- 9** 9.38 cm × 9.38 cm **10** 1.22 m

- 8** ABCD is a square-based pyramid. E, the apex of the pyramid is vertically above M, the point of intersection of AC and BD. If an Egyptian Pharaoh wished to build a square-based pyramid with all edges 200 m, how high (to the nearest metre) would the pyramid reach above the desert sands?
- 9** A symmetrical square-based pyramid has height 10 cm and slant edges of 12 cm. Find the dimensions of its square base.
- 10** A cube has sides of length 1 m. B is at the centre of one face, and A is an opposite vertex. Find the direct distance from A to B.

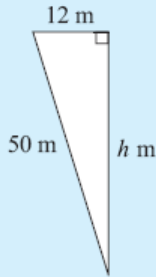
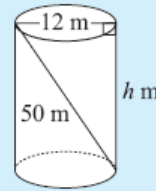


Chapter 4 G (Three Dimensional Problems)

Pythagoras' Rule is often used when finding lengths in **three-dimensional solids**.

Example 19

A 50 m rope is attached inside an empty cylindrical wheat silo of diameter 12 m as shown. How high is the wheat silo?



Let the height be h m.

$$\therefore h^2 + 12^2 = 50^2 \quad \{\text{Pythagoras}\}$$

$$\therefore h^2 + 144 = 2500$$

$$\therefore h^2 = 2356$$

$$\therefore h = \sqrt{2356} \quad \{\text{as } h > 0\}$$

$$\therefore h \doteq 48.5 \quad \{\text{to 3 s.f.}\}$$

i.e., the wheat silo is 48.5 m high.

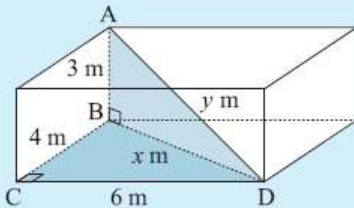
EXERCISE 4G

- 1 A cone has a slant height of 13 cm and a base radius of 5 cm. How high is the cone?
- 2 Find the length of the longest nail that could be put entirely within a cylindrical can of radius 3 cm and height 10 cm.
- 3 A 68 cm nail just fits inside a cylindrical can. The nail is removed and four identical spherical balls are fitted exactly within the can. What is the maximum radius of each ball?

The **rule of Pythagoras** is often used *twice* in three-dimensional problem solving questions. We look for right angled triangles which contain two sides of given length.

Example 20

A room is 6 m by 4 m at floor level and the floor to ceiling height is 3 m. Find the distance from a floor corner point to the opposite corner point on the ceiling.



The required distance is AD. We join BD.

$$\text{In } \triangle BCD, \quad x^2 = 4^2 + 6^2 \quad \{\text{Pythagoras}\}$$

$$\text{In } \triangle ABD, \quad y^2 = x^2 + 3^2$$

$$\therefore y^2 = 4^2 + 6^2 + 3^2$$

$$\therefore y^2 = 61$$

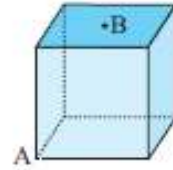
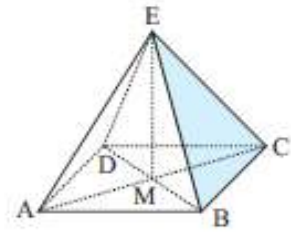
$$\therefore y = \pm\sqrt{61}$$

But $y > 0 \quad \therefore$ the required distance is $\sqrt{61} \doteq 7.81$ m. {to 3 s.f.}

- 5 A room is 6 m by 5 m and has a height of 3 m. Find the distance from a corner point on the floor to the opposite corner of the ceiling.
- 6 A rectangular box is 2 cm by 3 cm by 4 cm (internally). Find the length of the longest toothpick that can be placed within the box.
- 7 Determine the length of the longest piece of timber which could be stored in a rectangular shed 8 m by 5 m by 3 m high.

- 1** 12 cm **2** 11.6 cm **3** 8.24 cm **4** 3.46 cm
- 5** 8.37 m **6** 5.38 cm **7** 9.89 m **8** 141 m
- 9** 9.38 cm × 9.38 cm **10** 1.22 m

- 8** ABCD is a square-based pyramid. E, the apex of the pyramid is vertically above M, the point of intersection of AC and BD. If an Egyptian Pharaoh wished to build a square-based pyramid with all edges 200 m, how high (to the nearest metre) would the pyramid reach above the desert sands?
- 9** A symmetrical square-based pyramid has height 10 cm and slant edges of 12 cm. Find the dimensions of its square base.
- 10** A cube has sides of length 1 m. B is at the centre of one face, and A is an opposite vertex. Find the direct distance from A to B.

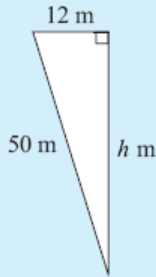
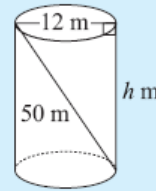


Chapter 4 G (Three Dimensional Problems)

Pythagoras' Rule is often used when finding lengths in **three-dimensional solids**.

Example 19

A 50 m rope is attached inside an empty cylindrical wheat silo of diameter 12 m as shown. How high is the wheat silo?



Let the height be h m.

$$\therefore h^2 + 12^2 = 50^2 \quad \{\text{Pythagoras}\}$$

$$\therefore h^2 + 144 = 2500$$

$$\therefore h^2 = 2356$$

$$\therefore h = \sqrt{2356} \quad \{\text{as } h > 0\}$$

$$\therefore h \doteq 48.5 \quad \{\text{to 3 s.f.}\}$$

i.e., the wheat silo is 48.5 m high.

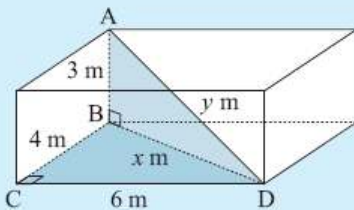
EXERCISE 4G

- 1 A cone has a slant height of 13 cm and a base radius of 5 cm. How high is the cone?
- 2 Find the length of the longest nail that could be put entirely within a cylindrical can of radius 3 cm and height 10 cm.
- 3 A 68 cm nail just fits inside a cylindrical can. The nail is removed and four identical spherical balls are fitted exactly within the can. What is the maximum radius of each ball?

The **rule of Pythagoras** is often used *twice* in three-dimensional problem solving questions. We look for right angled triangles which contain two sides of given length.

Example 20

A room is 6 m by 4 m at floor level and the floor to ceiling height is 3 m. Find the distance from a floor corner point to the opposite corner point on the ceiling.



The required distance is AD. We join BD.

$$\text{In } \triangle BCD, \quad x^2 = 4^2 + 6^2 \quad \{\text{Pythagoras}\}$$

$$\text{In } \triangle ABD, \quad y^2 = x^2 + 3^2$$

$$\therefore y^2 = 4^2 + 6^2 + 3^2$$

$$\therefore y^2 = 61$$

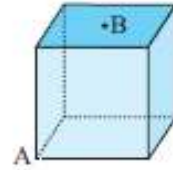
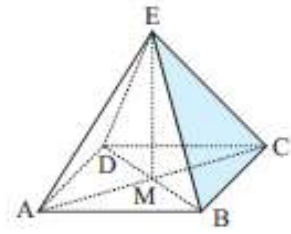
$$\therefore y = \pm\sqrt{61}$$

But $y > 0 \quad \therefore$ the required distance is $\sqrt{61} \doteq 7.81$ m. $\{\text{to 3 s.f.}\}$

- 5 A room is 6 m by 5 m and has a height of 3 m. Find the distance from a corner point on the floor to the opposite corner of the ceiling.
- 6 A rectangular box is 2 cm by 3 cm by 4 cm (internally). Find the length of the longest toothpick that can be placed within the box.
- 7 Determine the length of the longest piece of timber which could be stored in a rectangular shed 8 m by 5 m by 3 m high.

- 1** 12 cm **2** 11.6 cm **3** 8.24 cm **4** 3.46 cm
- 5** 8.37 m **6** 5.38 cm **7** 9.89 m **8** 141 m
- 9** $9.38 \text{ cm} \times 9.38 \text{ cm}$ **10** 1.22 m

- 8** ABCD is a square-based pyramid. E, the apex of the pyramid is vertically above M, the point of intersection of AC and BD. If an Egyptian Pharaoh wished to build a square-based pyramid with all edges 200 m, how high (to the nearest metre) would the pyramid reach above the desert sands?
- 9** A symmetrical square-based pyramid has height 10 cm and slant edges of 12 cm. Find the dimensions of its square base.
- 10** A cube has sides of length 1 m. B is at the centre of one face, and A is an opposite vertex. Find the direct distance from A to B.

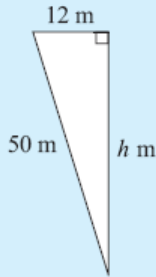
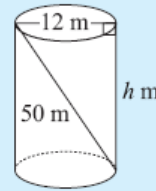


Chapter 4 G (Three Dimensional Problems)

Pythagoras' Rule is often used when finding lengths in **three-dimensional solids**.

Example 19

A 50 m rope is attached inside an empty cylindrical wheat silo of diameter 12 m as shown. How high is the wheat silo?



Let the height be h m.

$$\therefore h^2 + 12^2 = 50^2 \quad \{\text{Pythagoras}\}$$

$$\therefore h^2 + 144 = 2500$$

$$\therefore h^2 = 2356$$

$$\therefore h = \sqrt{2356} \quad \{\text{as } h > 0\}$$

$$\therefore h \doteq 48.5 \quad \{\text{to 3 s.f.}\}$$

i.e., the wheat silo is 48.5 m high.

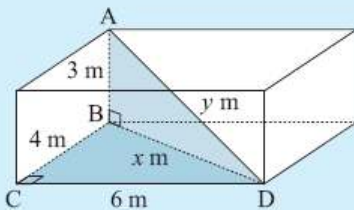
EXERCISE 4G

- 1 A cone has a slant height of 13 cm and a base radius of 5 cm. How high is the cone?
- 2 Find the length of the longest nail that could be put entirely within a cylindrical can of radius 3 cm and height 10 cm.
- 3 A 68 cm nail just fits inside a cylindrical can. The nail is removed and four identical spherical balls are fitted exactly within the can. What is the maximum radius of each ball?

The **rule of Pythagoras** is often used *twice* in three-dimensional problem solving questions. We look for right angled triangles which contain two sides of given length.

Example 20

A room is 6 m by 4 m at floor level and the floor to ceiling height is 3 m. Find the distance from a floor corner point to the opposite corner point on the ceiling.



The required distance is AD. We join BD.

$$\text{In } \triangle BCD, \quad x^2 = 4^2 + 6^2 \quad \{\text{Pythagoras}\}$$

$$\text{In } \triangle ABD, \quad y^2 = x^2 + 3^2$$

$$\therefore y^2 = 4^2 + 6^2 + 3^2$$

$$\therefore y^2 = 61$$

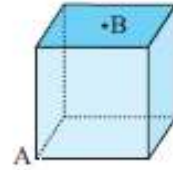
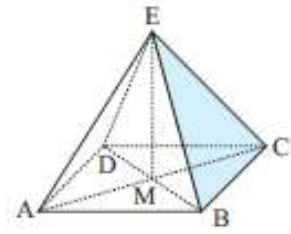
$$\therefore y = \pm\sqrt{61}$$

But $y > 0 \quad \therefore$ the required distance is $\sqrt{61} \doteq 7.81$ m. {to 3 s.f.}

- 5 A room is 6 m by 5 m and has a height of 3 m. Find the distance from a corner point on the floor to the opposite corner of the ceiling.
- 6 A rectangular box is 2 cm by 3 cm by 4 cm (internally). Find the length of the longest toothpick that can be placed within the box.
- 7 Determine the length of the longest piece of timber which could be stored in a rectangular shed 8 m by 5 m by 3 m high.

- 1** 12 cm **2** 11.6 cm **3** 8.24 cm **4** 3.46 cm
- 5** 8.37 m **6** 5.38 cm **7** 9.89 m **8** 141 m
- 9** $9.38 \text{ cm} \times 9.38 \text{ cm}$ **10** 1.22 m

- 8** ABCD is a square-based pyramid. E, the apex of the pyramid is vertically above M, the point of intersection of AC and BD. If an Egyptian Pharaoh wished to build a square-based pyramid with all edges 200 m, how high (to the nearest metre) would the pyramid reach above the desert sands?
- 9** A symmetrical square-based pyramid has height 10 cm and slant edges of 12 cm. Find the dimensions of its square base.
- 10** A cube has sides of length 1 m. B is at the centre of one face, and A is an opposite vertex. Find the direct distance from A to B.

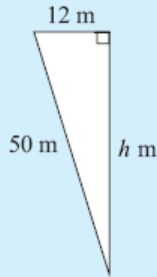
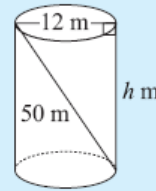


Chapter 4 G (Three Dimensional Problems)

Pythagoras' Rule is often used when finding lengths in **three-dimensional solids**.

Example 19

A 50 m rope is attached inside an empty cylindrical wheat silo of diameter 12 m as shown. How high is the wheat silo?



Let the height be h m.

$$\therefore h^2 + 12^2 = 50^2 \quad \{\text{Pythagoras}\}$$

$$\therefore h^2 + 144 = 2500$$

$$\therefore h^2 = 2356$$

$$\therefore h = \sqrt{2356} \quad \{\text{as } h > 0\}$$

$$\therefore h \doteq 48.5 \quad \{\text{to 3 s.f.}\}$$

i.e., the wheat silo is 48.5 m high.

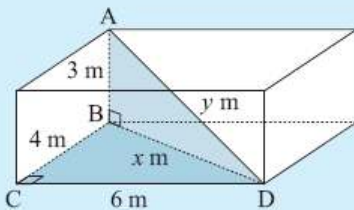
EXERCISE 4G

- 1 A cone has a slant height of 13 cm and a base radius of 5 cm. How high is the cone?
- 2 Find the length of the longest nail that could be put entirely within a cylindrical can of radius 3 cm and height 10 cm.
- 3 A 68 cm nail just fits inside a cylindrical can. The nail is removed and four identical spherical balls are fitted exactly within the can. What is the maximum radius of each ball?

The **rule of Pythagoras** is often used *twice* in three-dimensional problem solving questions. We look for right angled triangles which contain two sides of given length.

Example 20

A room is 6 m by 4 m at floor level and the floor to ceiling height is 3 m. Find the distance from a floor corner point to the opposite corner point on the ceiling.



The required distance is AD. We join BD.

$$\text{In } \triangle BCD, \quad x^2 = 4^2 + 6^2 \quad \{\text{Pythagoras}\}$$

$$\text{In } \triangle ABD, \quad y^2 = x^2 + 3^2$$

$$\therefore y^2 = 4^2 + 6^2 + 3^2$$

$$\therefore y^2 = 61$$

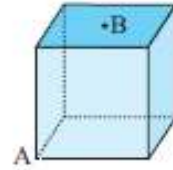
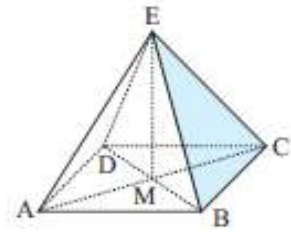
$$\therefore y = \pm\sqrt{61}$$

But $y > 0 \quad \therefore$ the required distance is $\sqrt{61} \doteq 7.81$ m. $\{\text{to 3 s.f.}\}$

- 5 A room is 6 m by 5 m and has a height of 3 m. Find the distance from a corner point on the floor to the opposite corner of the ceiling.
- 6 A rectangular box is 2 cm by 3 cm by 4 cm (internally). Find the length of the longest toothpick that can be placed within the box.
- 7 Determine the length of the longest piece of timber which could be stored in a rectangular shed 8 m by 5 m by 3 m high.

- 1** 12 cm **2** 11.6 cm **3** 8.24 cm **4** 3.46 cm
- 5** 8.37 m **6** 5.38 cm **7** 9.89 m **8** 141 m
- 9** $9.38 \text{ cm} \times 9.38 \text{ cm}$ **10** 1.22 m

- 8** ABCD is a square-based pyramid. E, the apex of the pyramid is vertically above M, the point of intersection of AC and BD. If an Egyptian Pharaoh wished to build a square-based pyramid with all edges 200 m, how high (to the nearest metre) would the pyramid reach above the desert sands?
- 9** A symmetrical square-based pyramid has height 10 cm and slant edges of 12 cm. Find the dimensions of its square base.
- 10** A cube has sides of length 1 m. B is at the centre of one face, and A is an opposite vertex. Find the direct distance from A to B.

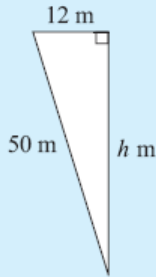
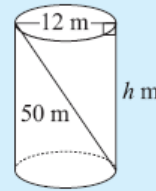


Chapter 4 G (Three Dimensional Problems)

Pythagoras' Rule is often used when finding lengths in **three-dimensional solids**.

Example 19

A 50 m rope is attached inside an empty cylindrical wheat silo of diameter 12 m as shown. How high is the wheat silo?



Let the height be h m.

$$\therefore h^2 + 12^2 = 50^2 \quad \{\text{Pythagoras}\}$$

$$\therefore h^2 + 144 = 2500$$

$$\therefore h^2 = 2356$$

$$\therefore h = \sqrt{2356} \quad \{\text{as } h > 0\}$$

$$\therefore h \doteq 48.5 \quad \{\text{to 3 s.f.}\}$$

i.e., the wheat silo is 48.5 m high.

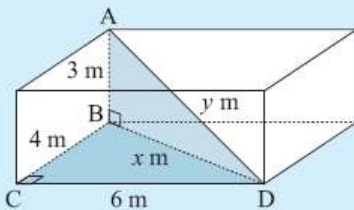
EXERCISE 4G

- 1 A cone has a slant height of 13 cm and a base radius of 5 cm. How high is the cone?
- 2 Find the length of the longest nail that could be put entirely within a cylindrical can of radius 3 cm and height 10 cm.
- 3 A 68 cm nail just fits inside a cylindrical can. The nail is removed and four identical spherical balls are fitted exactly within the can. What is the maximum radius of each ball?

The **rule of Pythagoras** is often used *twice* in three-dimensional problem solving questions. We look for right angled triangles which contain two sides of given length.

Example 20

A room is 6 m by 4 m at floor level and the floor to ceiling height is 3 m. Find the distance from a floor corner point to the opposite corner point on the ceiling.



The required distance is AD. We join BD.

$$\text{In } \triangle BCD, \quad x^2 = 4^2 + 6^2 \quad \{\text{Pythagoras}\}$$

$$\text{In } \triangle ABD, \quad y^2 = x^2 + 3^2$$

$$\therefore y^2 = 4^2 + 6^2 + 3^2$$

$$\therefore y^2 = 61$$

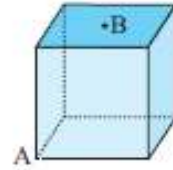
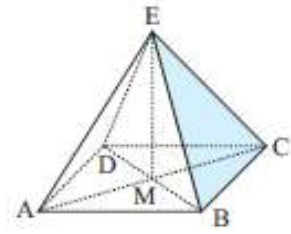
$$\therefore y = \pm\sqrt{61}$$

But $y > 0 \quad \therefore$ the required distance is $\sqrt{61} \doteq 7.81$ m. {to 3 s.f.}

- 5 A room is 6 m by 5 m and has a height of 3 m. Find the distance from a corner point on the floor to the opposite corner of the ceiling.
- 6 A rectangular box is 2 cm by 3 cm by 4 cm (internally). Find the length of the longest toothpick that can be placed within the box.
- 7 Determine the length of the longest piece of timber which could be stored in a rectangular shed 8 m by 5 m by 3 m high.

- 1** 12 cm **2** 11.6 cm **3** 8.24 cm **4** 3.46 cm
- 5** 8.37 m **6** 5.38 cm **7** 9.89 m **8** 141 m
- 9** $9.38 \text{ cm} \times 9.38 \text{ cm}$ **10** 1.22 m

- 8** ABCD is a square-based pyramid. E, the apex of the pyramid is vertically above M, the point of intersection of AC and BD. If an Egyptian Pharaoh wished to build a square-based pyramid with all edges 200 m, how high (to the nearest metre) would the pyramid reach above the desert sands?
- 9** A symmetrical square-based pyramid has height 10 cm and slant edges of 12 cm. Find the dimensions of its square base.
- 10** A cube has sides of length 1 m. B is at the centre of one face, and A is an opposite vertex. Find the direct distance from A to B.

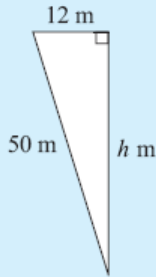
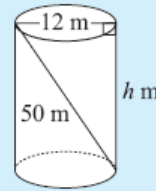


Chapter 4 G (Three Dimensional Problems)

Pythagoras' Rule is often used when finding lengths in **three-dimensional solids**.

Example 19

A 50 m rope is attached inside an empty cylindrical wheat silo of diameter 12 m as shown. How high is the wheat silo?



Let the height be h m.

$$\therefore h^2 + 12^2 = 50^2 \quad \{\text{Pythagoras}\}$$

$$\therefore h^2 + 144 = 2500$$

$$\therefore h^2 = 2356$$

$$\therefore h = \sqrt{2356} \quad \{\text{as } h > 0\}$$

$$\therefore h \doteq 48.5 \quad \{\text{to 3 s.f.}\}$$

i.e., the wheat silo is 48.5 m high.

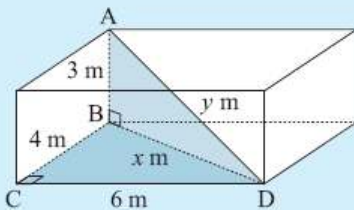
EXERCISE 4G

- 1 A cone has a slant height of 13 cm and a base radius of 5 cm. How high is the cone?
- 2 Find the length of the longest nail that could be put entirely within a cylindrical can of radius 3 cm and height 10 cm.
- 3 A 68 cm nail just fits inside a cylindrical can. The nail is removed and four identical spherical balls are fitted exactly within the can. What is the maximum radius of each ball?

The **rule of Pythagoras** is often used *twice* in three-dimensional problem solving questions. We look for right angled triangles which contain two sides of given length.

Example 20

A room is 6 m by 4 m at floor level and the floor to ceiling height is 3 m. Find the distance from a floor corner point to the opposite corner point on the ceiling.



The required distance is AD. We join BD.

$$\text{In } \triangle BCD, \quad x^2 = 4^2 + 6^2 \quad \{\text{Pythagoras}\}$$

$$\text{In } \triangle ABD, \quad y^2 = x^2 + 3^2$$

$$\therefore y^2 = 4^2 + 6^2 + 3^2$$

$$\therefore y^2 = 61$$

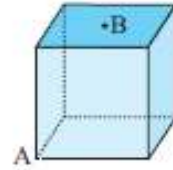
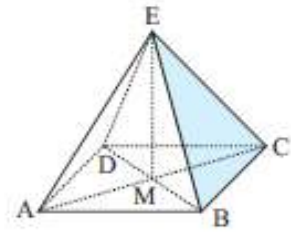
$$\therefore y = \pm\sqrt{61}$$

But $y > 0$ \therefore the required distance is $\sqrt{61} \doteq 7.81$ m. {to 3 s.f.}

- 5 A room is 6 m by 5 m and has a height of 3 m. Find the distance from a corner point on the floor to the opposite corner of the ceiling.
- 6 A rectangular box is 2 cm by 3 cm by 4 cm (internally). Find the length of the longest toothpick that can be placed within the box.
- 7 Determine the length of the longest piece of timber which could be stored in a rectangular shed 8 m by 5 m by 3 m high.

- 1** 12 cm **2** 11.6 cm **3** 8.24 cm **4** 3.46 cm
- 5** 8.37 m **6** 5.38 cm **7** 9.89 m **8** 141 m
- 9** 9.38 cm × 9.38 cm **10** 1.22 m

- 8** ABCD is a square-based pyramid. E, the apex of the pyramid is vertically above M, the point of intersection of AC and BD. If an Egyptian Pharoah wished to build a square-based pyramid with all edges 200 m, how high (to the nearest metre) would the pyramid reach above the desert sands?
- 9** A symmetrical square-based pyramid has height 10 cm and slant edges of 12 cm. Find the dimensions of its square base.
- 10** A cube has sides of length 1 m. B is at the centre of one face, and A is an opposite vertex. Find the direct distance from A to B.

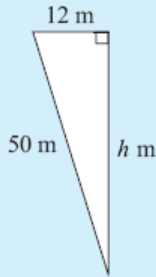
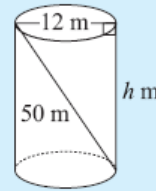


Chapter 4 G (Three Dimensional Problems)

Pythagoras' Rule is often used when finding lengths in **three-dimensional solids**.

Example 19

A 50 m rope is attached inside an empty cylindrical wheat silo of diameter 12 m as shown. How high is the wheat silo?



Let the height be h m.

$$\therefore h^2 + 12^2 = 50^2 \quad \{\text{Pythagoras}\}$$

$$\therefore h^2 + 144 = 2500$$

$$\therefore h^2 = 2356$$

$$\therefore h = \sqrt{2356} \quad \{\text{as } h > 0\}$$

$$\therefore h \doteq 48.5 \quad \{\text{to 3 s.f.}\}$$

i.e., the wheat silo is 48.5 m high.

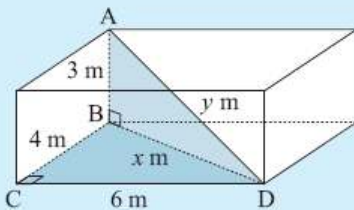
EXERCISE 4G

- 1 A cone has a slant height of 13 cm and a base radius of 5 cm. How high is the cone?
- 2 Find the length of the longest nail that could be put entirely within a cylindrical can of radius 3 cm and height 10 cm.
- 3 A 68 cm nail just fits inside a cylindrical can. The nail is removed and four identical spherical balls are fitted exactly within the can. What is the maximum radius of each ball?

The **rule of Pythagoras** is often used *twice* in three-dimensional problem solving questions. We look for right angled triangles which contain two sides of given length.

Example 20

A room is 6 m by 4 m at floor level and the floor to ceiling height is 3 m. Find the distance from a floor corner point to the opposite corner point on the ceiling.



The required distance is AD. We join BD.

$$\text{In } \triangle BCD, \quad x^2 = 4^2 + 6^2 \quad \{\text{Pythagoras}\}$$

$$\text{In } \triangle ABD, \quad y^2 = x^2 + 3^2$$

$$\therefore y^2 = 4^2 + 6^2 + 3^2$$

$$\therefore y^2 = 61$$

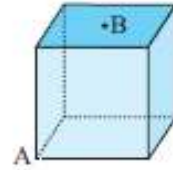
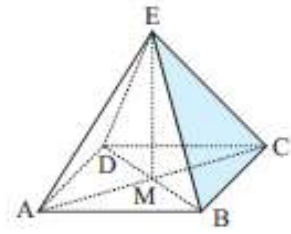
$$\therefore y = \pm\sqrt{61}$$

But $y > 0 \quad \therefore$ the required distance is $\sqrt{61} \doteq 7.81$ m. {to 3 s.f.}

- 5 A room is 6 m by 5 m and has a height of 3 m. Find the distance from a corner point on the floor to the opposite corner of the ceiling.
- 6 A rectangular box is 2 cm by 3 cm by 4 cm (internally). Find the length of the longest toothpick that can be placed within the box.
- 7 Determine the length of the longest piece of timber which could be stored in a rectangular shed 8 m by 5 m by 3 m high.

- 1** 12 cm **2** 11.6 cm **3** 8.24 cm **4** 3.46 cm
- 5** 8.37 m **6** 5.38 cm **7** 9.89 m **8** 141 m
- 9** $9.38 \text{ cm} \times 9.38 \text{ cm}$ **10** 1.22 m

- 8** ABCD is a square-based pyramid. E, the apex of the pyramid is vertically above M, the point of intersection of AC and BD. If an Egyptian Pharaoh wished to build a square-based pyramid with all edges 200 m, how high (to the nearest metre) would the pyramid reach above the desert sands?
- 9** A symmetrical square-based pyramid has height 10 cm and slant edges of 12 cm. Find the dimensions of its square base.
- 10** A cube has sides of length 1 m. B is at the centre of one face, and A is an opposite vertex. Find the direct distance from A to B.

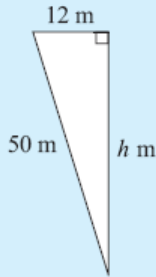
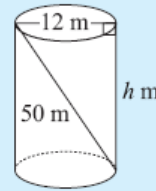


Chapter 4 G (Three Dimensional Problems)

Pythagoras' Rule is often used when finding lengths in **three-dimensional solids**.

Example 19

A 50 m rope is attached inside an empty cylindrical wheat silo of diameter 12 m as shown. How high is the wheat silo?



Let the height be h m.

$$\therefore h^2 + 12^2 = 50^2 \quad \{\text{Pythagoras}\}$$

$$\therefore h^2 + 144 = 2500$$

$$\therefore h^2 = 2356$$

$$\therefore h = \sqrt{2356} \quad \{\text{as } h > 0\}$$

$$\therefore h \doteq 48.5 \quad \{\text{to 3 s.f.}\}$$

i.e., the wheat silo is 48.5 m high.

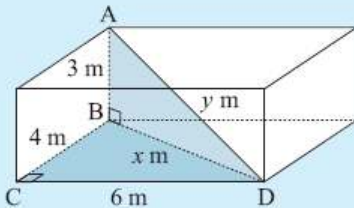
EXERCISE 4G

- 1 A cone has a slant height of 13 cm and a base radius of 5 cm. How high is the cone?
- 2 Find the length of the longest nail that could be put entirely within a cylindrical can of radius 3 cm and height 10 cm.
- 3 A 68 cm nail just fits inside a cylindrical can. The nail is removed and four identical spherical balls are fitted exactly within the can. What is the maximum radius of each ball?

The **rule of Pythagoras** is often used *twice* in three-dimensional problem solving questions. We look for right angled triangles which contain two sides of given length.

Example 20

A room is 6 m by 4 m at floor level and the floor to ceiling height is 3 m. Find the distance from a floor corner point to the opposite corner point on the ceiling.



The required distance is AD. We join BD.

$$\text{In } \triangle BCD, \quad x^2 = 4^2 + 6^2 \quad \{\text{Pythagoras}\}$$

$$\text{In } \triangle ABD, \quad y^2 = x^2 + 3^2$$

$$\therefore y^2 = 4^2 + 6^2 + 3^2$$

$$\therefore y^2 = 61$$

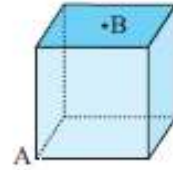
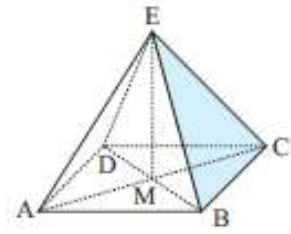
$$\therefore y = \pm\sqrt{61}$$

But $y > 0 \quad \therefore$ the required distance is $\sqrt{61} \doteq 7.81$ m. {to 3 s.f.}

- 5 A room is 6 m by 5 m and has a height of 3 m. Find the distance from a corner point on the floor to the opposite corner of the ceiling.
- 6 A rectangular box is 2 cm by 3 cm by 4 cm (internally). Find the length of the longest toothpick that can be placed within the box.
- 7 Determine the length of the longest piece of timber which could be stored in a rectangular shed 8 m by 5 m by 3 m high.

- 1** 12 cm **2** 11.6 cm **3** 8.24 cm **4** 3.46 cm
- 5** 8.37 m **6** 5.38 cm **7** 9.89 m **8** 141 m
- 9** $9.38 \text{ cm} \times 9.38 \text{ cm}$ **10** 1.22 m

- 8** ABCD is a square-based pyramid. E, the apex of the pyramid is vertically above M, the point of intersection of AC and BD. If an Egyptian Pharaoh wished to build a square-based pyramid with all edges 200 m, how high (to the nearest metre) would the pyramid reach above the desert sands?
- 9** A symmetrical square-based pyramid has height 10 cm and slant edges of 12 cm. Find the dimensions of its square base.
- 10** A cube has sides of length 1 m. B is at the centre of one face, and A is an opposite vertex. Find the direct distance from A to B.

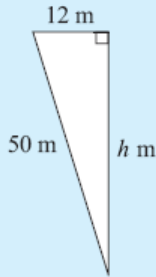
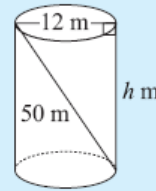


Chapter 4 G (Three Dimensional Problems)

Pythagoras' Rule is often used when finding lengths in **three-dimensional solids**.

Example 19

A 50 m rope is attached inside an empty cylindrical wheat silo of diameter 12 m as shown. How high is the wheat silo?



Let the height be h m.

$$\therefore h^2 + 12^2 = 50^2 \quad \{\text{Pythagoras}\}$$

$$\therefore h^2 + 144 = 2500$$

$$\therefore h^2 = 2356$$

$$\therefore h = \sqrt{2356} \quad \{\text{as } h > 0\}$$

$$\therefore h \doteq 48.5 \quad \{\text{to 3 s.f.}\}$$

i.e., the wheat silo is 48.5 m high.

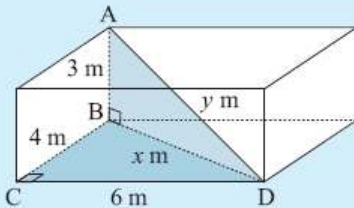
EXERCISE 4G

- 1 A cone has a slant height of 13 cm and a base radius of 5 cm. How high is the cone?
- 2 Find the length of the longest nail that could be put entirely within a cylindrical can of radius 3 cm and height 10 cm.
- 3 A 68 cm nail just fits inside a cylindrical can. The nail is removed and four identical spherical balls are fitted exactly within the can. What is the maximum radius of each ball?

The **rule of Pythagoras** is often used *twice* in three-dimensional problem solving questions. We look for right angled triangles which contain two sides of given length.

Example 20

A room is 6 m by 4 m at floor level and the floor to ceiling height is 3 m. Find the distance from a floor corner point to the opposite corner point on the ceiling.



The required distance is AD. We join BD.

$$\text{In } \triangle BCD, \quad x^2 = 4^2 + 6^2 \quad \{\text{Pythagoras}\}$$

$$\text{In } \triangle ABD, \quad y^2 = x^2 + 3^2$$

$$\therefore y^2 = 4^2 + 6^2 + 3^2$$

$$\therefore y^2 = 61$$

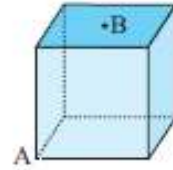
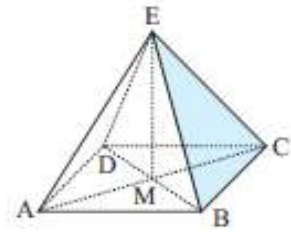
$$\therefore y = \pm\sqrt{61}$$

But $y > 0$ \therefore the required distance is $\sqrt{61} \doteq 7.81$ m. $\{\text{to 3 s.f.}\}$

- 5 A room is 6 m by 5 m and has a height of 3 m. Find the distance from a corner point on the floor to the opposite corner of the ceiling.
- 6 A rectangular box is 2 cm by 3 cm by 4 cm (internally). Find the length of the longest toothpick that can be placed within the box.
- 7 Determine the length of the longest piece of timber which could be stored in a rectangular shed 8 m by 5 m by 3 m high.

- 1** 12 cm **2** 11.6 cm **3** 8.24 cm **4** 3.46 cm
- 5** 8.37 m **6** 5.38 cm **7** 9.89 m **8** 141 m
- 9** $9.38 \text{ cm} \times 9.38 \text{ cm}$ **10** 1.22 m

- 8** ABCD is a square-based pyramid. E, the apex of the pyramid is vertically above M, the point of intersection of AC and BD. If an Egyptian Pharaoh wished to build a square-based pyramid with all edges 200 m, how high (to the nearest metre) would the pyramid reach above the desert sands?
- 9** A symmetrical square-based pyramid has height 10 cm and slant edges of 12 cm. Find the dimensions of its square base.
- 10** A cube has sides of length 1 m. B is at the centre of one face, and A is an opposite vertex. Find the direct distance from A to B.

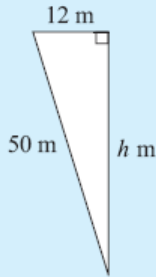
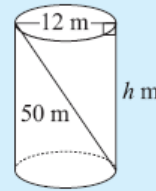


Chapter 4 G (Three Dimensional Problems)

Pythagoras' Rule is often used when finding lengths in **three-dimensional solids**.

Example 19

A 50 m rope is attached inside an empty cylindrical wheat silo of diameter 12 m as shown. How high is the wheat silo?



Let the height be h m.

$$\therefore h^2 + 12^2 = 50^2 \quad \{\text{Pythagoras}\}$$

$$\therefore h^2 + 144 = 2500$$

$$\therefore h^2 = 2356$$

$$\therefore h = \sqrt{2356} \quad \{\text{as } h > 0\}$$

$$\therefore h \doteq 48.5 \quad \{\text{to 3 s.f.}\}$$

i.e., the wheat silo is 48.5 m high.

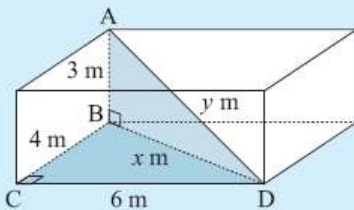
EXERCISE 4G

- 1 A cone has a slant height of 13 cm and a base radius of 5 cm. How high is the cone?
- 2 Find the length of the longest nail that could be put entirely within a cylindrical can of radius 3 cm and height 10 cm.
- 3 A 68 cm nail just fits inside a cylindrical can. The nail is removed and four identical spherical balls are fitted exactly within the can. What is the maximum radius of each ball?

The **rule of Pythagoras** is often used *twice* in three-dimensional problem solving questions. We look for right angled triangles which contain two sides of given length.

Example 20

A room is 6 m by 4 m at floor level and the floor to ceiling height is 3 m. Find the distance from a floor corner point to the opposite corner point on the ceiling.



The required distance is AD. We join BD.

$$\text{In } \triangle BCD, \quad x^2 = 4^2 + 6^2 \quad \{\text{Pythagoras}\}$$

$$\text{In } \triangle ABD, \quad y^2 = x^2 + 3^2$$

$$\therefore y^2 = 4^2 + 6^2 + 3^2$$

$$\therefore y^2 = 61$$

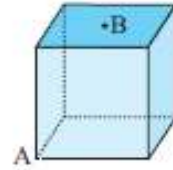
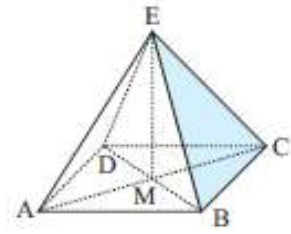
$$\therefore y = \pm\sqrt{61}$$

But $y > 0$ \therefore the required distance is $\sqrt{61} \doteq 7.81$ m. {to 3 s.f.}

- 5 A room is 6 m by 5 m and has a height of 3 m. Find the distance from a corner point on the floor to the opposite corner of the ceiling.
- 6 A rectangular box is 2 cm by 3 cm by 4 cm (internally). Find the length of the longest toothpick that can be placed within the box.
- 7 Determine the length of the longest piece of timber which could be stored in a rectangular shed 8 m by 5 m by 3 m high.

- 1** 12 cm **2** 11.6 cm **3** 8.24 cm **4** 3.46 cm
- 5** 8.37 m **6** 5.38 cm **7** 9.89 m **8** 141 m
- 9** $9.38 \text{ cm} \times 9.38 \text{ cm}$ **10** 1.22 m

- 8** ABCD is a square-based pyramid. E, the apex of the pyramid is vertically above M, the point of intersection of AC and BD. If an Egyptian Pharaoh wished to build a square-based pyramid with all edges 200 m, how high (to the nearest metre) would the pyramid reach above the desert sands?
- 9** A symmetrical square-based pyramid has height 10 cm and slant edges of 12 cm. Find the dimensions of its square base.
- 10** A cube has sides of length 1 m. B is at the centre of one face, and A is an opposite vertex. Find the direct distance from A to B.

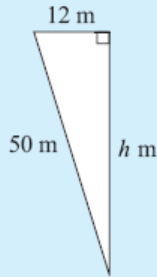
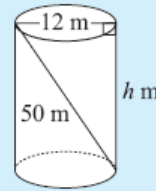


Chapter 4 G (Three Dimensional Problems)

Pythagoras' Rule is often used when finding lengths in **three-dimensional solids**.

Example 19

A 50 m rope is attached inside an empty cylindrical wheat silo of diameter 12 m as shown. How high is the wheat silo?



Let the height be h m.

$$\therefore h^2 + 12^2 = 50^2 \quad \{\text{Pythagoras}\}$$

$$\therefore h^2 + 144 = 2500$$

$$\therefore h^2 = 2356$$

$$\therefore h = \sqrt{2356} \quad \{\text{as } h > 0\}$$

$$\therefore h \doteq 48.5 \quad \{\text{to 3 s.f.}\}$$

i.e., the wheat silo is 48.5 m high.

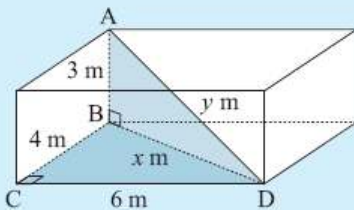
EXERCISE 4G

- 1 A cone has a slant height of 13 cm and a base radius of 5 cm. How high is the cone?
- 2 Find the length of the longest nail that could be put entirely within a cylindrical can of radius 3 cm and height 10 cm.
- 3 A 68 cm nail just fits inside a cylindrical can. The nail is removed and four identical spherical balls are fitted exactly within the can. What is the maximum radius of each ball?

The **rule of Pythagoras** is often used *twice* in three-dimensional problem solving questions. We look for right angled triangles which contain two sides of given length.

Example 20

A room is 6 m by 4 m at floor level and the floor to ceiling height is 3 m. Find the distance from a floor corner point to the opposite corner point on the ceiling.



The required distance is AD. We join BD.

$$\text{In } \triangle BCD, \quad x^2 = 4^2 + 6^2 \quad \{\text{Pythagoras}\}$$

$$\text{In } \triangle ABD, \quad y^2 = x^2 + 3^2$$

$$\therefore y^2 = 4^2 + 6^2 + 3^2$$

$$\therefore y^2 = 61$$

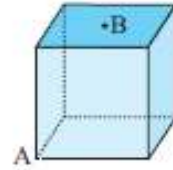
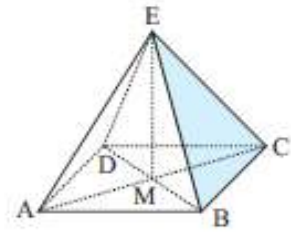
$$\therefore y = \pm\sqrt{61}$$

But $y > 0$ \therefore the required distance is $\sqrt{61} \doteq 7.81$ m. $\{\text{to 3 s.f.}\}$

- 5 A room is 6 m by 5 m and has a height of 3 m. Find the distance from a corner point on the floor to the opposite corner of the ceiling.
- 6 A rectangular box is 2 cm by 3 cm by 4 cm (internally). Find the length of the longest toothpick that can be placed within the box.
- 7 Determine the length of the longest piece of timber which could be stored in a rectangular shed 8 m by 5 m by 3 m high.

- 1** 12 cm **2** 11.6 cm **3** 8.24 cm **4** 3.46 cm
- 5** 8.37 m **6** 5.38 cm **7** 9.89 m **8** 141 m
- 9** $9.38 \text{ cm} \times 9.38 \text{ cm}$ **10** 1.22 m

- 8** ABCD is a square-based pyramid. E, the apex of the pyramid is vertically above M, the point of intersection of AC and BD. If an Egyptian Pharaoh wished to build a square-based pyramid with all edges 200 m, how high (to the nearest metre) would the pyramid reach above the desert sands?
- 9** A symmetrical square-based pyramid has height 10 cm and slant edges of 12 cm. Find the dimensions of its square base.
- 10** A cube has sides of length 1 m. B is at the centre of one face, and A is an opposite vertex. Find the direct distance from A to B.

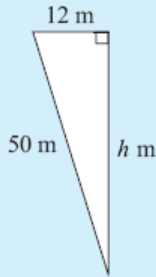
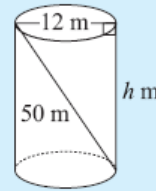


Chapter 4 G (Three Dimensional Problems)

Pythagoras' Rule is often used when finding lengths in **three-dimensional solids**.

Example 19

A 50 m rope is attached inside an empty cylindrical wheat silo of diameter 12 m as shown. How high is the wheat silo?



Let the height be h m.

$$\therefore h^2 + 12^2 = 50^2 \quad \{\text{Pythagoras}\}$$

$$\therefore h^2 + 144 = 2500$$

$$\therefore h^2 = 2356$$

$$\therefore h = \sqrt{2356} \quad \{\text{as } h > 0\}$$

$$\therefore h \doteq 48.5 \quad \{\text{to 3 s.f.}\}$$

i.e., the wheat silo is 48.5 m high.

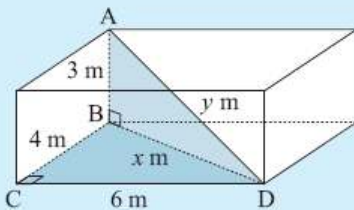
EXERCISE 4G

- 1 A cone has a slant height of 13 cm and a base radius of 5 cm. How high is the cone?
- 2 Find the length of the longest nail that could be put entirely within a cylindrical can of radius 3 cm and height 10 cm.
- 3 A 68 cm nail just fits inside a cylindrical can. The nail is removed and four identical spherical balls are fitted exactly within the can. What is the maximum radius of each ball?

The **rule of Pythagoras** is often used *twice* in three-dimensional problem solving questions. We look for right angled triangles which contain two sides of given length.

Example 20

A room is 6 m by 4 m at floor level and the floor to ceiling height is 3 m. Find the distance from a floor corner point to the opposite corner point on the ceiling.



The required distance is AD. We join BD.

$$\text{In } \triangle BCD, \quad x^2 = 4^2 + 6^2 \quad \{\text{Pythagoras}\}$$

$$\text{In } \triangle ABD, \quad y^2 = x^2 + 3^2$$

$$\therefore y^2 = 4^2 + 6^2 + 3^2$$

$$\therefore y^2 = 61$$

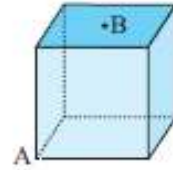
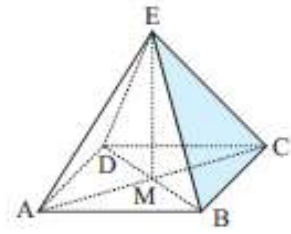
$$\therefore y = \pm\sqrt{61}$$

But $y > 0 \quad \therefore$ the required distance is $\sqrt{61} \doteq 7.81$ m. {to 3 s.f.}

- 5 A room is 6 m by 5 m and has a height of 3 m. Find the distance from a corner point on the floor to the opposite corner of the ceiling.
- 6 A rectangular box is 2 cm by 3 cm by 4 cm (internally). Find the length of the longest toothpick that can be placed within the box.
- 7 Determine the length of the longest piece of timber which could be stored in a rectangular shed 8 m by 5 m by 3 m high.

- 1** 12 cm **2** 11.6 cm **3** 8.24 cm **4** 3.46 cm
- 5** 8.37 m **6** 5.38 cm **7** 9.89 m **8** 141 m
- 9** 9.38 cm \times 9.38 cm **10** 1.22 m

- 8** ABCD is a square-based pyramid. E, the apex of the pyramid is vertically above M, the point of intersection of AC and BD. If an Egyptian Pharaoh wished to build a square-based pyramid with all edges 200 m, how high (to the nearest metre) would the pyramid reach above the desert sands?
- 9** A symmetrical square-based pyramid has height 10 cm and slant edges of 12 cm. Find the dimensions of its square base.
- 10** A cube has sides of length 1 m. B is at the centre of one face, and A is an opposite vertex. Find the direct distance from A to B.

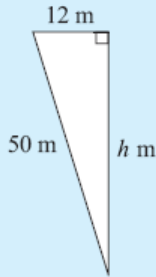
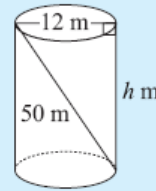


Chapter 4 G (Three Dimensional Problems)

Pythagoras' Rule is often used when finding lengths in **three-dimensional solids**.

Example 19

A 50 m rope is attached inside an empty cylindrical wheat silo of diameter 12 m as shown. How high is the wheat silo?



Let the height be h m.

$$\therefore h^2 + 12^2 = 50^2 \quad \{\text{Pythagoras}\}$$

$$\therefore h^2 + 144 = 2500$$

$$\therefore h^2 = 2356$$

$$\therefore h = \sqrt{2356} \quad \{\text{as } h > 0\}$$

$$\therefore h \doteq 48.5 \quad \{\text{to 3 s.f.}\}$$

i.e., the wheat silo is 48.5 m high.

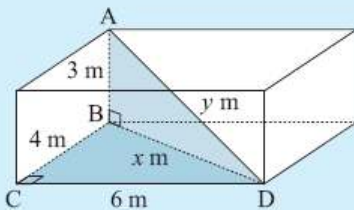
EXERCISE 4G

- 1 A cone has a slant height of 13 cm and a base radius of 5 cm. How high is the cone?
- 2 Find the length of the longest nail that could be put entirely within a cylindrical can of radius 3 cm and height 10 cm.
- 3 A 68 cm nail just fits inside a cylindrical can. The nail is removed and four identical spherical balls are fitted exactly within the can. What is the maximum radius of each ball?

The **rule of Pythagoras** is often used *twice* in three-dimensional problem solving questions. We look for right angled triangles which contain two sides of given length.

Example 20

A room is 6 m by 4 m at floor level and the floor to ceiling height is 3 m. Find the distance from a floor corner point to the opposite corner point on the ceiling.



The required distance is AD. We join BD.

$$\text{In } \triangle BCD, \quad x^2 = 4^2 + 6^2 \quad \{\text{Pythagoras}\}$$

$$\text{In } \triangle ABD, \quad y^2 = x^2 + 3^2$$

$$\therefore y^2 = 4^2 + 6^2 + 3^2$$

$$\therefore y^2 = 61$$

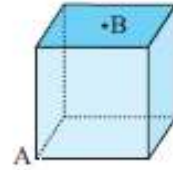
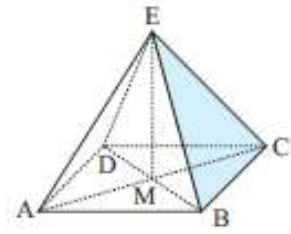
$$\therefore y = \pm\sqrt{61}$$

But $y > 0 \quad \therefore$ the required distance is $\sqrt{61} \doteq 7.81$ m. {to 3 s.f.}

- 5 A room is 6 m by 5 m and has a height of 3 m. Find the distance from a corner point on the floor to the opposite corner of the ceiling.
- 6 A rectangular box is 2 cm by 3 cm by 4 cm (internally). Find the length of the longest toothpick that can be placed within the box.
- 7 Determine the length of the longest piece of timber which could be stored in a rectangular shed 8 m by 5 m by 3 m high.

- 1** 12 cm **2** 11.6 cm **3** 8.24 cm **4** 3.46 cm
- 5** 8.37 m **6** 5.38 cm **7** 9.89 m **8** 141 m
- 9** $9.38 \text{ cm} \times 9.38 \text{ cm}$ **10** 1.22 m

- 8** ABCD is a square-based pyramid. E, the apex of the pyramid is vertically above M, the point of intersection of AC and BD. If an Egyptian Pharaoh wished to build a square-based pyramid with all edges 200 m, how high (to the nearest metre) would the pyramid reach above the desert sands?
- 9** A symmetrical square-based pyramid has height 10 cm and slant edges of 12 cm. Find the dimensions of its square base.
- 10** A cube has sides of length 1 m. B is at the centre of one face, and A is an opposite vertex. Find the direct distance from A to B.

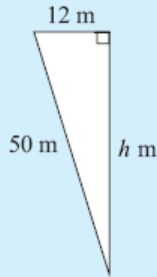
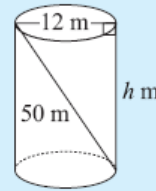


Chapter 4 G (Three Dimensional Problems)

Pythagoras' Rule is often used when finding lengths in **three-dimensional solids**.

Example 19

A 50 m rope is attached inside an empty cylindrical wheat silo of diameter 12 m as shown. How high is the wheat silo?



Let the height be h m.

$$\therefore h^2 + 12^2 = 50^2 \quad \{\text{Pythagoras}\}$$

$$\therefore h^2 + 144 = 2500$$

$$\therefore h^2 = 2356$$

$$\therefore h = \sqrt{2356} \quad \{\text{as } h > 0\}$$

$$\therefore h \doteq 48.5 \quad \{\text{to 3 s.f.}\}$$

i.e., the wheat silo is 48.5 m high.

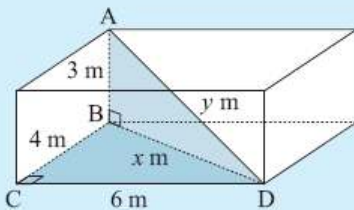
EXERCISE 4G

- 1 A cone has a slant height of 13 cm and a base radius of 5 cm. How high is the cone?
- 2 Find the length of the longest nail that could be put entirely within a cylindrical can of radius 3 cm and height 10 cm.
- 3 A 68 cm nail just fits inside a cylindrical can. The nail is removed and four identical spherical balls are fitted exactly within the can. What is the maximum radius of each ball?

The **rule of Pythagoras** is often used *twice* in three-dimensional problem solving questions. We look for right angled triangles which contain two sides of given length.

Example 20

A room is 6 m by 4 m at floor level and the floor to ceiling height is 3 m. Find the distance from a floor corner point to the opposite corner point on the ceiling.



The required distance is AD. We join BD.

$$\text{In } \triangle BCD, \quad x^2 = 4^2 + 6^2 \quad \{\text{Pythagoras}\}$$

$$\text{In } \triangle ABD, \quad y^2 = x^2 + 3^2$$

$$\therefore y^2 = 4^2 + 6^2 + 3^2$$

$$\therefore y^2 = 61$$

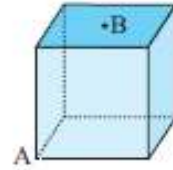
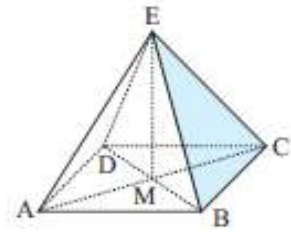
$$\therefore y = \pm\sqrt{61}$$

But $y > 0 \quad \therefore$ the required distance is $\sqrt{61} \doteq 7.81$ m. {to 3 s.f.}

- 5 A room is 6 m by 5 m and has a height of 3 m. Find the distance from a corner point on the floor to the opposite corner of the ceiling.
- 6 A rectangular box is 2 cm by 3 cm by 4 cm (internally). Find the length of the longest toothpick that can be placed within the box.
- 7 Determine the length of the longest piece of timber which could be stored in a rectangular shed 8 m by 5 m by 3 m high.

- 1** 12 cm **2** 11.6 cm **3** 8.24 cm **4** 3.46 cm
- 5** 8.37 m **6** 5.38 cm **7** 9.89 m **8** 141 m
- 9** $9.38 \text{ cm} \times 9.38 \text{ cm}$ **10** 1.22 m

- 8** ABCD is a square-based pyramid. E, the apex of the pyramid is vertically above M, the point of intersection of AC and BD. If an Egyptian Pharaoh wished to build a square-based pyramid with all edges 200 m, how high (to the nearest metre) would the pyramid reach above the desert sands?
- 9** A symmetrical square-based pyramid has height 10 cm and slant edges of 12 cm. Find the dimensions of its square base.
- 10** A cube has sides of length 1 m. B is at the centre of one face, and A is an opposite vertex. Find the direct distance from A to B.

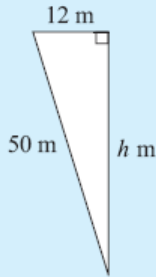
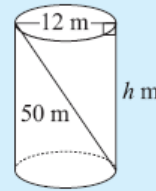


Chapter 4 G (Three Dimensional Problems)

Pythagoras' Rule is often used when finding lengths in **three-dimensional solids**.

Example 19

A 50 m rope is attached inside an empty cylindrical wheat silo of diameter 12 m as shown. How high is the wheat silo?



Let the height be h m.

$$\therefore h^2 + 12^2 = 50^2 \quad \{\text{Pythagoras}\}$$

$$\therefore h^2 + 144 = 2500$$

$$\therefore h^2 = 2356$$

$$\therefore h = \sqrt{2356} \quad \{\text{as } h > 0\}$$

$$\therefore h \doteq 48.5 \quad \{\text{to 3 s.f.}\}$$

i.e., the wheat silo is 48.5 m high.

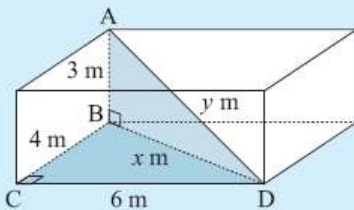
EXERCISE 4G

- 1 A cone has a slant height of 13 cm and a base radius of 5 cm. How high is the cone?
- 2 Find the length of the longest nail that could be put entirely within a cylindrical can of radius 3 cm and height 10 cm.
- 3 A 68 cm nail just fits inside a cylindrical can. The nail is removed and four identical spherical balls are fitted exactly within the can. What is the maximum radius of each ball?

The **rule of Pythagoras** is often used *twice* in three-dimensional problem solving questions. We look for right angled triangles which contain two sides of given length.

Example 20

A room is 6 m by 4 m at floor level and the floor to ceiling height is 3 m. Find the distance from a floor corner point to the opposite corner point on the ceiling.



The required distance is AD. We join BD.

$$\text{In } \triangle BCD, \quad x^2 = 4^2 + 6^2 \quad \{\text{Pythagoras}\}$$

$$\text{In } \triangle ABD, \quad y^2 = x^2 + 3^2$$

$$\therefore y^2 = 4^2 + 6^2 + 3^2$$

$$\therefore y^2 = 61$$

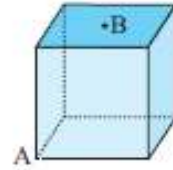
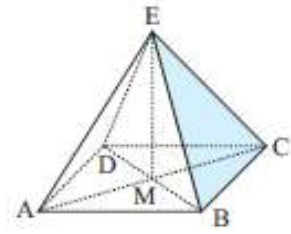
$$\therefore y = \pm\sqrt{61}$$

But $y > 0 \quad \therefore$ the required distance is $\sqrt{61} \doteq 7.81$ m. $\{\text{to 3 s.f.}\}$

- 5 A room is 6 m by 5 m and has a height of 3 m. Find the distance from a corner point on the floor to the opposite corner of the ceiling.
- 6 A rectangular box is 2 cm by 3 cm by 4 cm (internally). Find the length of the longest toothpick that can be placed within the box.
- 7 Determine the length of the longest piece of timber which could be stored in a rectangular shed 8 m by 5 m by 3 m high.

- 1** 12 cm **2** 11.6 cm **3** 8.24 cm **4** 3.46 cm
- 5** 8.37 m **6** 5.38 cm **7** 9.89 m **8** 141 m
- 9** $9.38 \text{ cm} \times 9.38 \text{ cm}$ **10** 1.22 m

- 8** ABCD is a square-based pyramid. E, the apex of the pyramid is vertically above M, the point of intersection of AC and BD. If an Egyptian Pharaoh wished to build a square-based pyramid with all edges 200 m, how high (to the nearest metre) would the pyramid reach above the desert sands?
- 9** A symmetrical square-based pyramid has height 10 cm and slant edges of 12 cm. Find the dimensions of its square base.
- 10** A cube has sides of length 1 m. B is at the centre of one face, and A is an opposite vertex. Find the direct distance from A to B.

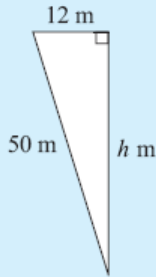
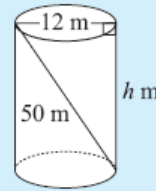


Chapter 4 G (Three Dimensional Problems)

Pythagoras' Rule is often used when finding lengths in **three-dimensional solids**.

Example 19

A 50 m rope is attached inside an empty cylindrical wheat silo of diameter 12 m as shown. How high is the wheat silo?



Let the height be h m.

$$\therefore h^2 + 12^2 = 50^2 \quad \{\text{Pythagoras}\}$$

$$\therefore h^2 + 144 = 2500$$

$$\therefore h^2 = 2356$$

$$\therefore h = \sqrt{2356} \quad \{\text{as } h > 0\}$$

$$\therefore h \doteq 48.5 \quad \{\text{to 3 s.f.}\}$$

i.e., the wheat silo is 48.5 m high.

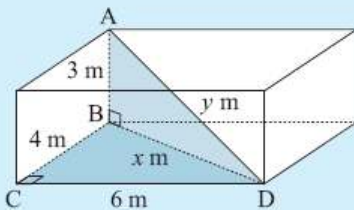
EXERCISE 4G

- 1 A cone has a slant height of 13 cm and a base radius of 5 cm. How high is the cone?
- 2 Find the length of the longest nail that could be put entirely within a cylindrical can of radius 3 cm and height 10 cm.
- 3 A 68 cm nail just fits inside a cylindrical can. The nail is removed and four identical spherical balls are fitted exactly within the can. What is the maximum radius of each ball?

The **rule of Pythagoras** is often used *twice* in three-dimensional problem solving questions. We look for right angled triangles which contain two sides of given length.

Example 20

A room is 6 m by 4 m at floor level and the floor to ceiling height is 3 m. Find the distance from a floor corner point to the opposite corner point on the ceiling.



The required distance is AD. We join BD.

$$\text{In } \triangle BCD, \quad x^2 = 4^2 + 6^2 \quad \{\text{Pythagoras}\}$$

$$\text{In } \triangle ABD, \quad y^2 = x^2 + 3^2$$

$$\therefore y^2 = 4^2 + 6^2 + 3^2$$

$$\therefore y^2 = 61$$

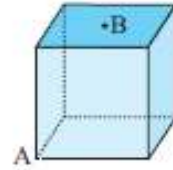
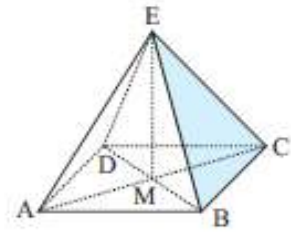
$$\therefore y = \pm\sqrt{61}$$

But $y > 0$ \therefore the required distance is $\sqrt{61} \doteq 7.81$ m. {to 3 s.f.}

- 5 A room is 6 m by 5 m and has a height of 3 m. Find the distance from a corner point on the floor to the opposite corner of the ceiling.
- 6 A rectangular box is 2 cm by 3 cm by 4 cm (internally). Find the length of the longest toothpick that can be placed within the box.
- 7 Determine the length of the longest piece of timber which could be stored in a rectangular shed 8 m by 5 m by 3 m high.

- 1** 12 cm **2** 11.6 cm **3** 8.24 cm **4** 3.46 cm
- 5** 8.37 m **6** 5.38 cm **7** 9.89 m **8** 141 m
- 9** $9.38 \text{ cm} \times 9.38 \text{ cm}$ **10** 1.22 m

- 8** ABCD is a square-based pyramid. E, the apex of the pyramid is vertically above M, the point of intersection of AC and BD. If an Egyptian Pharaoh wished to build a square-based pyramid with all edges 200 m, how high (to the nearest metre) would the pyramid reach above the desert sands?
- 9** A symmetrical square-based pyramid has height 10 cm and slant edges of 12 cm. Find the dimensions of its square base.
- 10** A cube has sides of length 1 m. B is at the centre of one face, and A is an opposite vertex. Find the direct distance from A to B.

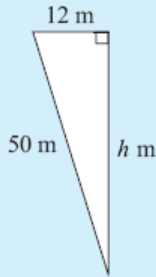
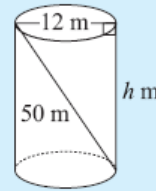


Chapter 4 G (Three Dimensional Problems)

Pythagoras' Rule is often used when finding lengths in **three-dimensional solids**.

Example 19

A 50 m rope is attached inside an empty cylindrical wheat silo of diameter 12 m as shown. How high is the wheat silo?



Let the height be h m.

$$\therefore h^2 + 12^2 = 50^2 \quad \{\text{Pythagoras}\}$$

$$\therefore h^2 + 144 = 2500$$

$$\therefore h^2 = 2356$$

$$\therefore h = \sqrt{2356} \quad \{\text{as } h > 0\}$$

$$\therefore h \doteq 48.5 \quad \{\text{to 3 s.f.}\}$$

i.e., the wheat silo is 48.5 m high.

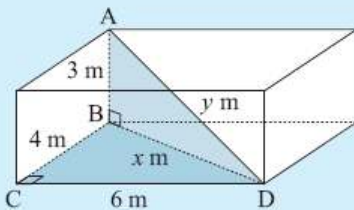
EXERCISE 4G

- 1 A cone has a slant height of 13 cm and a base radius of 5 cm. How high is the cone?
- 2 Find the length of the longest nail that could be put entirely within a cylindrical can of radius 3 cm and height 10 cm.
- 3 A 68 cm nail just fits inside a cylindrical can. The nail is removed and four identical spherical balls are fitted exactly within the can. What is the maximum radius of each ball?

The **rule of Pythagoras** is often used *twice* in three-dimensional problem solving questions. We look for right angled triangles which contain two sides of given length.

Example 20

A room is 6 m by 4 m at floor level and the floor to ceiling height is 3 m. Find the distance from a floor corner point to the opposite corner point on the ceiling.



The required distance is AD. We join BD.

$$\text{In } \triangle BCD, \quad x^2 = 4^2 + 6^2 \quad \{\text{Pythagoras}\}$$

$$\text{In } \triangle ABD, \quad y^2 = x^2 + 3^2$$

$$\therefore y^2 = 4^2 + 6^2 + 3^2$$

$$\therefore y^2 = 61$$

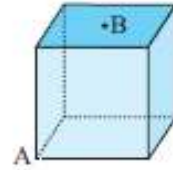
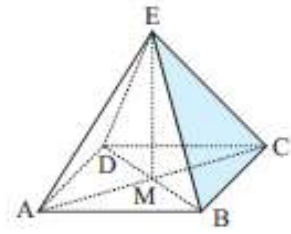
$$\therefore y = \pm\sqrt{61}$$

But $y > 0$ \therefore the required distance is $\sqrt{61} \doteq 7.81$ m. {to 3 s.f.}

- 5 A room is 6 m by 5 m and has a height of 3 m. Find the distance from a corner point on the floor to the opposite corner of the ceiling.
- 6 A rectangular box is 2 cm by 3 cm by 4 cm (internally). Find the length of the longest toothpick that can be placed within the box.
- 7 Determine the length of the longest piece of timber which could be stored in a rectangular shed 8 m by 5 m by 3 m high.

- 1** 12 cm **2** 11.6 cm **3** 8.24 cm **4** 3.46 cm
5 8.37 m **6** 5.38 cm **7** 9.89 m **8** 141 m
9 $9.38 \text{ cm} \times 9.38 \text{ cm}$ **10** 1.22 m

- 8** ABCD is a square-based pyramid. E, the apex of the pyramid is vertically above M, the point of intersection of AC and BD. If an Egyptian Pharoah wished to build a square-based pyramid with all edges 200 m, how high (to the nearest metre) would the pyramid reach above the desert sands?
- 9** A symmetrical square-based pyramid has height 10 cm and slant edges of 12 cm. Find the dimensions of its square base.
- 10** A cube has sides of length 1 m. B is at the centre of one face, and A is an opposite vertex. Find the direct distance from A to B.

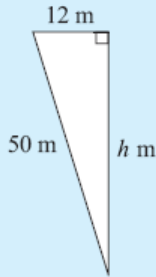
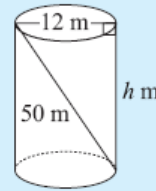


Chapter 4 G (Three Dimensional Problems)

Pythagoras' Rule is often used when finding lengths in **three-dimensional solids**.

Example 19

A 50 m rope is attached inside an empty cylindrical wheat silo of diameter 12 m as shown. How high is the wheat silo?



Let the height be h m.

$$\therefore h^2 + 12^2 = 50^2 \quad \{\text{Pythagoras}\}$$

$$\therefore h^2 + 144 = 2500$$

$$\therefore h^2 = 2356$$

$$\therefore h = \sqrt{2356} \quad \{\text{as } h > 0\}$$

$$\therefore h \doteq 48.5 \quad \{\text{to 3 s.f.}\}$$

i.e., the wheat silo is 48.5 m high.

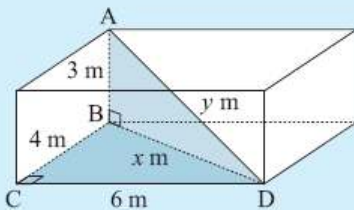
EXERCISE 4G

- 1 A cone has a slant height of 13 cm and a base radius of 5 cm. How high is the cone?
- 2 Find the length of the longest nail that could be put entirely within a cylindrical can of radius 3 cm and height 10 cm.
- 3 A 68 cm nail just fits inside a cylindrical can. The nail is removed and four identical spherical balls are fitted exactly within the can. What is the maximum radius of each ball?

The **rule of Pythagoras** is often used *twice* in three-dimensional problem solving questions. We look for right angled triangles which contain two sides of given length.

Example 20

A room is 6 m by 4 m at floor level and the floor to ceiling height is 3 m. Find the distance from a floor corner point to the opposite corner point on the ceiling.



The required distance is AD. We join BD.

$$\text{In } \triangle BCD, \quad x^2 = 4^2 + 6^2 \quad \{\text{Pythagoras}\}$$

$$\text{In } \triangle ABD, \quad y^2 = x^2 + 3^2$$

$$\therefore y^2 = 4^2 + 6^2 + 3^2$$

$$\therefore y^2 = 61$$

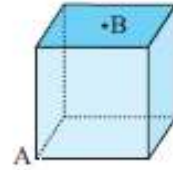
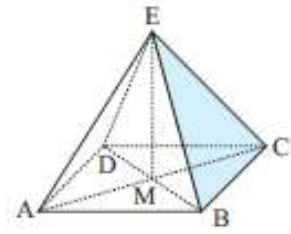
$$\therefore y = \pm\sqrt{61}$$

But $y > 0 \quad \therefore$ the required distance is $\sqrt{61} \doteq 7.81$ m. {to 3 s.f.}

- 5 A room is 6 m by 5 m and has a height of 3 m. Find the distance from a corner point on the floor to the opposite corner of the ceiling.
- 6 A rectangular box is 2 cm by 3 cm by 4 cm (internally). Find the length of the longest toothpick that can be placed within the box.
- 7 Determine the length of the longest piece of timber which could be stored in a rectangular shed 8 m by 5 m by 3 m high.

- 1** 12 cm **2** 11.6 cm **3** 8.24 cm **4** 3.46 cm
- 5** 8.37 m **6** 5.38 cm **7** 9.89 m **8** 141 m
- 9** $9.38 \text{ cm} \times 9.38 \text{ cm}$ **10** 1.22 m

- 8** ABCD is a square-based pyramid. E, the apex of the pyramid is vertically above M, the point of intersection of AC and BD. If an Egyptian Pharaoh wished to build a square-based pyramid with all edges 200 m, how high (to the nearest metre) would the pyramid reach above the desert sands?
- 9** A symmetrical square-based pyramid has height 10 cm and slant edges of 12 cm. Find the dimensions of its square base.
- 10** A cube has sides of length 1 m. B is at the centre of one face, and A is an opposite vertex. Find the direct distance from A to B.

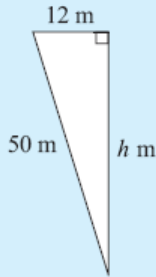
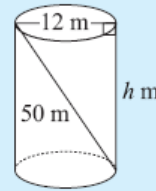


Chapter 4 G (Three Dimensional Problems)

Pythagoras' Rule is often used when finding lengths in **three-dimensional solids**.

Example 19

A 50 m rope is attached inside an empty cylindrical wheat silo of diameter 12 m as shown. How high is the wheat silo?



Let the height be h m.

$$\therefore h^2 + 12^2 = 50^2 \quad \{\text{Pythagoras}\}$$

$$\therefore h^2 + 144 = 2500$$

$$\therefore h^2 = 2356$$

$$\therefore h = \sqrt{2356} \quad \{\text{as } h > 0\}$$

$$\therefore h \doteq 48.5 \quad \{\text{to 3 s.f.}\}$$

i.e., the wheat silo is 48.5 m high.

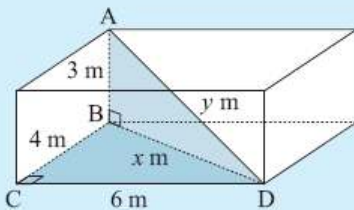
EXERCISE 4G

- 1 A cone has a slant height of 13 cm and a base radius of 5 cm. How high is the cone?
- 2 Find the length of the longest nail that could be put entirely within a cylindrical can of radius 3 cm and height 10 cm.
- 3 A 68 cm nail just fits inside a cylindrical can. The nail is removed and four identical spherical balls are fitted exactly within the can. What is the maximum radius of each ball?

The **rule of Pythagoras** is often used *twice* in three-dimensional problem solving questions. We look for right angled triangles which contain two sides of given length.

Example 20

A room is 6 m by 4 m at floor level and the floor to ceiling height is 3 m. Find the distance from a floor corner point to the opposite corner point on the ceiling.



The required distance is AD. We join BD.

$$\text{In } \triangle BCD, \quad x^2 = 4^2 + 6^2 \quad \{\text{Pythagoras}\}$$

$$\text{In } \triangle ABD, \quad y^2 = x^2 + 3^2$$

$$\therefore y^2 = 4^2 + 6^2 + 3^2$$

$$\therefore y^2 = 61$$

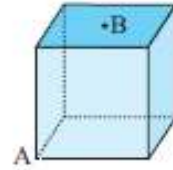
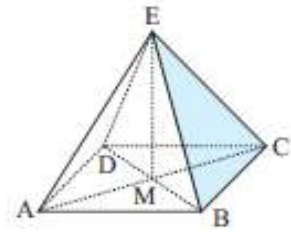
$$\therefore y = \pm\sqrt{61}$$

But $y > 0 \quad \therefore$ the required distance is $\sqrt{61} \doteq 7.81$ m. {to 3 s.f.}

- 5 A room is 6 m by 5 m and has a height of 3 m. Find the distance from a corner point on the floor to the opposite corner of the ceiling.
- 6 A rectangular box is 2 cm by 3 cm by 4 cm (internally). Find the length of the longest toothpick that can be placed within the box.
- 7 Determine the length of the longest piece of timber which could be stored in a rectangular shed 8 m by 5 m by 3 m high.

- 1** 12 cm **2** 11.6 cm **3** 8.24 cm **4** 3.46 cm
- 5** 8.37 m **6** 5.38 cm **7** 9.89 m **8** 141 m
- 9** 9.38 cm × 9.38 cm **10** 1.22 m

- 8** ABCD is a square-based pyramid. E, the apex of the pyramid is vertically above M, the point of intersection of AC and BD. If an Egyptian Pharoah wished to build a square-based pyramid with all edges 200 m, how high (to the nearest metre) would the pyramid reach above the desert sands?
- 9** A symmetrical square-based pyramid has height 10 cm and slant edges of 12 cm. Find the dimensions of its square base.
- 10** A cube has sides of length 1 m. B is at the centre of one face, and A is an opposite vertex. Find the direct distance from A to B.

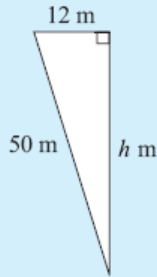
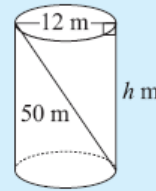


Chapter 4 G (Three Dimensional Problems)

Pythagoras' Rule is often used when finding lengths in **three-dimensional solids**.

Example 19

A 50 m rope is attached inside an empty cylindrical wheat silo of diameter 12 m as shown. How high is the wheat silo?



Let the height be h m.

$$\therefore h^2 + 12^2 = 50^2 \quad \{\text{Pythagoras}\}$$

$$\therefore h^2 + 144 = 2500$$

$$\therefore h^2 = 2356$$

$$\therefore h = \sqrt{2356} \quad \{\text{as } h > 0\}$$

$$\therefore h \doteq 48.5 \quad \{\text{to 3 s.f.}\}$$

i.e., the wheat silo is 48.5 m high.

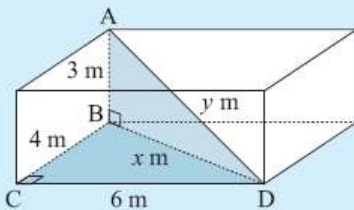
EXERCISE 4G

- 1 A cone has a slant height of 13 cm and a base radius of 5 cm. How high is the cone?
- 2 Find the length of the longest nail that could be put entirely within a cylindrical can of radius 3 cm and height 10 cm.
- 3 A 68 cm nail just fits inside a cylindrical can. The nail is removed and four identical spherical balls are fitted exactly within the can. What is the maximum radius of each ball?

The **rule of Pythagoras** is often used *twice* in three-dimensional problem solving questions. We look for right angled triangles which contain two sides of given length.

Example 20

A room is 6 m by 4 m at floor level and the floor to ceiling height is 3 m. Find the distance from a floor corner point to the opposite corner point on the ceiling.



The required distance is AD. We join BD.

$$\text{In } \triangle BCD, \quad x^2 = 4^2 + 6^2 \quad \{\text{Pythagoras}\}$$

$$\text{In } \triangle ABD, \quad y^2 = x^2 + 3^2$$

$$\therefore y^2 = 4^2 + 6^2 + 3^2$$

$$\therefore y^2 = 61$$

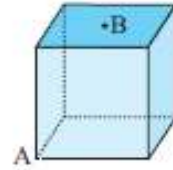
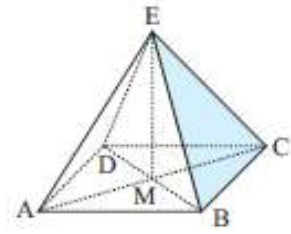
$$\therefore y = \pm\sqrt{61}$$

But $y > 0$ \therefore the required distance is $\sqrt{61} \doteq 7.81$ m. {to 3 s.f.}

- 5 A room is 6 m by 5 m and has a height of 3 m. Find the distance from a corner point on the floor to the opposite corner of the ceiling.
- 6 A rectangular box is 2 cm by 3 cm by 4 cm (internally). Find the length of the longest toothpick that can be placed within the box.
- 7 Determine the length of the longest piece of timber which could be stored in a rectangular shed 8 m by 5 m by 3 m high.

- 1** 12 cm **2** 11.6 cm **3** 8.24 cm **4** 3.46 cm
- 5** 8.37 m **6** 5.38 cm **7** 9.89 m **8** 141 m
- 9** $9.38 \text{ cm} \times 9.38 \text{ cm}$ **10** 1.22 m

- 8** ABCD is a square-based pyramid. E, the apex of the pyramid is vertically above M, the point of intersection of AC and BD. If an Egyptian Pharaoh wished to build a square-based pyramid with all edges 200 m, how high (to the nearest metre) would the pyramid reach above the desert sands?
- 9** A symmetrical square-based pyramid has height 10 cm and slant edges of 12 cm. Find the dimensions of its square base.
- 10** A cube has sides of length 1 m. B is at the centre of one face, and A is an opposite vertex. Find the direct distance from A to B.

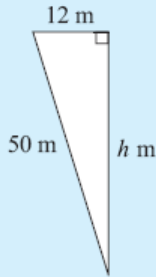
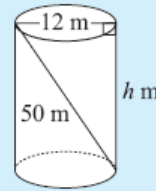


Chapter 4 G (Three Dimensional Problems)

Pythagoras' Rule is often used when finding lengths in **three-dimensional solids**.

Example 19

A 50 m rope is attached inside an empty cylindrical wheat silo of diameter 12 m as shown. How high is the wheat silo?



Let the height be h m.

$$\therefore h^2 + 12^2 = 50^2 \quad \{\text{Pythagoras}\}$$

$$\therefore h^2 + 144 = 2500$$

$$\therefore h^2 = 2356$$

$$\therefore h = \sqrt{2356} \quad \{\text{as } h > 0\}$$

$$\therefore h \doteq 48.5 \quad \{\text{to 3 s.f.}\}$$

i.e., the wheat silo is 48.5 m high.

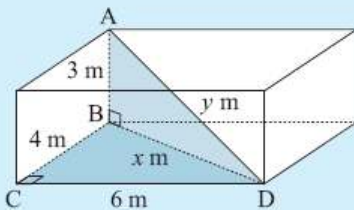
EXERCISE 4G

- 1 A cone has a slant height of 13 cm and a base radius of 5 cm. How high is the cone?
- 2 Find the length of the longest nail that could be put entirely within a cylindrical can of radius 3 cm and height 10 cm.
- 3 A 68 cm nail just fits inside a cylindrical can. The nail is removed and four identical spherical balls are fitted exactly within the can. What is the maximum radius of each ball?

The **rule of Pythagoras** is often used *twice* in three-dimensional problem solving questions. We look for right angled triangles which contain two sides of given length.

Example 20

A room is 6 m by 4 m at floor level and the floor to ceiling height is 3 m. Find the distance from a floor corner point to the opposite corner point on the ceiling.



The required distance is AD. We join BD.

$$\text{In } \triangle BCD, \quad x^2 = 4^2 + 6^2 \quad \{\text{Pythagoras}\}$$

$$\text{In } \triangle ABD, \quad y^2 = x^2 + 3^2$$

$$\therefore y^2 = 4^2 + 6^2 + 3^2$$

$$\therefore y^2 = 61$$

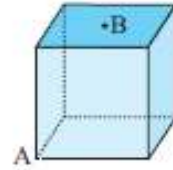
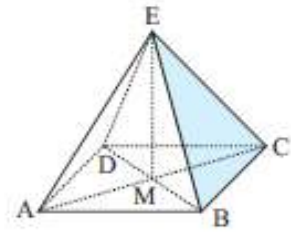
$$\therefore y = \pm\sqrt{61}$$

But $y > 0 \quad \therefore$ the required distance is $\sqrt{61} \doteq 7.81$ m. {to 3 s.f.}

- 5 A room is 6 m by 5 m and has a height of 3 m. Find the distance from a corner point on the floor to the opposite corner of the ceiling.
- 6 A rectangular box is 2 cm by 3 cm by 4 cm (internally). Find the length of the longest toothpick that can be placed within the box.
- 7 Determine the length of the longest piece of timber which could be stored in a rectangular shed 8 m by 5 m by 3 m high.

- 1** 12 cm **2** 11.6 cm **3** 8.24 cm **4** 3.46 cm
- 5** 8.37 m **6** 5.38 cm **7** 9.89 m **8** 141 m
- 9** $9.38 \text{ cm} \times 9.38 \text{ cm}$ **10** 1.22 m

- 8** ABCD is a square-based pyramid. E, the apex of the pyramid is vertically above M, the point of intersection of AC and BD. If an Egyptian Pharaoh wished to build a square-based pyramid with all edges 200 m, how high (to the nearest metre) would the pyramid reach above the desert sands?
- 9** A symmetrical square-based pyramid has height 10 cm and slant edges of 12 cm. Find the dimensions of its square base.
- 10** A cube has sides of length 1 m. B is at the centre of one face, and A is an opposite vertex. Find the direct distance from A to B.

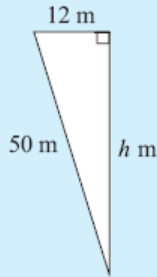
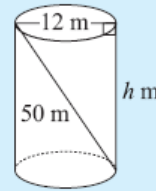


Chapter 4 G (Three Dimensional Problems)

Pythagoras' Rule is often used when finding lengths in **three-dimensional solids**.

Example 19

A 50 m rope is attached inside an empty cylindrical wheat silo of diameter 12 m as shown. How high is the wheat silo?



Let the height be h m.

$$\therefore h^2 + 12^2 = 50^2 \quad \{\text{Pythagoras}\}$$

$$\therefore h^2 + 144 = 2500$$

$$\therefore h^2 = 2356$$

$$\therefore h = \sqrt{2356} \quad \{\text{as } h > 0\}$$

$$\therefore h \doteq 48.5 \quad \{\text{to 3 s.f.}\}$$

i.e., the wheat silo is 48.5 m high.

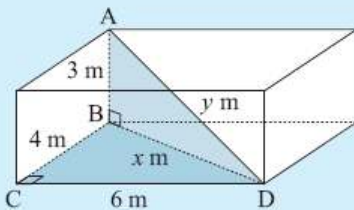
EXERCISE 4G

- 1 A cone has a slant height of 13 cm and a base radius of 5 cm. How high is the cone?
- 2 Find the length of the longest nail that could be put entirely within a cylindrical can of radius 3 cm and height 10 cm.
- 3 A 68 cm nail just fits inside a cylindrical can. The nail is removed and four identical spherical balls are fitted exactly within the can. What is the maximum radius of each ball?

The **rule of Pythagoras** is often used *twice* in three-dimensional problem solving questions. We look for right angled triangles which contain two sides of given length.

Example 20

A room is 6 m by 4 m at floor level and the floor to ceiling height is 3 m. Find the distance from a floor corner point to the opposite corner point on the ceiling.



The required distance is AD. We join BD.

$$\text{In } \triangle BCD, \quad x^2 = 4^2 + 6^2 \quad \{\text{Pythagoras}\}$$

$$\text{In } \triangle ABD, \quad y^2 = x^2 + 3^2$$

$$\therefore y^2 = 4^2 + 6^2 + 3^2$$

$$\therefore y^2 = 61$$

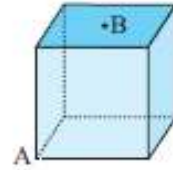
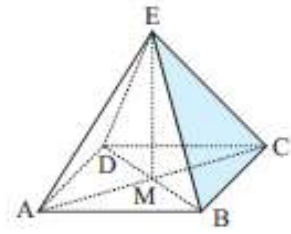
$$\therefore y = \pm\sqrt{61}$$

But $y > 0$ \therefore the required distance is $\sqrt{61} \doteq 7.81$ m. $\{\text{to 3 s.f.}\}$

- 5 A room is 6 m by 5 m and has a height of 3 m. Find the distance from a corner point on the floor to the opposite corner of the ceiling.
- 6 A rectangular box is 2 cm by 3 cm by 4 cm (internally). Find the length of the longest toothpick that can be placed within the box.
- 7 Determine the length of the longest piece of timber which could be stored in a rectangular shed 8 m by 5 m by 3 m high.

- 1** 12 cm **2** 11.6 cm **3** 8.24 cm **4** 3.46 cm
- 5** 8.37 m **6** 5.38 cm **7** 9.89 m **8** 141 m
- 9** $9.38 \text{ cm} \times 9.38 \text{ cm}$ **10** 1.22 m

- 8** ABCD is a square-based pyramid. E, the apex of the pyramid is vertically above M, the point of intersection of AC and BD. If an Egyptian Pharaoh wished to build a square-based pyramid with all edges 200 m, how high (to the nearest metre) would the pyramid reach above the desert sands?
- 9** A symmetrical square-based pyramid has height 10 cm and slant edges of 12 cm. Find the dimensions of its square base.
- 10** A cube has sides of length 1 m. B is at the centre of one face, and A is an opposite vertex. Find the direct distance from A to B.

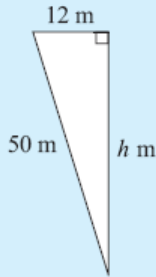
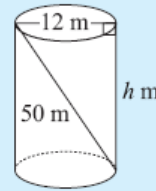


Chapter 4 G (Three Dimensional Problems)

Pythagoras' Rule is often used when finding lengths in **three-dimensional solids**.

Example 19

A 50 m rope is attached inside an empty cylindrical wheat silo of diameter 12 m as shown. How high is the wheat silo?



Let the height be h m.

$$\therefore h^2 + 12^2 = 50^2 \quad \{\text{Pythagoras}\}$$

$$\therefore h^2 + 144 = 2500$$

$$\therefore h^2 = 2356$$

$$\therefore h = \sqrt{2356} \quad \{\text{as } h > 0\}$$

$$\therefore h \doteq 48.5 \quad \{\text{to 3 s.f.}\}$$

i.e., the wheat silo is 48.5 m high.

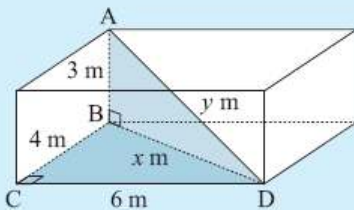
EXERCISE 4G

- 1 A cone has a slant height of 13 cm and a base radius of 5 cm. How high is the cone?
- 2 Find the length of the longest nail that could be put entirely within a cylindrical can of radius 3 cm and height 10 cm.
- 3 A 68 cm nail just fits inside a cylindrical can. The nail is removed and four identical spherical balls are fitted exactly within the can. What is the maximum radius of each ball?

The **rule of Pythagoras** is often used *twice* in three-dimensional problem solving questions. We look for right angled triangles which contain two sides of given length.

Example 20

A room is 6 m by 4 m at floor level and the floor to ceiling height is 3 m. Find the distance from a floor corner point to the opposite corner point on the ceiling.



The required distance is AD. We join BD.

$$\text{In } \triangle BCD, \quad x^2 = 4^2 + 6^2 \quad \{\text{Pythagoras}\}$$

$$\text{In } \triangle ABD, \quad y^2 = x^2 + 3^2$$

$$\therefore y^2 = 4^2 + 6^2 + 3^2$$

$$\therefore y^2 = 61$$

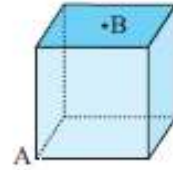
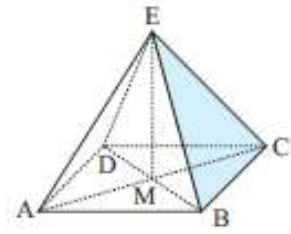
$$\therefore y = \pm\sqrt{61}$$

But $y > 0$ \therefore the required distance is $\sqrt{61} \doteq 7.81$ m. {to 3 s.f.}

- 5 A room is 6 m by 5 m and has a height of 3 m. Find the distance from a corner point on the floor to the opposite corner of the ceiling.
- 6 A rectangular box is 2 cm by 3 cm by 4 cm (internally). Find the length of the longest toothpick that can be placed within the box.
- 7 Determine the length of the longest piece of timber which could be stored in a rectangular shed 8 m by 5 m by 3 m high.

- 1** 12 cm **2** 11.6 cm **3** 8.24 cm **4** 3.46 cm
- 5** 8.37 m **6** 5.38 cm **7** 9.89 m **8** 141 m
- 9** $9.38 \text{ cm} \times 9.38 \text{ cm}$ **10** 1.22 m

- 8** ABCD is a square-based pyramid. E, the apex of the pyramid is vertically above M, the point of intersection of AC and BD. If an Egyptian Pharaoh wished to build a square-based pyramid with all edges 200 m, how high (to the nearest metre) would the pyramid reach above the desert sands?
- 9** A symmetrical square-based pyramid has height 10 cm and slant edges of 12 cm. Find the dimensions of its square base.
- 10** A cube has sides of length 1 m. B is at the centre of one face, and A is an opposite vertex. Find the direct distance from A to B.

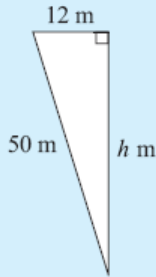
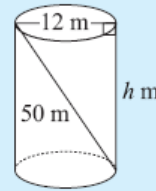


Chapter 4 G (Three Dimensional Problems)

Pythagoras' Rule is often used when finding lengths in **three-dimensional solids**.

Example 19

A 50 m rope is attached inside an empty cylindrical wheat silo of diameter 12 m as shown. How high is the wheat silo?



Let the height be h m.

$$\therefore h^2 + 12^2 = 50^2 \quad \{\text{Pythagoras}\}$$

$$\therefore h^2 + 144 = 2500$$

$$\therefore h^2 = 2356$$

$$\therefore h = \sqrt{2356} \quad \{\text{as } h > 0\}$$

$$\therefore h \doteq 48.5 \quad \{\text{to 3 s.f.}\}$$

i.e., the wheat silo is 48.5 m high.

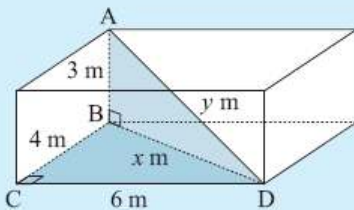
EXERCISE 4G

- 1 A cone has a slant height of 13 cm and a base radius of 5 cm. How high is the cone?
- 2 Find the length of the longest nail that could be put entirely within a cylindrical can of radius 3 cm and height 10 cm.
- 3 A 68 cm nail just fits inside a cylindrical can. The nail is removed and four identical spherical balls are fitted exactly within the can. What is the maximum radius of each ball?

The **rule of Pythagoras** is often used *twice* in three-dimensional problem solving questions. We look for right angled triangles which contain two sides of given length.

Example 20

A room is 6 m by 4 m at floor level and the floor to ceiling height is 3 m. Find the distance from a floor corner point to the opposite corner point on the ceiling.



The required distance is AD. We join BD.

$$\text{In } \triangle BCD, \quad x^2 = 4^2 + 6^2 \quad \{\text{Pythagoras}\}$$

$$\text{In } \triangle ABD, \quad y^2 = x^2 + 3^2$$

$$\therefore y^2 = 4^2 + 6^2 + 3^2$$

$$\therefore y^2 = 61$$

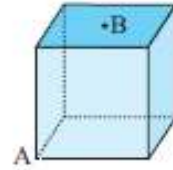
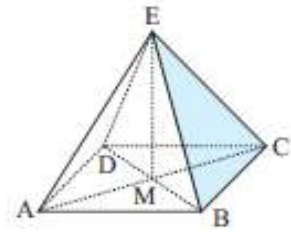
$$\therefore y = \pm\sqrt{61}$$

But $y > 0 \quad \therefore$ the required distance is $\sqrt{61} \doteq 7.81$ m. {to 3 s.f.}

- 5 A room is 6 m by 5 m and has a height of 3 m. Find the distance from a corner point on the floor to the opposite corner of the ceiling.
- 6 A rectangular box is 2 cm by 3 cm by 4 cm (internally). Find the length of the longest toothpick that can be placed within the box.
- 7 Determine the length of the longest piece of timber which could be stored in a rectangular shed 8 m by 5 m by 3 m high.

- 1** 12 cm **2** 11.6 cm **3** 8.24 cm **4** 3.46 cm
- 5** 8.37 m **6** 5.38 cm **7** 9.89 m **8** 141 m
- 9** $9.38 \text{ cm} \times 9.38 \text{ cm}$ **10** 1.22 m

- 8** ABCD is a square-based pyramid. E, the apex of the pyramid is vertically above M, the point of intersection of AC and BD. If an Egyptian Pharaoh wished to build a square-based pyramid with all edges 200 m, how high (to the nearest metre) would the pyramid reach above the desert sands?
- 9** A symmetrical square-based pyramid has height 10 cm and slant edges of 12 cm. Find the dimensions of its square base.
- 10** A cube has sides of length 1 m. B is at the centre of one face, and A is an opposite vertex. Find the direct distance from A to B.

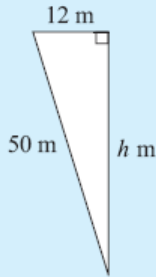
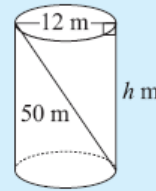


Chapter 4 G (Three Dimensional Problems)

Pythagoras' Rule is often used when finding lengths in **three-dimensional solids**.

Example 19

A 50 m rope is attached inside an empty cylindrical wheat silo of diameter 12 m as shown. How high is the wheat silo?



Let the height be h m.

$$\therefore h^2 + 12^2 = 50^2 \quad \{\text{Pythagoras}\}$$

$$\therefore h^2 + 144 = 2500$$

$$\therefore h^2 = 2356$$

$$\therefore h = \sqrt{2356} \quad \{\text{as } h > 0\}$$

$$\therefore h \doteq 48.5 \quad \{\text{to 3 s.f.}\}$$

i.e., the wheat silo is 48.5 m high.

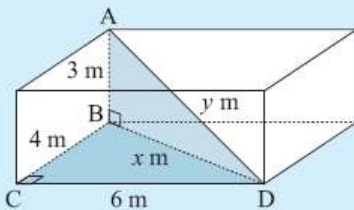
EXERCISE 4G

- 1 A cone has a slant height of 13 cm and a base radius of 5 cm. How high is the cone?
- 2 Find the length of the longest nail that could be put entirely within a cylindrical can of radius 3 cm and height 10 cm.
- 3 A 68 cm nail just fits inside a cylindrical can. The nail is removed and four identical spherical balls are fitted exactly within the can. What is the maximum radius of each ball?

The **rule of Pythagoras** is often used *twice* in three-dimensional problem solving questions. We look for right angled triangles which contain two sides of given length.

Example 20

A room is 6 m by 4 m at floor level and the floor to ceiling height is 3 m. Find the distance from a floor corner point to the opposite corner point on the ceiling.



The required distance is AD. We join BD.

$$\text{In } \triangle BCD, \quad x^2 = 4^2 + 6^2 \quad \{\text{Pythagoras}\}$$

$$\text{In } \triangle ABD, \quad y^2 = x^2 + 3^2$$

$$\therefore y^2 = 4^2 + 6^2 + 3^2$$

$$\therefore y^2 = 61$$

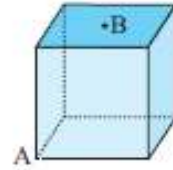
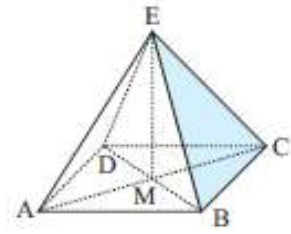
$$\therefore y = \pm\sqrt{61}$$

But $y > 0$ \therefore the required distance is $\sqrt{61} \doteq 7.81$ m. $\{\text{to 3 s.f.}\}$

- 5 A room is 6 m by 5 m and has a height of 3 m. Find the distance from a corner point on the floor to the opposite corner of the ceiling.
- 6 A rectangular box is 2 cm by 3 cm by 4 cm (internally). Find the length of the longest toothpick that can be placed within the box.
- 7 Determine the length of the longest piece of timber which could be stored in a rectangular shed 8 m by 5 m by 3 m high.

- 1** 12 cm **2** 11.6 cm **3** 8.24 cm **4** 3.46 cm
- 5** 8.37 m **6** 5.38 cm **7** 9.89 m **8** 141 m
- 9** 9.38 cm × 9.38 cm **10** 1.22 m

- 8** ABCD is a square-based pyramid. E, the apex of the pyramid is vertically above M, the point of intersection of AC and BD. If an Egyptian Pharoah wished to build a square-based pyramid with all edges 200 m, how high (to the nearest metre) would the pyramid reach above the desert sands?
- 9** A symmetrical square-based pyramid has height 10 cm and slant edges of 12 cm. Find the dimensions of its square base.
- 10** A cube has sides of length 1 m. B is at the centre of one face, and A is an opposite vertex. Find the direct distance from A to B.

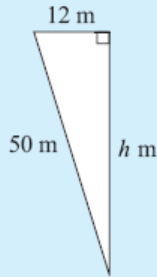
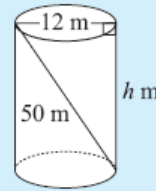


Chapter 4 G (Three Dimensional Problems)

Pythagoras' Rule is often used when finding lengths in **three-dimensional solids**.

Example 19

A 50 m rope is attached inside an empty cylindrical wheat silo of diameter 12 m as shown. How high is the wheat silo?



Let the height be h m.

$$\therefore h^2 + 12^2 = 50^2 \quad \{\text{Pythagoras}\}$$

$$\therefore h^2 + 144 = 2500$$

$$\therefore h^2 = 2356$$

$$\therefore h = \sqrt{2356} \quad \{\text{as } h > 0\}$$

$$\therefore h \doteq 48.5 \quad \{\text{to 3 s.f.}\}$$

i.e., the wheat silo is 48.5 m high.

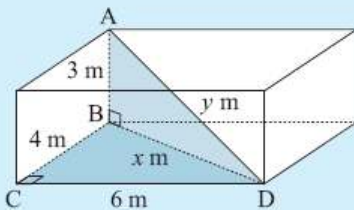
EXERCISE 4G

- 1 A cone has a slant height of 13 cm and a base radius of 5 cm. How high is the cone?
- 2 Find the length of the longest nail that could be put entirely within a cylindrical can of radius 3 cm and height 10 cm.
- 3 A 68 cm nail just fits inside a cylindrical can. The nail is removed and four identical spherical balls are fitted exactly within the can. What is the maximum radius of each ball?

The **rule of Pythagoras** is often used *twice* in three-dimensional problem solving questions. We look for right angled triangles which contain two sides of given length.

Example 20

A room is 6 m by 4 m at floor level and the floor to ceiling height is 3 m. Find the distance from a floor corner point to the opposite corner point on the ceiling.



The required distance is AD. We join BD.

$$\text{In } \triangle BCD, \quad x^2 = 4^2 + 6^2 \quad \{\text{Pythagoras}\}$$

$$\text{In } \triangle ABD, \quad y^2 = x^2 + 3^2$$

$$\therefore y^2 = 4^2 + 6^2 + 3^2$$

$$\therefore y^2 = 61$$

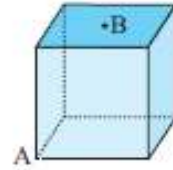
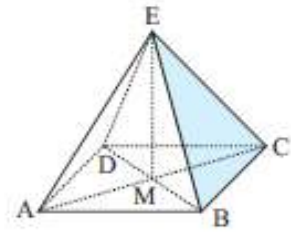
$$\therefore y = \pm\sqrt{61}$$

But $y > 0 \quad \therefore$ the required distance is $\sqrt{61} \doteq 7.81$ m. {to 3 s.f.}

- 5 A room is 6 m by 5 m and has a height of 3 m. Find the distance from a corner point on the floor to the opposite corner of the ceiling.
- 6 A rectangular box is 2 cm by 3 cm by 4 cm (internally). Find the length of the longest toothpick that can be placed within the box.
- 7 Determine the length of the longest piece of timber which could be stored in a rectangular shed 8 m by 5 m by 3 m high.

- 1** 12 cm **2** 11.6 cm **3** 8.24 cm **4** 3.46 cm
- 5** 8.37 m **6** 5.38 cm **7** 9.89 m **8** 141 m
- 9** $9.38 \text{ cm} \times 9.38 \text{ cm}$ **10** 1.22 m

- 8** ABCD is a square-based pyramid. E, the apex of the pyramid is vertically above M, the point of intersection of AC and BD. If an Egyptian Pharaoh wished to build a square-based pyramid with all edges 200 m, how high (to the nearest metre) would the pyramid reach above the desert sands?
- 9** A symmetrical square-based pyramid has height 10 cm and slant edges of 12 cm. Find the dimensions of its square base.
- 10** A cube has sides of length 1 m. B is at the centre of one face, and A is an opposite vertex. Find the direct distance from A to B.

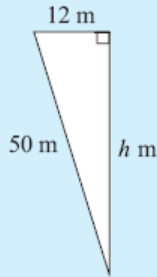
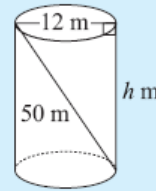


Chapter 4 G (Three Dimensional Problems)

Pythagoras' Rule is often used when finding lengths in **three-dimensional solids**.

Example 19

A 50 m rope is attached inside an empty cylindrical wheat silo of diameter 12 m as shown. How high is the wheat silo?



Let the height be h m.

$$\therefore h^2 + 12^2 = 50^2 \quad \{\text{Pythagoras}\}$$

$$\therefore h^2 + 144 = 2500$$

$$\therefore h^2 = 2356$$

$$\therefore h = \sqrt{2356} \quad \{\text{as } h > 0\}$$

$$\therefore h \doteq 48.5 \quad \{\text{to 3 s.f.}\}$$

i.e., the wheat silo is 48.5 m high.

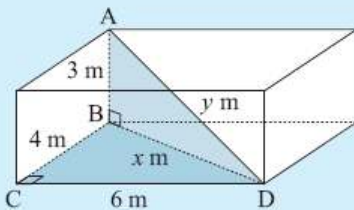
EXERCISE 4G

- 1 A cone has a slant height of 13 cm and a base radius of 5 cm. How high is the cone?
- 2 Find the length of the longest nail that could be put entirely within a cylindrical can of radius 3 cm and height 10 cm.
- 3 A 68 cm nail just fits inside a cylindrical can. The nail is removed and four identical spherical balls are fitted exactly within the can. What is the maximum radius of each ball?

The **rule of Pythagoras** is often used *twice* in three-dimensional problem solving questions. We look for right angled triangles which contain two sides of given length.

Example 20

A room is 6 m by 4 m at floor level and the floor to ceiling height is 3 m. Find the distance from a floor corner point to the opposite corner point on the ceiling.



The required distance is AD. We join BD.

$$\text{In } \triangle BCD, \quad x^2 = 4^2 + 6^2 \quad \{\text{Pythagoras}\}$$

$$\text{In } \triangle ABD, \quad y^2 = x^2 + 3^2$$

$$\therefore y^2 = 4^2 + 6^2 + 3^2$$

$$\therefore y^2 = 61$$

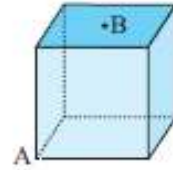
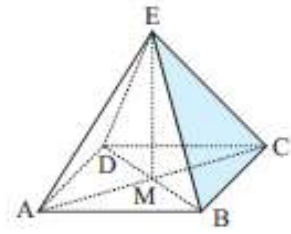
$$\therefore y = \pm\sqrt{61}$$

But $y > 0 \quad \therefore$ the required distance is $\sqrt{61} \doteq 7.81$ m. $\{\text{to 3 s.f.}\}$

- 5 A room is 6 m by 5 m and has a height of 3 m. Find the distance from a corner point on the floor to the opposite corner of the ceiling.
- 6 A rectangular box is 2 cm by 3 cm by 4 cm (internally). Find the length of the longest toothpick that can be placed within the box.
- 7 Determine the length of the longest piece of timber which could be stored in a rectangular shed 8 m by 5 m by 3 m high.

- 1** 12 cm **2** 11.6 cm **3** 8.24 cm **4** 3.46 cm
- 5** 8.37 m **6** 5.38 cm **7** 9.89 m **8** 141 m
- 9** 9.38 cm \times 9.38 cm **10** 1.22 m

- 8** ABCD is a square-based pyramid. E, the apex of the pyramid is vertically above M, the point of intersection of AC and BD. If an Egyptian Pharoah wished to build a square-based pyramid with all edges 200 m, how high (to the nearest metre) would the pyramid reach above the desert sands?
- 9** A symmetrical square-based pyramid has height 10 cm and slant edges of 12 cm. Find the dimensions of its square base.
- 10** A cube has sides of length 1 m. B is at the centre of one face, and A is an opposite vertex. Find the direct distance from A to B.

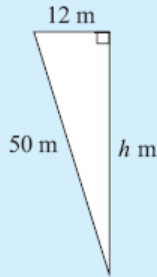
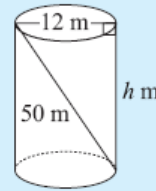


Chapter 4 G (Three Dimensional Problems)

Pythagoras' Rule is often used when finding lengths in **three-dimensional solids**.

Example 19

A 50 m rope is attached inside an empty cylindrical wheat silo of diameter 12 m as shown. How high is the wheat silo?



Let the height be h m.

$$\therefore h^2 + 12^2 = 50^2 \quad \{\text{Pythagoras}\}$$

$$\therefore h^2 + 144 = 2500$$

$$\therefore h^2 = 2356$$

$$\therefore h = \sqrt{2356} \quad \{\text{as } h > 0\}$$

$$\therefore h \doteq 48.5 \quad \{\text{to 3 s.f.}\}$$

i.e., the wheat silo is 48.5 m high.

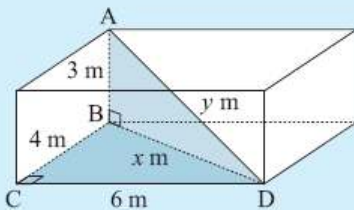
EXERCISE 4G

- 1 A cone has a slant height of 13 cm and a base radius of 5 cm. How high is the cone?
- 2 Find the length of the longest nail that could be put entirely within a cylindrical can of radius 3 cm and height 10 cm.
- 3 A 68 cm nail just fits inside a cylindrical can. The nail is removed and four identical spherical balls are fitted exactly within the can. What is the maximum radius of each ball?

The **rule of Pythagoras** is often used *twice* in three-dimensional problem solving questions. We look for right angled triangles which contain two sides of given length.

Example 20

A room is 6 m by 4 m at floor level and the floor to ceiling height is 3 m. Find the distance from a floor corner point to the opposite corner point on the ceiling.



The required distance is AD. We join BD.

$$\text{In } \triangle BCD, \quad x^2 = 4^2 + 6^2 \quad \{\text{Pythagoras}\}$$

$$\text{In } \triangle ABD, \quad y^2 = x^2 + 3^2$$

$$\therefore y^2 = 4^2 + 6^2 + 3^2$$

$$\therefore y^2 = 61$$

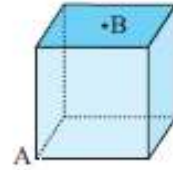
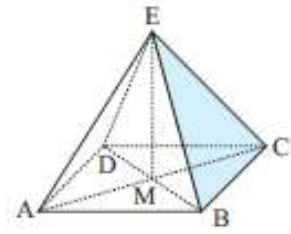
$$\therefore y = \pm\sqrt{61}$$

But $y > 0 \quad \therefore$ the required distance is $\sqrt{61} \doteq 7.81$ m. {to 3 s.f.}

- 5 A room is 6 m by 5 m and has a height of 3 m. Find the distance from a corner point on the floor to the opposite corner of the ceiling.
- 6 A rectangular box is 2 cm by 3 cm by 4 cm (internally). Find the length of the longest toothpick that can be placed within the box.
- 7 Determine the length of the longest piece of timber which could be stored in a rectangular shed 8 m by 5 m by 3 m high.

- 1** 12 cm **2** 11.6 cm **3** 8.24 cm **4** 3.46 cm
- 5** 8.37 m **6** 5.38 cm **7** 9.89 m **8** 141 m
- 9** $9.38 \text{ cm} \times 9.38 \text{ cm}$ **10** 1.22 m

- 8** ABCD is a square-based pyramid. E, the apex of the pyramid is vertically above M, the point of intersection of AC and BD. If an Egyptian Pharaoh wished to build a square-based pyramid with all edges 200 m, how high (to the nearest metre) would the pyramid reach above the desert sands?
- 9** A symmetrical square-based pyramid has height 10 cm and slant edges of 12 cm. Find the dimensions of its square base.
- 10** A cube has sides of length 1 m. B is at the centre of one face, and A is an opposite vertex. Find the direct distance from A to B.

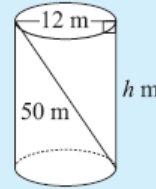


Chapter 4 G (Three Dimensional Problems)

Pythagoras' Rule is often used when finding lengths in **three-dimensional solids**.

Example 19

A 50 m rope is attached inside an empty cylindrical wheat silo of diameter 12 m as shown. How high is the wheat silo?



Let the height be h m.

$$\therefore h^2 + 12^2 = 50^2 \quad \{\text{Pythagoras}\}$$

$$\therefore h^2 + 144 = 2500$$

$$\therefore h^2 = 2356$$

$$\therefore h = \sqrt{2356} \quad \{\text{as } h > 0\}$$

$$\therefore h \doteq 48.5 \quad \{\text{to 3 s.f.}\}$$

i.e., the wheat silo is 48.5 m high.

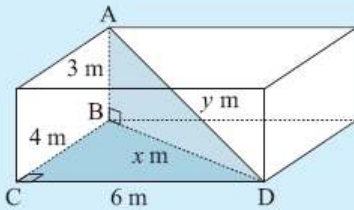
EXERCISE 4G

- 1 A cone has a slant height of 13 cm and a base radius of 5 cm. How high is the cone?
- 2 Find the length of the longest nail that could be put entirely within a cylindrical can of radius 3 cm and height 10 cm.
- 3 A 68 cm nail just fits inside a cylindrical can. The nail is removed and four identical spherical balls are fitted exactly within the can. What is the maximum radius of each ball?

The **rule of Pythagoras** is often used *twice* in three-dimensional problem solving questions. We look for right angled triangles which contain two sides of given length.

Example 20

A room is 6 m by 4 m at floor level and the floor to ceiling height is 3 m. Find the distance from a floor corner point to the opposite corner point on the ceiling.



The required distance is AD. We join BD.

$$\text{In } \triangle BCD, \quad x^2 = 4^2 + 6^2 \quad \{\text{Pythagoras}\}$$

$$\text{In } \triangle ABD, \quad y^2 = x^2 + 3^2$$

$$\therefore y^2 = 4^2 + 6^2 + 3^2$$

$$\therefore y^2 = 61$$

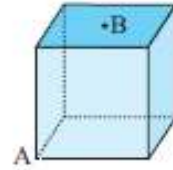
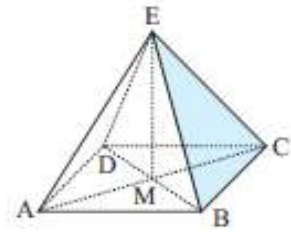
$$\therefore y = \pm\sqrt{61}$$

But $y > 0 \quad \therefore$ the required distance is $\sqrt{61} \doteq 7.81$ m. $\{\text{to 3 s.f.}\}$

- 5 A room is 6 m by 5 m and has a height of 3 m. Find the distance from a corner point on the floor to the opposite corner of the ceiling.
- 6 A rectangular box is 2 cm by 3 cm by 4 cm (internally). Find the length of the longest toothpick that can be placed within the box.
- 7 Determine the length of the longest piece of timber which could be stored in a rectangular shed 8 m by 5 m by 3 m high.

- 1** 12 cm **2** 11.6 cm **3** 8.24 cm **4** 3.46 cm
- 5** 8.37 m **6** 5.38 cm **7** 9.89 m **8** 141 m
- 9** $9.38 \text{ cm} \times 9.38 \text{ cm}$ **10** 1.22 m

- 8** ABCD is a square-based pyramid. E, the apex of the pyramid is vertically above M, the point of intersection of AC and BD. If an Egyptian Pharaoh wished to build a square-based pyramid with all edges 200 m, how high (to the nearest metre) would the pyramid reach above the desert sands?
- 9** A symmetrical square-based pyramid has height 10 cm and slant edges of 12 cm. Find the dimensions of its square base.
- 10** A cube has sides of length 1 m. B is at the centre of one face, and A is an opposite vertex. Find the direct distance from A to B.

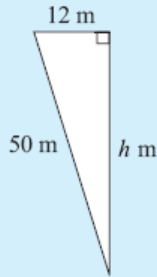
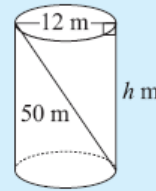


Chapter 4 G (Three Dimensional Problems)

Pythagoras' Rule is often used when finding lengths in **three-dimensional solids**.

Example 19

A 50 m rope is attached inside an empty cylindrical wheat silo of diameter 12 m as shown. How high is the wheat silo?



Let the height be h m.

$$\therefore h^2 + 12^2 = 50^2 \quad \{\text{Pythagoras}\}$$

$$\therefore h^2 + 144 = 2500$$

$$\therefore h^2 = 2356$$

$$\therefore h = \sqrt{2356} \quad \{\text{as } h > 0\}$$

$$\therefore h \doteq 48.5 \quad \{\text{to 3 s.f.}\}$$

i.e., the wheat silo is 48.5 m high.

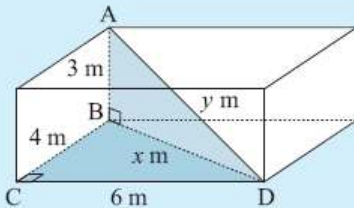
EXERCISE 4G

- 1 A cone has a slant height of 13 cm and a base radius of 5 cm. How high is the cone?
- 2 Find the length of the longest nail that could be put entirely within a cylindrical can of radius 3 cm and height 10 cm.
- 3 A 68 cm nail just fits inside a cylindrical can. The nail is removed and four identical spherical balls are fitted exactly within the can. What is the maximum radius of each ball?

The **rule of Pythagoras** is often used *twice* in three-dimensional problem solving questions. We look for right angled triangles which contain two sides of given length.

Example 20

A room is 6 m by 4 m at floor level and the floor to ceiling height is 3 m. Find the distance from a floor corner point to the opposite corner point on the ceiling.



The required distance is AD. We join BD.

$$\text{In } \triangle BCD, \quad x^2 = 4^2 + 6^2 \quad \{\text{Pythagoras}\}$$

$$\text{In } \triangle ABD, \quad y^2 = x^2 + 3^2$$

$$\therefore y^2 = 4^2 + 6^2 + 3^2$$

$$\therefore y^2 = 61$$

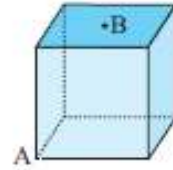
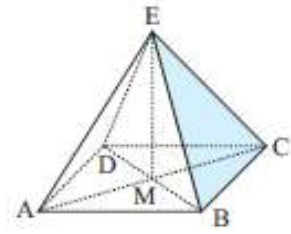
$$\therefore y = \pm\sqrt{61}$$

But $y > 0$ \therefore the required distance is $\sqrt{61} \doteq 7.81$ m. {to 3 s.f.}

- 5 A room is 6 m by 5 m and has a height of 3 m. Find the distance from a corner point on the floor to the opposite corner of the ceiling.
- 6 A rectangular box is 2 cm by 3 cm by 4 cm (internally). Find the length of the longest toothpick that can be placed within the box.
- 7 Determine the length of the longest piece of timber which could be stored in a rectangular shed 8 m by 5 m by 3 m high.

- 1** 12 cm **2** 11.6 cm **3** 8.24 cm **4** 3.46 cm
- 5** 8.37 m **6** 5.38 cm **7** 9.89 m **8** 141 m
- 9** 9.38 cm \times 9.38 cm **10** 1.22 m

- 8** ABCD is a square-based pyramid. E, the apex of the pyramid is vertically above M, the point of intersection of AC and BD. If an Egyptian Pharaoh wished to build a square-based pyramid with all edges 200 m, how high (to the nearest metre) would the pyramid reach above the desert sands?
- 9** A symmetrical square-based pyramid has height 10 cm and slant edges of 12 cm. Find the dimensions of its square base.
- 10** A cube has sides of length 1 m. B is at the centre of one face, and A is an opposite vertex. Find the direct distance from A to B.

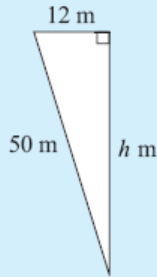
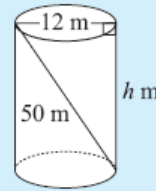


Chapter 4 G (Three Dimensional Problems)

Pythagoras' Rule is often used when finding lengths in **three-dimensional solids**.

Example 19

A 50 m rope is attached inside an empty cylindrical wheat silo of diameter 12 m as shown. How high is the wheat silo?



Let the height be h m.

$$\therefore h^2 + 12^2 = 50^2 \quad \{\text{Pythagoras}\}$$

$$\therefore h^2 + 144 = 2500$$

$$\therefore h^2 = 2356$$

$$\therefore h = \sqrt{2356} \quad \{\text{as } h > 0\}$$

$$\therefore h \doteq 48.5 \quad \{\text{to 3 s.f.}\}$$

i.e., the wheat silo is 48.5 m high.

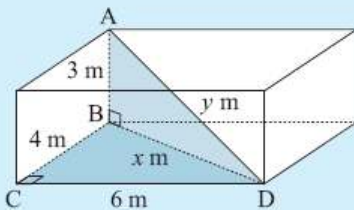
EXERCISE 4G

- 1 A cone has a slant height of 13 cm and a base radius of 5 cm. How high is the cone?
- 2 Find the length of the longest nail that could be put entirely within a cylindrical can of radius 3 cm and height 10 cm.
- 3 A 68 cm nail just fits inside a cylindrical can. The nail is removed and four identical spherical balls are fitted exactly within the can. What is the maximum radius of each ball?

The **rule of Pythagoras** is often used *twice* in three-dimensional problem solving questions. We look for right angled triangles which contain two sides of given length.

Example 20

A room is 6 m by 4 m at floor level and the floor to ceiling height is 3 m. Find the distance from a floor corner point to the opposite corner point on the ceiling.



The required distance is AD. We join BD.

$$\text{In } \triangle BCD, \quad x^2 = 4^2 + 6^2 \quad \{\text{Pythagoras}\}$$

$$\text{In } \triangle ABD, \quad y^2 = x^2 + 3^2$$

$$\therefore y^2 = 4^2 + 6^2 + 3^2$$

$$\therefore y^2 = 61$$

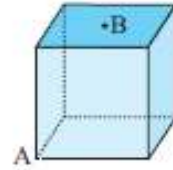
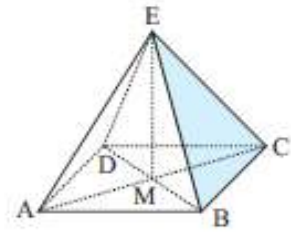
$$\therefore y = \pm\sqrt{61}$$

But $y > 0 \quad \therefore$ the required distance is $\sqrt{61} \doteq 7.81$ m. {to 3 s.f.}

- 5 A room is 6 m by 5 m and has a height of 3 m. Find the distance from a corner point on the floor to the opposite corner of the ceiling.
- 6 A rectangular box is 2 cm by 3 cm by 4 cm (internally). Find the length of the longest toothpick that can be placed within the box.
- 7 Determine the length of the longest piece of timber which could be stored in a rectangular shed 8 m by 5 m by 3 m high.

- 1** 12 cm **2** 11.6 cm **3** 8.24 cm **4** 3.46 cm
- 5** 8.37 m **6** 5.38 cm **7** 9.89 m **8** 141 m
- 9** $9.38 \text{ cm} \times 9.38 \text{ cm}$ **10** 1.22 m

- 8** ABCD is a square-based pyramid. E, the apex of the pyramid is vertically above M, the point of intersection of AC and BD. If an Egyptian Pharaoh wished to build a square-based pyramid with all edges 200 m, how high (to the nearest metre) would the pyramid reach above the desert sands?
- 9** A symmetrical square-based pyramid has height 10 cm and slant edges of 12 cm. Find the dimensions of its square base.
- 10** A cube has sides of length 1 m. B is at the centre of one face, and A is an opposite vertex. Find the direct distance from A to B.

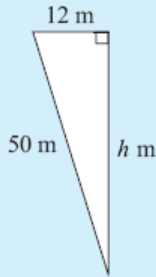
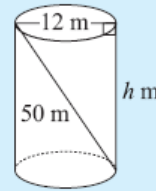


Chapter 4 G (Three Dimensional Problems)

Pythagoras' Rule is often used when finding lengths in **three-dimensional solids**.

Example 19

A 50 m rope is attached inside an empty cylindrical wheat silo of diameter 12 m as shown. How high is the wheat silo?



Let the height be h m.

$$\therefore h^2 + 12^2 = 50^2 \quad \{\text{Pythagoras}\}$$

$$\therefore h^2 + 144 = 2500$$

$$\therefore h^2 = 2356$$

$$\therefore h = \sqrt{2356} \quad \{\text{as } h > 0\}$$

$$\therefore h \doteq 48.5 \quad \{\text{to 3 s.f.}\}$$

i.e., the wheat silo is 48.5 m high.

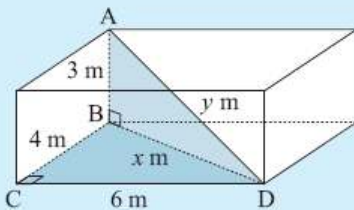
EXERCISE 4G

- 1 A cone has a slant height of 13 cm and a base radius of 5 cm. How high is the cone?
- 2 Find the length of the longest nail that could be put entirely within a cylindrical can of radius 3 cm and height 10 cm.
- 3 A 68 cm nail just fits inside a cylindrical can. The nail is removed and four identical spherical balls are fitted exactly within the can. What is the maximum radius of each ball?

The **rule of Pythagoras** is often used *twice* in three-dimensional problem solving questions. We look for right angled triangles which contain two sides of given length.

Example 20

A room is 6 m by 4 m at floor level and the floor to ceiling height is 3 m. Find the distance from a floor corner point to the opposite corner point on the ceiling.



The required distance is AD. We join BD.

$$\text{In } \triangle BCD, \quad x^2 = 4^2 + 6^2 \quad \{\text{Pythagoras}\}$$

$$\text{In } \triangle ABD, \quad y^2 = x^2 + 3^2$$

$$\therefore y^2 = 4^2 + 6^2 + 3^2$$

$$\therefore y^2 = 61$$

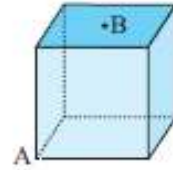
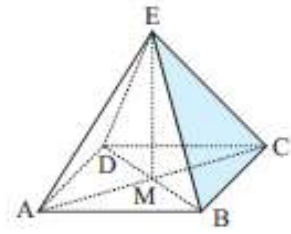
$$\therefore y = \pm\sqrt{61}$$

But $y > 0 \quad \therefore$ the required distance is $\sqrt{61} \doteq 7.81$ m. {to 3 s.f.}

- 5 A room is 6 m by 5 m and has a height of 3 m. Find the distance from a corner point on the floor to the opposite corner of the ceiling.
- 6 A rectangular box is 2 cm by 3 cm by 4 cm (internally). Find the length of the longest toothpick that can be placed within the box.
- 7 Determine the length of the longest piece of timber which could be stored in a rectangular shed 8 m by 5 m by 3 m high.

- 1** 12 cm **2** 11.6 cm **3** 8.24 cm **4** 3.46 cm
- 5** 8.37 m **6** 5.38 cm **7** 9.89 m **8** 141 m
- 9** $9.38 \text{ cm} \times 9.38 \text{ cm}$ **10** 1.22 m

- 8** ABCD is a square-based pyramid. E, the apex of the pyramid is vertically above M, the point of intersection of AC and BD. If an Egyptian Pharaoh wished to build a square-based pyramid with all edges 200 m, how high (to the nearest metre) would the pyramid reach above the desert sands?
- 9** A symmetrical square-based pyramid has height 10 cm and slant edges of 12 cm. Find the dimensions of its square base.
- 10** A cube has sides of length 1 m. B is at the centre of one face, and A is an opposite vertex. Find the direct distance from A to B.

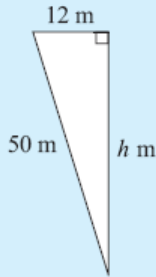
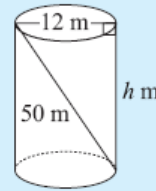


Chapter 4 G (Three Dimensional Problems)

Pythagoras' Rule is often used when finding lengths in **three-dimensional solids**.

Example 19

A 50 m rope is attached inside an empty cylindrical wheat silo of diameter 12 m as shown. How high is the wheat silo?



Let the height be h m.

$$\therefore h^2 + 12^2 = 50^2 \quad \{\text{Pythagoras}\}$$

$$\therefore h^2 + 144 = 2500$$

$$\therefore h^2 = 2356$$

$$\therefore h = \sqrt{2356} \quad \{\text{as } h > 0\}$$

$$\therefore h \doteq 48.5 \quad \{\text{to 3 s.f.}\}$$

i.e., the wheat silo is 48.5 m high.

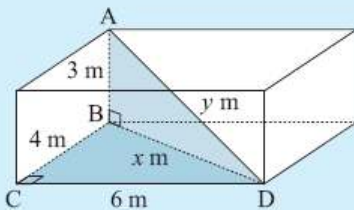
EXERCISE 4G

- 1 A cone has a slant height of 13 cm and a base radius of 5 cm. How high is the cone?
- 2 Find the length of the longest nail that could be put entirely within a cylindrical can of radius 3 cm and height 10 cm.
- 3 A 68 cm nail just fits inside a cylindrical can. The nail is removed and four identical spherical balls are fitted exactly within the can. What is the maximum radius of each ball?

The **rule of Pythagoras** is often used *twice* in three-dimensional problem solving questions. We look for right angled triangles which contain two sides of given length.

Example 20

A room is 6 m by 4 m at floor level and the floor to ceiling height is 3 m. Find the distance from a floor corner point to the opposite corner point on the ceiling.



The required distance is AD. We join BD.

$$\text{In } \triangle BCD, \quad x^2 = 4^2 + 6^2 \quad \{\text{Pythagoras}\}$$

$$\text{In } \triangle ABD, \quad y^2 = x^2 + 3^2$$

$$\therefore y^2 = 4^2 + 6^2 + 3^2$$

$$\therefore y^2 = 61$$

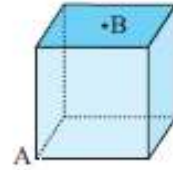
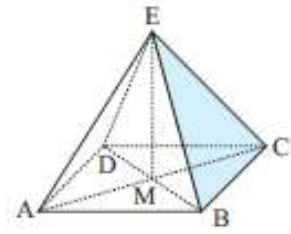
$$\therefore y = \pm\sqrt{61}$$

But $y > 0 \quad \therefore$ the required distance is $\sqrt{61} \doteq 7.81$ m. {to 3 s.f.}

- 5 A room is 6 m by 5 m and has a height of 3 m. Find the distance from a corner point on the floor to the opposite corner of the ceiling.
- 6 A rectangular box is 2 cm by 3 cm by 4 cm (internally). Find the length of the longest toothpick that can be placed within the box.
- 7 Determine the length of the longest piece of timber which could be stored in a rectangular shed 8 m by 5 m by 3 m high.

- 1** 12 cm **2** 11.6 cm **3** 8.24 cm **4** 3.46 cm
- 5** 8.37 m **6** 5.38 cm **7** 9.89 m **8** 141 m
- 9** $9.38 \text{ cm} \times 9.38 \text{ cm}$ **10** 1.22 m

- 8** ABCD is a square-based pyramid. E, the apex of the pyramid is vertically above M, the point of intersection of AC and BD. If an Egyptian Pharaoh wished to build a square-based pyramid with all edges 200 m, how high (to the nearest metre) would the pyramid reach above the desert sands?
- 9** A symmetrical square-based pyramid has height 10 cm and slant edges of 12 cm. Find the dimensions of its square base.
- 10** A cube has sides of length 1 m. B is at the centre of one face, and A is an opposite vertex. Find the direct distance from A to B.

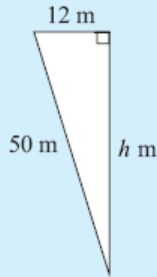
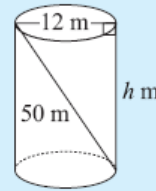


Chapter 4 G (Three Dimensional Problems)

Pythagoras' Rule is often used when finding lengths in **three-dimensional solids**.

Example 19

A 50 m rope is attached inside an empty cylindrical wheat silo of diameter 12 m as shown. How high is the wheat silo?



Let the height be h m.

$$\therefore h^2 + 12^2 = 50^2 \quad \{\text{Pythagoras}\}$$

$$\therefore h^2 + 144 = 2500$$

$$\therefore h^2 = 2356$$

$$\therefore h = \sqrt{2356} \quad \{\text{as } h > 0\}$$

$$\therefore h \doteq 48.5 \quad \{\text{to 3 s.f.}\}$$

i.e., the wheat silo is 48.5 m high.

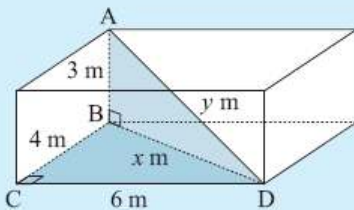
EXERCISE 4G

- 1 A cone has a slant height of 13 cm and a base radius of 5 cm. How high is the cone?
- 2 Find the length of the longest nail that could be put entirely within a cylindrical can of radius 3 cm and height 10 cm.
- 3 A 68 cm nail just fits inside a cylindrical can. The nail is removed and four identical spherical balls are fitted exactly within the can. What is the maximum radius of each ball?

The **rule of Pythagoras** is often used *twice* in three-dimensional problem solving questions. We look for right angled triangles which contain two sides of given length.

Example 20

A room is 6 m by 4 m at floor level and the floor to ceiling height is 3 m. Find the distance from a floor corner point to the opposite corner point on the ceiling.



The required distance is AD. We join BD.

$$\text{In } \triangle BCD, \quad x^2 = 4^2 + 6^2 \quad \{\text{Pythagoras}\}$$

$$\text{In } \triangle ABD, \quad y^2 = x^2 + 3^2$$

$$\therefore y^2 = 4^2 + 6^2 + 3^2$$

$$\therefore y^2 = 61$$

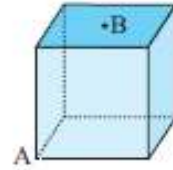
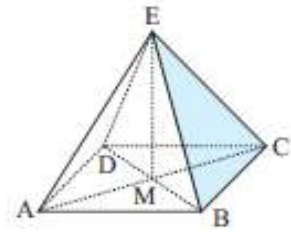
$$\therefore y = \pm\sqrt{61}$$

But $y > 0 \quad \therefore$ the required distance is $\sqrt{61} \doteq 7.81$ m. {to 3 s.f.}

- 5 A room is 6 m by 5 m and has a height of 3 m. Find the distance from a corner point on the floor to the opposite corner of the ceiling.
- 6 A rectangular box is 2 cm by 3 cm by 4 cm (internally). Find the length of the longest toothpick that can be placed within the box.
- 7 Determine the length of the longest piece of timber which could be stored in a rectangular shed 8 m by 5 m by 3 m high.

- 1** 12 cm **2** 11.6 cm **3** 8.24 cm **4** 3.46 cm
- 5** 8.37 m **6** 5.38 cm **7** 9.89 m **8** 141 m
- 9** $9.38 \text{ cm} \times 9.38 \text{ cm}$ **10** 1.22 m

- 8** ABCD is a square-based pyramid. E, the apex of the pyramid is vertically above M, the point of intersection of AC and BD. If an Egyptian Pharaoh wished to build a square-based pyramid with all edges 200 m, how high (to the nearest metre) would the pyramid reach above the desert sands?
- 9** A symmetrical square-based pyramid has height 10 cm and slant edges of 12 cm. Find the dimensions of its square base.
- 10** A cube has sides of length 1 m. B is at the centre of one face, and A is an opposite vertex. Find the direct distance from A to B.

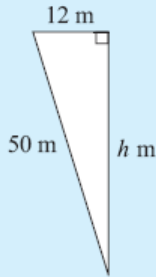
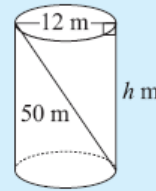


Chapter 4 G (Three Dimensional Problems)

Pythagoras' Rule is often used when finding lengths in **three-dimensional solids**.

Example 19

A 50 m rope is attached inside an empty cylindrical wheat silo of diameter 12 m as shown. How high is the wheat silo?



Let the height be h m.

$$\therefore h^2 + 12^2 = 50^2 \quad \{\text{Pythagoras}\}$$

$$\therefore h^2 + 144 = 2500$$

$$\therefore h^2 = 2356$$

$$\therefore h = \sqrt{2356} \quad \{\text{as } h > 0\}$$

$$\therefore h \doteq 48.5 \quad \{\text{to 3 s.f.}\}$$

i.e., the wheat silo is 48.5 m high.

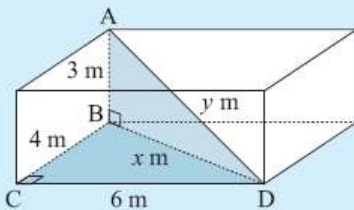
EXERCISE 4G

- 1 A cone has a slant height of 13 cm and a base radius of 5 cm. How high is the cone?
- 2 Find the length of the longest nail that could be put entirely within a cylindrical can of radius 3 cm and height 10 cm.
- 3 A 68 cm nail just fits inside a cylindrical can. The nail is removed and four identical spherical balls are fitted exactly within the can. What is the maximum radius of each ball?

The **rule of Pythagoras** is often used *twice* in three-dimensional problem solving questions. We look for right angled triangles which contain two sides of given length.

Example 20

A room is 6 m by 4 m at floor level and the floor to ceiling height is 3 m. Find the distance from a floor corner point to the opposite corner point on the ceiling.



The required distance is AD. We join BD.

$$\text{In } \triangle BCD, \quad x^2 = 4^2 + 6^2 \quad \{\text{Pythagoras}\}$$

$$\text{In } \triangle ABD, \quad y^2 = x^2 + 3^2$$

$$\therefore y^2 = 4^2 + 6^2 + 3^2$$

$$\therefore y^2 = 61$$

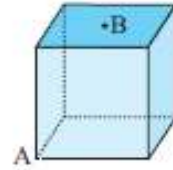
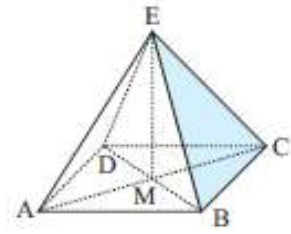
$$\therefore y = \pm\sqrt{61}$$

But $y > 0 \quad \therefore$ the required distance is $\sqrt{61} \doteq 7.81$ m. {to 3 s.f.}

- 5 A room is 6 m by 5 m and has a height of 3 m. Find the distance from a corner point on the floor to the opposite corner of the ceiling.
- 6 A rectangular box is 2 cm by 3 cm by 4 cm (internally). Find the length of the longest toothpick that can be placed within the box.
- 7 Determine the length of the longest piece of timber which could be stored in a rectangular shed 8 m by 5 m by 3 m high.

- 1** 12 cm **2** 11.6 cm **3** 8.24 cm **4** 3.46 cm
- 5** 8.37 m **6** 5.38 cm **7** 9.89 m **8** 141 m
- 9** $9.38 \text{ cm} \times 9.38 \text{ cm}$ **10** 1.22 m

- 8** ABCD is a square-based pyramid. E, the apex of the pyramid is vertically above M, the point of intersection of AC and BD. If an Egyptian Pharaoh wished to build a square-based pyramid with all edges 200 m, how high (to the nearest metre) would the pyramid reach above the desert sands?
- 9** A symmetrical square-based pyramid has height 10 cm and slant edges of 12 cm. Find the dimensions of its square base.
- 10** A cube has sides of length 1 m. B is at the centre of one face, and A is an opposite vertex. Find the direct distance from A to B.

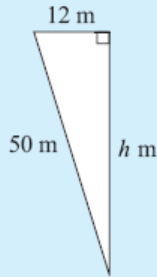
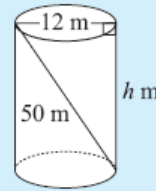


Chapter 4 G (Three Dimensional Problems)

Pythagoras' Rule is often used when finding lengths in **three-dimensional solids**.

Example 19

A 50 m rope is attached inside an empty cylindrical wheat silo of diameter 12 m as shown. How high is the wheat silo?



Let the height be h m.

$$\therefore h^2 + 12^2 = 50^2 \quad \{\text{Pythagoras}\}$$

$$\therefore h^2 + 144 = 2500$$

$$\therefore h^2 = 2356$$

$$\therefore h = \sqrt{2356} \quad \{\text{as } h > 0\}$$

$$\therefore h \doteq 48.5 \quad \{\text{to 3 s.f.}\}$$

i.e., the wheat silo is 48.5 m high.

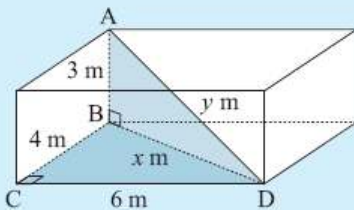
EXERCISE 4G

- 1 A cone has a slant height of 13 cm and a base radius of 5 cm. How high is the cone?
- 2 Find the length of the longest nail that could be put entirely within a cylindrical can of radius 3 cm and height 10 cm.
- 3 A 68 cm nail just fits inside a cylindrical can. The nail is removed and four identical spherical balls are fitted exactly within the can. What is the maximum radius of each ball?

The **rule of Pythagoras** is often used *twice* in three-dimensional problem solving questions. We look for right angled triangles which contain two sides of given length.

Example 20

A room is 6 m by 4 m at floor level and the floor to ceiling height is 3 m. Find the distance from a floor corner point to the opposite corner point on the ceiling.



The required distance is AD. We join BD.

$$\text{In } \triangle BCD, \quad x^2 = 4^2 + 6^2 \quad \{\text{Pythagoras}\}$$

$$\text{In } \triangle ABD, \quad y^2 = x^2 + 3^2$$

$$\therefore y^2 = 4^2 + 6^2 + 3^2$$

$$\therefore y^2 = 61$$

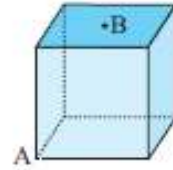
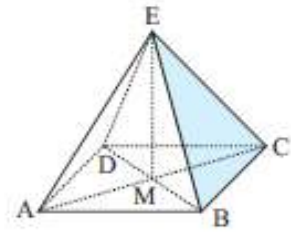
$$\therefore y = \pm\sqrt{61}$$

But $y > 0 \quad \therefore$ the required distance is $\sqrt{61} \doteq 7.81$ m. {to 3 s.f.}

- 5 A room is 6 m by 5 m and has a height of 3 m. Find the distance from a corner point on the floor to the opposite corner of the ceiling.
- 6 A rectangular box is 2 cm by 3 cm by 4 cm (internally). Find the length of the longest toothpick that can be placed within the box.
- 7 Determine the length of the longest piece of timber which could be stored in a rectangular shed 8 m by 5 m by 3 m high.

- 1** 12 cm **2** 11.6 cm **3** 8.24 cm **4** 3.46 cm
- 5** 8.37 m **6** 5.38 cm **7** 9.89 m **8** 141 m
- 9** $9.38 \text{ cm} \times 9.38 \text{ cm}$ **10** 1.22 m

- 8** ABCD is a square-based pyramid. E, the apex of the pyramid is vertically above M, the point of intersection of AC and BD. If an Egyptian Pharaoh wished to build a square-based pyramid with all edges 200 m, how high (to the nearest metre) would the pyramid reach above the desert sands?
- 9** A symmetrical square-based pyramid has height 10 cm and slant edges of 12 cm. Find the dimensions of its square base.
- 10** A cube has sides of length 1 m. B is at the centre of one face, and A is an opposite vertex. Find the direct distance from A to B.

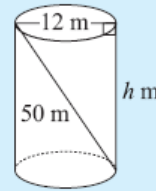


Chapter 4 G (Three Dimensional Problems)

Pythagoras' Rule is often used when finding lengths in **three-dimensional solids**.

Example 19

A 50 m rope is attached inside an empty cylindrical wheat silo of diameter 12 m as shown. How high is the wheat silo?



Let the height be h m.

$$\therefore h^2 + 12^2 = 50^2 \quad \{\text{Pythagoras}\}$$

$$\therefore h^2 + 144 = 2500$$

$$\therefore h^2 = 2356$$

$$\therefore h = \sqrt{2356} \quad \{\text{as } h > 0\}$$

$$\therefore h \doteq 48.5 \quad \{\text{to 3 s.f.}\}$$

i.e., the wheat silo is 48.5 m high.

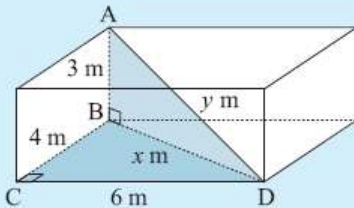
EXERCISE 4G

- 1 A cone has a slant height of 13 cm and a base radius of 5 cm. How high is the cone?
- 2 Find the length of the longest nail that could be put entirely within a cylindrical can of radius 3 cm and height 10 cm.
- 3 A 68 cm nail just fits inside a cylindrical can. The nail is removed and four identical spherical balls are fitted exactly within the can. What is the maximum radius of each ball?

The **rule of Pythagoras** is often used *twice* in three-dimensional problem solving questions. We look for right angled triangles which contain two sides of given length.

Example 20

A room is 6 m by 4 m at floor level and the floor to ceiling height is 3 m. Find the distance from a floor corner point to the opposite corner point on the ceiling.



The required distance is AD. We join BD.

$$\text{In } \triangle BCD, \quad x^2 = 4^2 + 6^2 \quad \{\text{Pythagoras}\}$$

$$\text{In } \triangle ABD, \quad y^2 = x^2 + 3^2$$

$$\therefore y^2 = 4^2 + 6^2 + 3^2$$

$$\therefore y^2 = 61$$

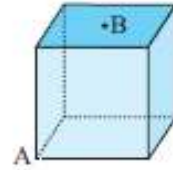
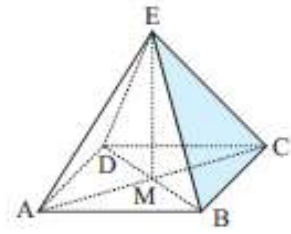
$$\therefore y = \pm\sqrt{61}$$

But $y > 0 \quad \therefore$ the required distance is $\sqrt{61} \doteq 7.81$ m. {to 3 s.f.}

- 5 A room is 6 m by 5 m and has a height of 3 m. Find the distance from a corner point on the floor to the opposite corner of the ceiling.
- 6 A rectangular box is 2 cm by 3 cm by 4 cm (internally). Find the length of the longest toothpick that can be placed within the box.
- 7 Determine the length of the longest piece of timber which could be stored in a rectangular shed 8 m by 5 m by 3 m high.

- 1** 12 cm **2** 11.6 cm **3** 8.24 cm **4** 3.46 cm
- 5** 8.37 m **6** 5.38 cm **7** 9.89 m **8** 141 m
- 9** $9.38 \text{ cm} \times 9.38 \text{ cm}$ **10** 1.22 m

- 8** ABCD is a square-based pyramid. E, the apex of the pyramid is vertically above M, the point of intersection of AC and BD. If an Egyptian Pharaoh wished to build a square-based pyramid with all edges 200 m, how high (to the nearest metre) would the pyramid reach above the desert sands?
- 9** A symmetrical square-based pyramid has height 10 cm and slant edges of 12 cm. Find the dimensions of its square base.
- 10** A cube has sides of length 1 m. B is at the centre of one face, and A is an opposite vertex. Find the direct distance from A to B.

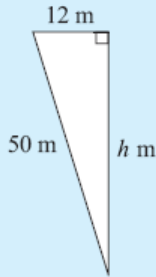
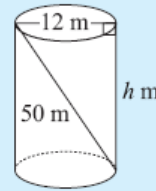


Chapter 4 G (Three Dimensional Problems)

Pythagoras' Rule is often used when finding lengths in **three-dimensional solids**.

Example 19

A 50 m rope is attached inside an empty cylindrical wheat silo of diameter 12 m as shown. How high is the wheat silo?



Let the height be h m.

$$\therefore h^2 + 12^2 = 50^2 \quad \{\text{Pythagoras}\}$$

$$\therefore h^2 + 144 = 2500$$

$$\therefore h^2 = 2356$$

$$\therefore h = \sqrt{2356} \quad \{\text{as } h > 0\}$$

$$\therefore h \doteq 48.5 \quad \{\text{to 3 s.f.}\}$$

i.e., the wheat silo is 48.5 m high.

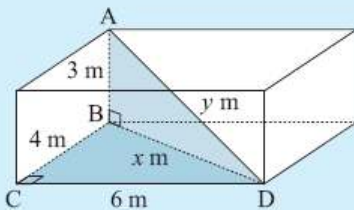
EXERCISE 4G

- 1 A cone has a slant height of 13 cm and a base radius of 5 cm. How high is the cone?
- 2 Find the length of the longest nail that could be put entirely within a cylindrical can of radius 3 cm and height 10 cm.
- 3 A 68 cm nail just fits inside a cylindrical can. The nail is removed and four identical spherical balls are fitted exactly within the can. What is the maximum radius of each ball?

The **rule of Pythagoras** is often used *twice* in three-dimensional problem solving questions. We look for right angled triangles which contain two sides of given length.

Example 20

A room is 6 m by 4 m at floor level and the floor to ceiling height is 3 m. Find the distance from a floor corner point to the opposite corner point on the ceiling.



The required distance is AD. We join BD.

$$\text{In } \triangle BCD, \quad x^2 = 4^2 + 6^2 \quad \{\text{Pythagoras}\}$$

$$\text{In } \triangle ABD, \quad y^2 = x^2 + 3^2$$

$$\therefore y^2 = 4^2 + 6^2 + 3^2$$

$$\therefore y^2 = 61$$

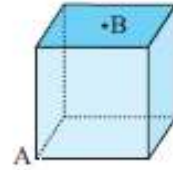
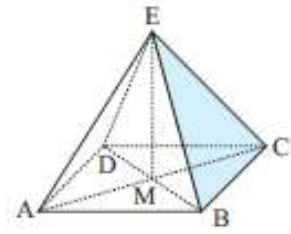
$$\therefore y = \pm\sqrt{61}$$

But $y > 0 \quad \therefore$ the required distance is $\sqrt{61} \doteq 7.81$ m. {to 3 s.f.}

- 5 A room is 6 m by 5 m and has a height of 3 m. Find the distance from a corner point on the floor to the opposite corner of the ceiling.
- 6 A rectangular box is 2 cm by 3 cm by 4 cm (internally). Find the length of the longest toothpick that can be placed within the box.
- 7 Determine the length of the longest piece of timber which could be stored in a rectangular shed 8 m by 5 m by 3 m high.

- 1** 12 cm **2** 11.6 cm **3** 8.24 cm **4** 3.46 cm
- 5** 8.37 m **6** 5.38 cm **7** 9.89 m **8** 141 m
- 9** $9.38 \text{ cm} \times 9.38 \text{ cm}$ **10** 1.22 m

- 8** ABCD is a square-based pyramid. E, the apex of the pyramid is vertically above M, the point of intersection of AC and BD. If an Egyptian Pharaoh wished to build a square-based pyramid with all edges 200 m, how high (to the nearest metre) would the pyramid reach above the desert sands?
- 9** A symmetrical square-based pyramid has height 10 cm and slant edges of 12 cm. Find the dimensions of its square base.
- 10** A cube has sides of length 1 m. B is at the centre of one face, and A is an opposite vertex. Find the direct distance from A to B.

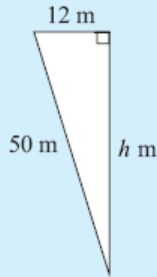
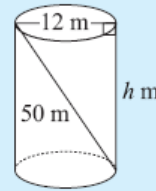


Chapter 4 G (Three Dimensional Problems)

Pythagoras' Rule is often used when finding lengths in **three-dimensional solids**.

Example 19

A 50 m rope is attached inside an empty cylindrical wheat silo of diameter 12 m as shown. How high is the wheat silo?



Let the height be h m.

$$\therefore h^2 + 12^2 = 50^2 \quad \{\text{Pythagoras}\}$$

$$\therefore h^2 + 144 = 2500$$

$$\therefore h^2 = 2356$$

$$\therefore h = \sqrt{2356} \quad \{\text{as } h > 0\}$$

$$\therefore h \doteq 48.5 \quad \{\text{to 3 s.f.}\}$$

i.e., the wheat silo is 48.5 m high.

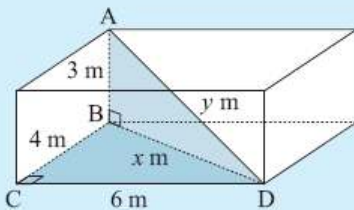
EXERCISE 4G

- 1 A cone has a slant height of 13 cm and a base radius of 5 cm. How high is the cone?
- 2 Find the length of the longest nail that could be put entirely within a cylindrical can of radius 3 cm and height 10 cm.
- 3 A 68 cm nail just fits inside a cylindrical can. The nail is removed and four identical spherical balls are fitted exactly within the can. What is the maximum radius of each ball?

The **rule of Pythagoras** is often used *twice* in three-dimensional problem solving questions. We look for right angled triangles which contain two sides of given length.

Example 20

A room is 6 m by 4 m at floor level and the floor to ceiling height is 3 m. Find the distance from a floor corner point to the opposite corner point on the ceiling.



The required distance is AD. We join BD.

$$\text{In } \triangle BCD, \quad x^2 = 4^2 + 6^2 \quad \{\text{Pythagoras}\}$$

$$\text{In } \triangle ABD, \quad y^2 = x^2 + 3^2$$

$$\therefore y^2 = 4^2 + 6^2 + 3^2$$

$$\therefore y^2 = 61$$

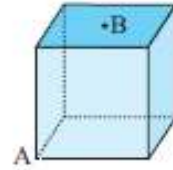
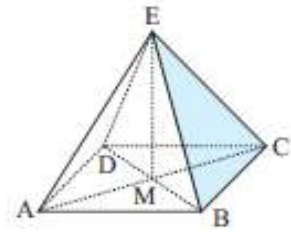
$$\therefore y = \pm\sqrt{61}$$

But $y > 0 \quad \therefore$ the required distance is $\sqrt{61} \doteq 7.81$ m. {to 3 s.f.}

- 5 A room is 6 m by 5 m and has a height of 3 m. Find the distance from a corner point on the floor to the opposite corner of the ceiling.
- 6 A rectangular box is 2 cm by 3 cm by 4 cm (internally). Find the length of the longest toothpick that can be placed within the box.
- 7 Determine the length of the longest piece of timber which could be stored in a rectangular shed 8 m by 5 m by 3 m high.

- 1** 12 cm **2** 11.6 cm **3** 8.24 cm **4** 3.46 cm
- 5** 8.37 m **6** 5.38 cm **7** 9.89 m **8** 141 m
- 9** $9.38 \text{ cm} \times 9.38 \text{ cm}$ **10** 1.22 m

- 8** ABCD is a square-based pyramid. E, the apex of the pyramid is vertically above M, the point of intersection of AC and BD. If an Egyptian Pharaoh wished to build a square-based pyramid with all edges 200 m, how high (to the nearest metre) would the pyramid reach above the desert sands?
- 9** A symmetrical square-based pyramid has height 10 cm and slant edges of 12 cm. Find the dimensions of its square base.
- 10** A cube has sides of length 1 m. B is at the centre of one face, and A is an opposite vertex. Find the direct distance from A to B.

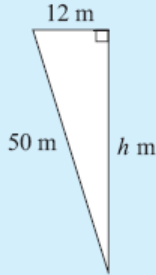
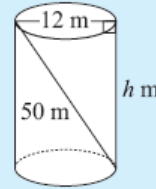


Chapter 4 G (Three Dimensional Problems)

Pythagoras' Rule is often used when finding lengths in **three-dimensional solids**.

Example 19

A 50 m rope is attached inside an empty cylindrical wheat silo of diameter 12 m as shown. How high is the wheat silo?



Let the height be h m.

$$\therefore h^2 + 12^2 = 50^2 \quad \{\text{Pythagoras}\}$$

$$\therefore h^2 + 144 = 2500$$

$$\therefore h^2 = 2356$$

$$\therefore h = \sqrt{2356} \quad \{\text{as } h > 0\}$$

$$\therefore h \doteq 48.5 \quad \{\text{to 3 s.f.}\}$$

i.e., the wheat silo is 48.5 m high.

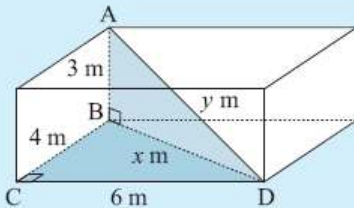
EXERCISE 4G

- 1 A cone has a slant height of 13 cm and a base radius of 5 cm. How high is the cone?
- 2 Find the length of the longest nail that could be put entirely within a cylindrical can of radius 3 cm and height 10 cm.
- 3 A 68 cm nail just fits inside a cylindrical can. The nail is removed and four identical spherical balls are fitted exactly within the can. What is the maximum radius of each ball?

The **rule of Pythagoras** is often used *twice* in three-dimensional problem solving questions. We look for right angled triangles which contain two sides of given length.

Example 20

A room is 6 m by 4 m at floor level and the floor to ceiling height is 3 m. Find the distance from a floor corner point to the opposite corner point on the ceiling.



The required distance is AD. We join BD.

$$\text{In } \triangle BCD, \quad x^2 = 4^2 + 6^2 \quad \{\text{Pythagoras}\}$$

$$\text{In } \triangle ABD, \quad y^2 = x^2 + 3^2$$

$$\therefore y^2 = 4^2 + 6^2 + 3^2$$

$$\therefore y^2 = 61$$

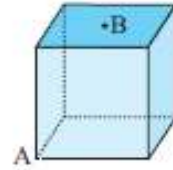
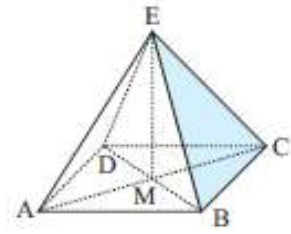
$$\therefore y = \pm\sqrt{61}$$

But $y > 0 \quad \therefore$ the required distance is $\sqrt{61} \doteq 7.81$ m. {to 3 s.f.}

- 5 A room is 6 m by 5 m and has a height of 3 m. Find the distance from a corner point on the floor to the opposite corner of the ceiling.
- 6 A rectangular box is 2 cm by 3 cm by 4 cm (internally). Find the length of the longest toothpick that can be placed within the box.
- 7 Determine the length of the longest piece of timber which could be stored in a rectangular shed 8 m by 5 m by 3 m high.

- 1** 12 cm **2** 11.6 cm **3** 8.24 cm **4** 3.46 cm
- 5** 8.37 m **6** 5.38 cm **7** 9.89 m **8** 141 m
- 9** $9.38 \text{ cm} \times 9.38 \text{ cm}$ **10** 1.22 m

- 8** ABCD is a square-based pyramid. E, the apex of the pyramid is vertically above M, the point of intersection of AC and BD. If an Egyptian Pharaoh wished to build a square-based pyramid with all edges 200 m, how high (to the nearest metre) would the pyramid reach above the desert sands?
- 9** A symmetrical square-based pyramid has height 10 cm and slant edges of 12 cm. Find the dimensions of its square base.
- 10** A cube has sides of length 1 m. B is at the centre of one face, and A is an opposite vertex. Find the direct distance from A to B.

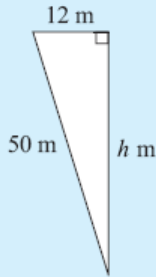
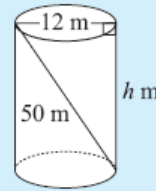


Chapter 4 G (Three Dimensional Problems)

Pythagoras' Rule is often used when finding lengths in **three-dimensional solids**.

Example 19

A 50 m rope is attached inside an empty cylindrical wheat silo of diameter 12 m as shown. How high is the wheat silo?



Let the height be h m.

$$\therefore h^2 + 12^2 = 50^2 \quad \{\text{Pythagoras}\}$$

$$\therefore h^2 + 144 = 2500$$

$$\therefore h^2 = 2356$$

$$\therefore h = \sqrt{2356} \quad \{\text{as } h > 0\}$$

$$\therefore h \doteq 48.5 \quad \{\text{to 3 s.f.}\}$$

i.e., the wheat silo is 48.5 m high.

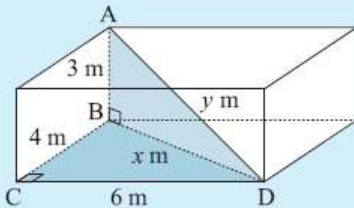
EXERCISE 4G

- 1 A cone has a slant height of 13 cm and a base radius of 5 cm. How high is the cone?
- 2 Find the length of the longest nail that could be put entirely within a cylindrical can of radius 3 cm and height 10 cm.
- 3 A 68 cm nail just fits inside a cylindrical can. The nail is removed and four identical spherical balls are fitted exactly within the can. What is the maximum radius of each ball?

The **rule of Pythagoras** is often used *twice* in three-dimensional problem solving questions. We look for right angled triangles which contain two sides of given length.

Example 20

A room is 6 m by 4 m at floor level and the floor to ceiling height is 3 m. Find the distance from a floor corner point to the opposite corner point on the ceiling.



The required distance is AD. We join BD.

$$\text{In } \triangle BCD, \quad x^2 = 4^2 + 6^2 \quad \{\text{Pythagoras}\}$$

$$\text{In } \triangle ABD, \quad y^2 = x^2 + 3^2$$

$$\therefore y^2 = 4^2 + 6^2 + 3^2$$

$$\therefore y^2 = 61$$

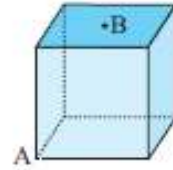
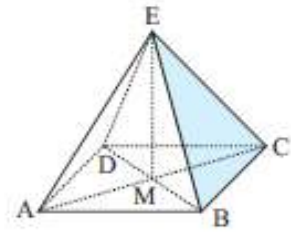
$$\therefore y = \pm\sqrt{61}$$

But $y > 0$ \therefore the required distance is $\sqrt{61} \doteq 7.81$ m. {to 3 s.f.}

- 5 A room is 6 m by 5 m and has a height of 3 m. Find the distance from a corner point on the floor to the opposite corner of the ceiling.
- 6 A rectangular box is 2 cm by 3 cm by 4 cm (internally). Find the length of the longest toothpick that can be placed within the box.
- 7 Determine the length of the longest piece of timber which could be stored in a rectangular shed 8 m by 5 m by 3 m high.

- 1** 12 cm **2** 11.6 cm **3** 8.24 cm **4** 3.46 cm
- 5** 8.37 m **6** 5.38 cm **7** 9.89 m **8** 141 m
- 9** 9.38 cm × 9.38 cm **10** 1.22 m

- 8** ABCD is a square-based pyramid. E, the apex of the pyramid is vertically above M, the point of intersection of AC and BD. If an Egyptian Pharaoh wished to build a square-based pyramid with all edges 200 m, how high (to the nearest metre) would the pyramid reach above the desert sands?
- 9** A symmetrical square-based pyramid has height 10 cm and slant edges of 12 cm. Find the dimensions of its square base.
- 10** A cube has sides of length 1 m. B is at the centre of one face, and A is an opposite vertex. Find the direct distance from A to B.

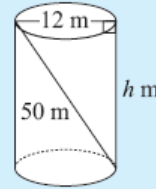


Chapter 4 G (Three Dimensional Problems)

Pythagoras' Rule is often used when finding lengths in **three-dimensional solids**.

Example 19

A 50 m rope is attached inside an empty cylindrical wheat silo of diameter 12 m as shown. How high is the wheat silo?



Let the height be h m.

$$\therefore h^2 + 12^2 = 50^2 \quad \{\text{Pythagoras}\}$$

$$\therefore h^2 + 144 = 2500$$

$$\therefore h^2 = 2356$$

$$\therefore h = \sqrt{2356} \quad \{\text{as } h > 0\}$$

$$\therefore h \doteq 48.5 \quad \{\text{to 3 s.f.}\}$$

i.e., the wheat silo is 48.5 m high.

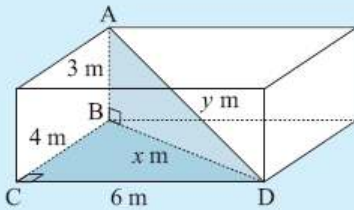
EXERCISE 4G

- 1 A cone has a slant height of 13 cm and a base radius of 5 cm. How high is the cone?
- 2 Find the length of the longest nail that could be put entirely within a cylindrical can of radius 3 cm and height 10 cm.
- 3 A 68 cm nail just fits inside a cylindrical can. The nail is removed and four identical spherical balls are fitted exactly within the can. What is the maximum radius of each ball?

The **rule of Pythagoras** is often used *twice* in three-dimensional problem solving questions. We look for right angled triangles which contain two sides of given length.

Example 20

A room is 6 m by 4 m at floor level and the floor to ceiling height is 3 m. Find the distance from a floor corner point to the opposite corner point on the ceiling.



The required distance is AD. We join BD.

$$\text{In } \triangle BCD, \quad x^2 = 4^2 + 6^2 \quad \{\text{Pythagoras}\}$$

$$\text{In } \triangle ABD, \quad y^2 = x^2 + 3^2$$

$$\therefore y^2 = 4^2 + 6^2 + 3^2$$

$$\therefore y^2 = 61$$

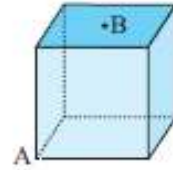
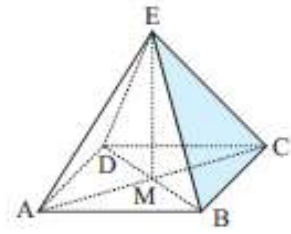
$$\therefore y = \pm\sqrt{61}$$

But $y > 0$ \therefore the required distance is $\sqrt{61} \doteq 7.81$ m. {to 3 s.f.}

- 5 A room is 6 m by 5 m and has a height of 3 m. Find the distance from a corner point on the floor to the opposite corner of the ceiling.
- 6 A rectangular box is 2 cm by 3 cm by 4 cm (internally). Find the length of the longest toothpick that can be placed within the box.
- 7 Determine the length of the longest piece of timber which could be stored in a rectangular shed 8 m by 5 m by 3 m high.

- 1** 12 cm **2** 11.6 cm **3** 8.24 cm **4** 3.46 cm
- 5** 8.37 m **6** 5.38 cm **7** 9.89 m **8** 141 m
- 9** 9.38 cm × 9.38 cm **10** 1.22 m

- 8** ABCD is a square-based pyramid. E, the apex of the pyramid is vertically above M, the point of intersection of AC and BD. If an Egyptian Pharaoh wished to build a square-based pyramid with all edges 200 m, how high (to the nearest metre) would the pyramid reach above the desert sands?
- 9** A symmetrical square-based pyramid has height 10 cm and slant edges of 12 cm. Find the dimensions of its square base.
- 10** A cube has sides of length 1 m. B is at the centre of one face, and A is an opposite vertex. Find the direct distance from A to B.

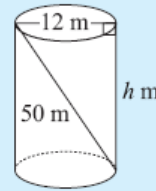


Chapter 4 G (Three Dimensional Problems)

Pythagoras' Rule is often used when finding lengths in **three-dimensional solids**.

Example 19

A 50 m rope is attached inside an empty cylindrical wheat silo of diameter 12 m as shown. How high is the wheat silo?



Let the height be h m.

$$\therefore h^2 + 12^2 = 50^2 \quad \{\text{Pythagoras}\}$$

$$\therefore h^2 + 144 = 2500$$

$$\therefore h^2 = 2356$$

$$\therefore h = \sqrt{2356} \quad \{\text{as } h > 0\}$$

$$\therefore h \doteq 48.5 \quad \{\text{to 3 s.f.}\}$$

i.e., the wheat silo is 48.5 m high.

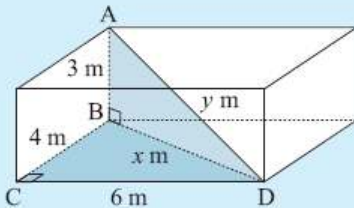
EXERCISE 4G

- 1 A cone has a slant height of 13 cm and a base radius of 5 cm. How high is the cone?
- 2 Find the length of the longest nail that could be put entirely within a cylindrical can of radius 3 cm and height 10 cm.
- 3 A 68 cm nail just fits inside a cylindrical can. The nail is removed and four identical spherical balls are fitted exactly within the can. What is the maximum radius of each ball?

The **rule of Pythagoras** is often used *twice* in three-dimensional problem solving questions. We look for right angled triangles which contain two sides of given length.

Example 20

A room is 6 m by 4 m at floor level and the floor to ceiling height is 3 m. Find the distance from a floor corner point to the opposite corner point on the ceiling.



The required distance is AD. We join BD.

$$\text{In } \triangle BCD, \quad x^2 = 4^2 + 6^2 \quad \{\text{Pythagoras}\}$$

$$\text{In } \triangle ABD, \quad y^2 = x^2 + 3^2$$

$$\therefore y^2 = 4^2 + 6^2 + 3^2$$

$$\therefore y^2 = 61$$

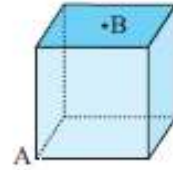
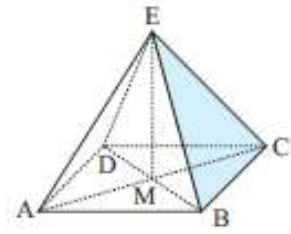
$$\therefore y = \pm\sqrt{61}$$

But $y > 0$ \therefore the required distance is $\sqrt{61} \doteq 7.81$ m. $\{\text{to 3 s.f.}\}$

- 5 A room is 6 m by 5 m and has a height of 3 m. Find the distance from a corner point on the floor to the opposite corner of the ceiling.
- 6 A rectangular box is 2 cm by 3 cm by 4 cm (internally). Find the length of the longest toothpick that can be placed within the box.
- 7 Determine the length of the longest piece of timber which could be stored in a rectangular shed 8 m by 5 m by 3 m high.

- 1** 12 cm **2** 11.6 cm **3** 8.24 cm **4** 3.46 cm
- 5** 8.37 m **6** 5.38 cm **7** 9.89 m **8** 141 m
- 9** $9.38 \text{ cm} \times 9.38 \text{ cm}$ **10** 1.22 m

- 8** ABCD is a square-based pyramid. E, the apex of the pyramid is vertically above M, the point of intersection of AC and BD. If an Egyptian Pharaoh wished to build a square-based pyramid with all edges 200 m, how high (to the nearest metre) would the pyramid reach above the desert sands?
- 9** A symmetrical square-based pyramid has height 10 cm and slant edges of 12 cm. Find the dimensions of its square base.
- 10** A cube has sides of length 1 m. B is at the centre of one face, and A is an opposite vertex. Find the direct distance from A to B.

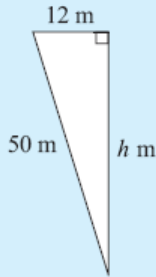
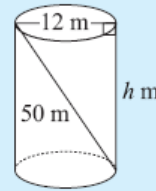


Chapter 4 G (Three Dimensional Problems)

Pythagoras' Rule is often used when finding lengths in **three-dimensional solids**.

Example 19

A 50 m rope is attached inside an empty cylindrical wheat silo of diameter 12 m as shown. How high is the wheat silo?



Let the height be h m.

$$\therefore h^2 + 12^2 = 50^2 \quad \{\text{Pythagoras}\}$$

$$\therefore h^2 + 144 = 2500$$

$$\therefore h^2 = 2356$$

$$\therefore h = \sqrt{2356} \quad \{\text{as } h > 0\}$$

$$\therefore h \doteq 48.5 \quad \{\text{to 3 s.f.}\}$$

i.e., the wheat silo is 48.5 m high.

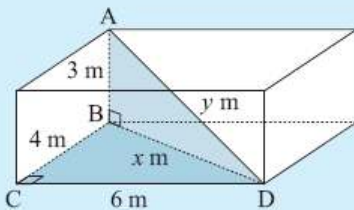
EXERCISE 4G

- 1 A cone has a slant height of 13 cm and a base radius of 5 cm. How high is the cone?
- 2 Find the length of the longest nail that could be put entirely within a cylindrical can of radius 3 cm and height 10 cm.
- 3 A 68 cm nail just fits inside a cylindrical can. The nail is removed and four identical spherical balls are fitted exactly within the can. What is the maximum radius of each ball?

The **rule of Pythagoras** is often used *twice* in three-dimensional problem solving questions. We look for right angled triangles which contain two sides of given length.

Example 20

A room is 6 m by 4 m at floor level and the floor to ceiling height is 3 m. Find the distance from a floor corner point to the opposite corner point on the ceiling.



The required distance is AD. We join BD.

$$\text{In } \triangle BCD, \quad x^2 = 4^2 + 6^2 \quad \{\text{Pythagoras}\}$$

$$\text{In } \triangle ABD, \quad y^2 = x^2 + 3^2$$

$$\therefore y^2 = 4^2 + 6^2 + 3^2$$

$$\therefore y^2 = 61$$

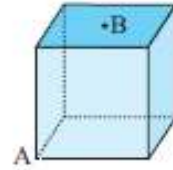
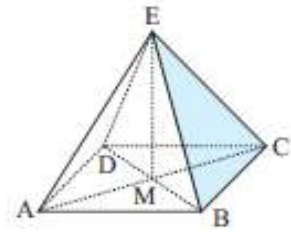
$$\therefore y = \pm\sqrt{61}$$

But $y > 0$ \therefore the required distance is $\sqrt{61} \doteq 7.81$ m. $\{\text{to 3 s.f.}\}$

- 5 A room is 6 m by 5 m and has a height of 3 m. Find the distance from a corner point on the floor to the opposite corner of the ceiling.
- 6 A rectangular box is 2 cm by 3 cm by 4 cm (internally). Find the length of the longest toothpick that can be placed within the box.
- 7 Determine the length of the longest piece of timber which could be stored in a rectangular shed 8 m by 5 m by 3 m high.

- 1** 12 cm **2** 11.6 cm **3** 8.24 cm **4** 3.46 cm
- 5** 8.37 m **6** 5.38 cm **7** 9.89 m **8** 141 m
- 9** $9.38 \text{ cm} \times 9.38 \text{ cm}$ **10** 1.22 m

- 8** ABCD is a square-based pyramid. E, the apex of the pyramid is vertically above M, the point of intersection of AC and BD. If an Egyptian Pharaoh wished to build a square-based pyramid with all edges 200 m, how high (to the nearest metre) would the pyramid reach above the desert sands?
- 9** A symmetrical square-based pyramid has height 10 cm and slant edges of 12 cm. Find the dimensions of its square base.
- 10** A cube has sides of length 1 m. B is at the centre of one face, and A is an opposite vertex. Find the direct distance from A to B.

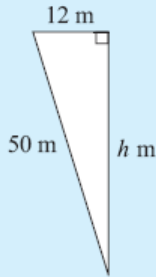
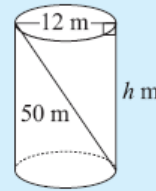


Chapter 4 G (Three Dimensional Problems)

Pythagoras' Rule is often used when finding lengths in **three-dimensional solids**.

Example 19

A 50 m rope is attached inside an empty cylindrical wheat silo of diameter 12 m as shown. How high is the wheat silo?



Let the height be h m.

$$\therefore h^2 + 12^2 = 50^2 \quad \{\text{Pythagoras}\}$$

$$\therefore h^2 + 144 = 2500$$

$$\therefore h^2 = 2356$$

$$\therefore h = \sqrt{2356} \quad \{\text{as } h > 0\}$$

$$\therefore h \doteq 48.5 \quad \{\text{to 3 s.f.}\}$$

i.e., the wheat silo is 48.5 m high.

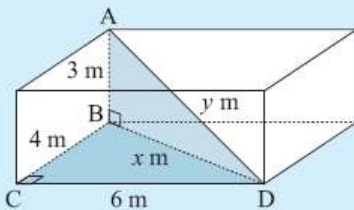
EXERCISE 4G

- 1 A cone has a slant height of 13 cm and a base radius of 5 cm. How high is the cone?
- 2 Find the length of the longest nail that could be put entirely within a cylindrical can of radius 3 cm and height 10 cm.
- 3 A 68 cm nail just fits inside a cylindrical can. The nail is removed and four identical spherical balls are fitted exactly within the can. What is the maximum radius of each ball?

The **rule of Pythagoras** is often used *twice* in three-dimensional problem solving questions. We look for right angled triangles which contain two sides of given length.

Example 20

A room is 6 m by 4 m at floor level and the floor to ceiling height is 3 m. Find the distance from a floor corner point to the opposite corner point on the ceiling.



The required distance is AD. We join BD.

$$\text{In } \triangle BCD, \quad x^2 = 4^2 + 6^2 \quad \{\text{Pythagoras}\}$$

$$\text{In } \triangle ABD, \quad y^2 = x^2 + 3^2$$

$$\therefore y^2 = 4^2 + 6^2 + 3^2$$

$$\therefore y^2 = 61$$

$$\therefore y = \pm\sqrt{61}$$

But $y > 0$ \therefore the required distance is $\sqrt{61} \doteq 7.81$ m. $\{\text{to 3 s.f.}\}$

- 5 A room is 6 m by 5 m and has a height of 3 m. Find the distance from a corner point on the floor to the opposite corner of the ceiling.
- 6 A rectangular box is 2 cm by 3 cm by 4 cm (internally). Find the length of the longest toothpick that can be placed within the box.
- 7 Determine the length of the longest piece of timber which could be stored in a rectangular shed 8 m by 5 m by 3 m high.

- 1** 12 cm **2** 11.6 cm **3** 8.24 cm **4** 3.46 cm
- 5** 8.37 m **6** 5.38 cm **7** 9.89 m **8** 141 m
- 9** 9.38 cm × 9.38 cm **10** 1.22 m

- 8** ABCD is a square-based pyramid. E, the apex of the pyramid is vertically above M, the point of intersection of AC and BD. If an Egyptian Pharaoh wished to build a square-based pyramid with all edges 200 m, how high (to the nearest metre) would the pyramid reach above the desert sands?
- 9** A symmetrical square-based pyramid has height 10 cm and slant edges of 12 cm. Find the dimensions of its square base.
- 10** A cube has sides of length 1 m. B is at the centre of one face, and A is an opposite vertex. Find the direct distance from A to B.

